

Kendriya Vidyalaya Sangathan Bangalore Region
Blue Print -II Term End Exam 2021-22

Class : IV
Subject : Hindi

Total Marks-40
Time – 1 hour

Sl No.	Chapter/Lesson/Poem	Total marks	VSA	SA	LA	No. of questions
1	अपठित गद्यांश	5	1 x 5			5
2	<u>कविता</u> पाठ - ८ कौन पाठ - ११ पढक्कू की सूझ	1	1 x 1			1
	<u>कहानी</u> पाठ - ९ स्वतंत्रता की ओर पाठ - १० थप्प रोटी थप्प दाल पाठ - १२ सुनीता की पहिया कुर्सी पाठ - १३ हुदहुद पाठ - १४ मुफ्त ही मुफ्त	4		2 x 2		2
3	व्याकरण	10	1 x 10			10
4	सृजनात्मक लेखन	5			5 x 1	1
5	वर्तनी	5	1 x 5			5
6	शब्द भंडार	5	1 x 5			5
7	सुलेख	5			5 x 1	1
	TOTAL	40				

Kendriya Vidyalaya Sangathan Bangalore Region
Blue Print -II Term End Exam 2021-22

Class : IV

Subject: English

Total Marks-40

Time – 1 hour

Sl No.	Chapter/Lesson/Poem	Total marks	VSA	SA	LA	No. of questions
1	READING COMPREHENSION (UNSEEN PASSAGE)	5	1 x 5			5
2	<u>POETRY</u> 1) The Donkey/I had a Little Pony 2) Hiawatha 3) A Watering Rhyme 4) Books 5) The Naughty Boy	1	1 x 1			1
	<u>PROSE</u> 1) The Milkman's Cow 2) The Scholar's Mother Tongue 3) THE Giving Tree 4) Going to buy a Book 5) Pinocchio	4		2 x 2		2
3	GRAMMAR	10	10 X1			10
4	CREATIVE WRITING	5			1 X 5	1
5	SPELLING	5	5 X 1			5
6	VOCABULARY	5	5 X 1			5
7	HANDWRITING	5			1 X 5	1
	TOTAL	40				

Kendriya Vidyalaya Sangathan Bangalore Region
Blue Print -II Term End Exam 2021-22

Class : IV
Subject: Mathematics

Total Marks-40
Time – 1 hour

CHAPTERS	KNOWLEDGE-10			UBC-10			AC-10			PSA-10			TOTAL MARKS
	VSA	SA	LA	VSA	SA	LA	VSA	SA	LA	VSA	SA	LA	
CARTS AND WHEELS	1(1)			1(1)							1(2)		4
HALVES AND QUARTERS		1(2)					1(1)				1(2)		5
PLAY WITH PATTERNS					1(2)			1(2)					4
TABLES AND SHARES	1(1)			1(1)						1(1)		1(4)	7
HOW HEAVY HOW LIGHT								1(2)	1(4)				6
FIELDS AND FENCES		1(2)				1(4)				1(1)			7
SMART CHARTS			1(4)		1(2)		1(1)						7
TOTAL													40

Kendriya Vidyalaya Sangathan Bangalore Region
Blue Print -II Term End Exam 2021-22

Class : IV
Subject : EVS

Total Marks-40
Time – 1 hour

CHAPTERS	OBSERVATION-10			IDENTIFICATION-15			DISCOVERY OF FACTS-15			TOTAL MARKS
	VSA	SA	LA	VSA	SA	LA	VSA	SA	LA	
FROM MARKET TO HOME					1(2)					2
A BUSY MONTH	2(1)							1(2)		4
NANDITA IN MUMBAI								1(2)		2
TOO MUCH WATER, TOO LITTLE WATER	1(1)						1(1)	1(2)		4
ABDUL IN THE GARDEN	2(1)						2(1)			4
EATING TOGETHER	1(1)									1
FOOD AND FUN	1(1)									1
THE WORLD IN MY HOME						1(4)				4
POCHAMPALLI	1(1)			1(1)	1(2)					4
HOME AND ABROAD	1(1)			2(1)	1(2)					5
SPICY RIDDLES	1(1)			1(1)						2
DEFENCE OFFICER WAHIDA							1(1)		1(4)	5
CHUSKIT GOES TO SCHOOL				1(1)			1(1)			2
TOTAL	10(1)			5(1)	3(2)	1(4)	5(1)	3(2)	1(4)	40

UNDERSTANDING BASIC CONCEPTS

I Fill in the blanks

(2X 1=2marks)

- 1) Extend the pattern- 8 Z , 16 Y , 24 X , _____ , _____
- 2) Understand the pattern and fill in the blank
RAJU = SBKV ; VIJAY = _____

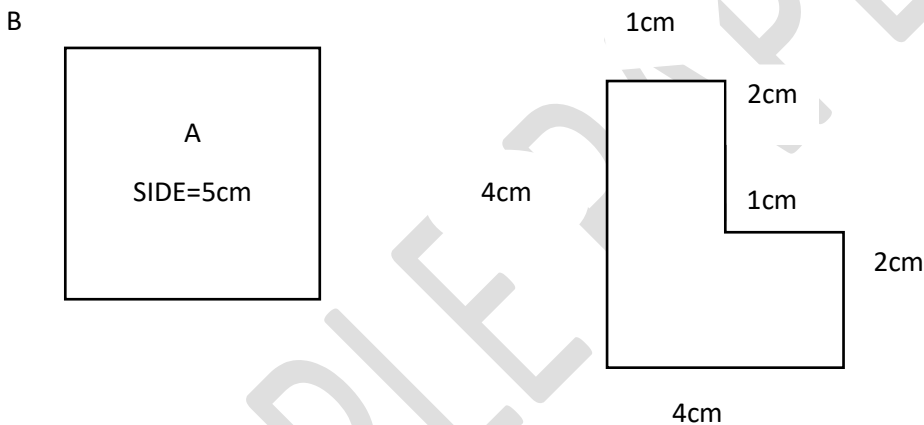
II Do as directed

(2X2=4marks)

1 Fill in the blanks

- a) 5 kg = _____ g
- b) $1/2m =$ _____ cm

2 Which figure has greater boundary?



III Study the table and answer the question given below

I represents 5 children

(1x4=4marks)

Hobby	Number of children
Painting	
Music	
Gardening	
Reading	

- a. How many children like painting?
- b. Which hobby is liked by most of the children?
- c. Which hobby is liked by the least number of children?
- d. Number of children whose hobby is reading is _____ (more/less) than number of children whose hobby is Music

ABILITY TO COMPUTE

I Fill in the blanks

(2X 1=2marks)

1. $\frac{1}{2}$ of $\frac{1}{2}$ = _____
2. $36 \div 9$ = _____

II Solve with steps

(2X2=4marks)

1. Find the quotient by repeated subtraction method $1000 \div 250$ = _____
2. How much wire is needed for fencing 3 times around a square field of side 50 m.

III. In this bill fill in the missing numbers


(1X4=4marks)

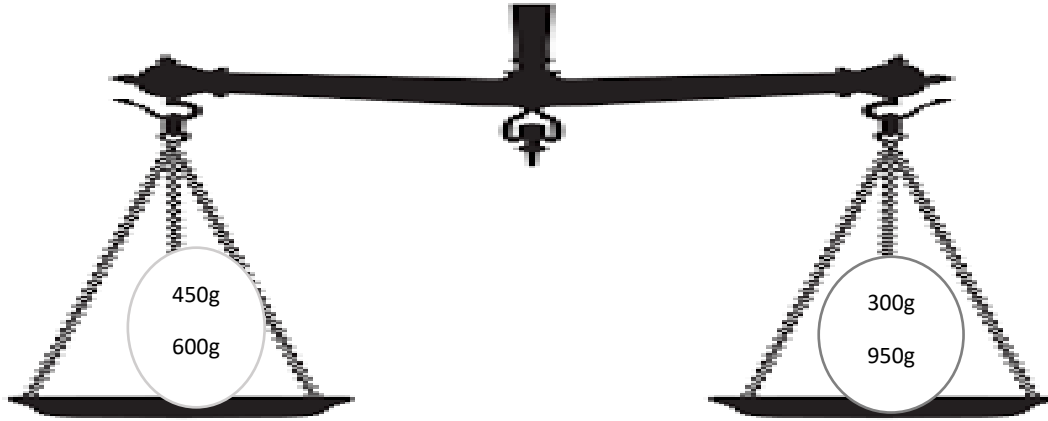
S.no.	Item	Cost per kg (₹)	Quantity (in kg)	Amount ₹
1	Sugar	30	4	
2	Rice	50	$2 \frac{1}{2}$	
3	Wheat	40	$\frac{3}{4}$	
4	Cashew	800	$\frac{1}{4}$	

PROBLEM SOLVING ABILITY

I Do as directed

(2x1=2marks)

1. Which pan of the balance will go down? Represent with an 



2. There are 36 socks . How many children can wear them?

II Answer the following.

(2X2=4marks)

1. Draw a circle of diameter 8 cm.

2. Rohan wants to pack 488 ladoos equally in 8 boxes. Find the number of ladoos he packs in each box ?

III Complete the table

(1X4=4marks)

Notes / coins	Number	Amount (₹)
100 rupees	8	₹ 800
50 rupees	11	
20 rupees	20	
5 rupees	25	

Total = _____

Kendriya Vidyalaya Sangathan

Bengaluru Region

Sample Question Paper Set II- Term II Session 2021-22

Class: IV

Max Marks: 40

Subject: Mathematics

Time: 2 Hours

PART-A (KNOWLEDGE)

I Fill in the blanks

(2X 1=2marks)

1. In the fraction $\frac{4}{5}$, numerator is _____ and denominator is _____.
2. The length of the boundary of a closed figure is called its _____.

II Do as directed

(2X 2=4marks)

1. Divide the given rectangles into 4 equal parts in two different ways.



2. If

A	B	C	D	E	F	G	H	I	J	K	L	M	N	O	P	Q	R	S	T	U	V	W	X
1	2	3	4	5	6	7	8	9	10	11	12	13	14	15	16	17	18	19	20	21	22	23	24

What will this represent?

2	5		16	21	14	3	20	21	1	12
---	---	--	----	----	----	---	----	----	---	----

Decode and write.

III . Study the following table and answer

(4X1=4marks)

Programme	Number of children liking it	Number of children disliking it
News	10	20
Serials	0	30
Cartoons	30	0
Comedy Show	25	5
Sports	21	9

- How many children like sports? _____
- How many children dislike news? _____
- Which programme is liked by most children? _____
- Which programme is disliked by most children? _____

UNDERSTANDING BASIC CONCEPTS

I Fill in the blanks

(2X 1=2marks)

- 1 kg = 600 g + _____ g
- Put the correct symbol (+ / - / x / ÷) in the box.

$$80 \square 4 = 20$$

II Solve the following.

(2X 2=4marks)

- The weight of 1 papaya is equal to the weight of 2 oranges. How many oranges are needed to balance 3 papayas?
- Fill in the missing numbers in this pattern:

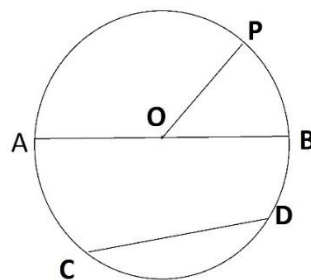
$$\begin{aligned} 8 + 4 &= 12 \\ 8 + 14 &= 22 \\ 8 + 24 &= 32 \\ 8 + \underline{\quad} &= \underline{\quad} \\ 8 + \underline{\quad} &= \underline{\quad} \end{aligned}$$

III Fill in the blanks

(1X4=4marks)

Observe the given circle and name the following parts of the circle.

O= _____
 OP= _____
 AB= _____
 CD= _____



ABILITY TO COMPUTE

I Fill in the blanks

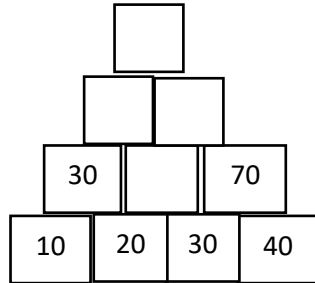
(2X 1=2marks)

- Perimeter of a square of side 2 cm is _____.
- A frog jumps 3 steps at a time. Starting from 0, it has taken _____ jumps to reach 27th step.

II Solve the following (show the working).

(2X2=4marks)

1. Find the product- 48×25
2. Complete the number tower-



III Complete the table.

(1X4=4m)

S.NO.	Item	Cost per kg In ₹.	Quantity	Amount ₹.
1.	Onion	20	$\frac{3}{4}$ kg	
2.	Potato	30	$1 \frac{1}{2}$ kg	
3.	Brinjal	40	$3 \frac{1}{4}$ kg	
4.	Carrot	80	$\frac{1}{4}$ kg	

PROBLEM SOLVING ABILITY

I Do as directed.

(2X 1=2marks)

1. Express 6050 paise in rupees and paise.
2. Write the fraction for the unshaded portion



II Solve the following (show the working).

(2X2=4marks)

1. There are 400 books in a box. Each book weighs 75 g. Find the weight of all the books. Write your answer in kg and g.
2. A hockey field is 91 m 40cm long and 55 m wide. How long is the boundary of the field?

III Solve the following (show the working).

(1X4=4marks)

- 1 Daisy bought 20 apples, 32 oranges and 40 bananas. She gave $\frac{1}{2}$ the apples, $\frac{1}{2}$ the oranges and $\frac{1}{4}$ bananas to her friend and kept the remaining fruits for her.
 - a) Find the number of apples, oranges and bananas her friend got.

b) Find the number of fruits remaining with her.

SAMPLE PAPER

Kendriya Vidyalaya Sangathan

Bengaluru Region

Sample Question Paper Set I- Term II Session 2021-22

Class: IV

Max Marks: 40

Subject: Mathematics

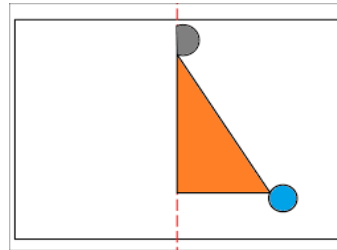
Time: 2 Hours

KNOWLEDGE

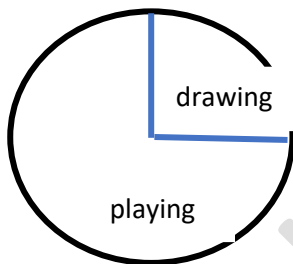
I Do as directed

(2X 1=2marks)

1. Draw the other half of the given picture and colour.



2. Observe the Pie chart and write the fraction for the part which shows children who like playing?



II Do as directed


(2X2=4marks)

1. Tick the correct picture which represents a fraction and give reason.


A



B



2. Draw and arrange 18 flowers equally in 6 rows .



III. Answer the following

(4X1=4marks)

1. Study the table and answer the questions given below

Favourite fruit	Number of children
Orange	45
Kiwi	32

Musk melon	28
Grapes	43

- Which fruit is liked by most of the children? _____
- Which fruit is liked by least number of children? _____
- Find the total number of children who like kiwi and grapes. _____
- How many more children like oranges than muskmelon? _____

UNDERSTANDING BASIC CONCEPT

I Fill in the blanks

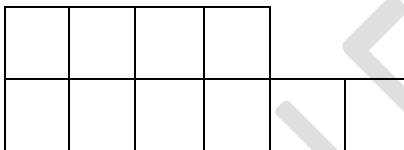
(2X 1=2marks)

- $\frac{1}{2}$ m = _____ cm
- One ₹ 500 is= _____ 50 rupee notes

II Answer the following

(2X2=4m)

- Find the area of the following figure which is divided into unit squares.



- Draw a chapati chart for the following data.-

The drink children like	Number of children
Milk	50
Coffee	25
Tea	25

III Answer the following

(1X4=4marks)

- Study the table and answer the following:

NAME	HEIGHT IN cm	WEIGHT in kg
Leena	110	23
Meena	103	20
Abdul	118	26
Praveen	111	24

- Who is the shortest? _____ Mention the height. _____
- Who is the heaviest? _____ Mention the weight. _____

- c. Who is taller among Praveen and Meena? _____
 d. Who is lighter than Leena? _____

ABILITY TO COMPUTE

I Fill in the blanks

1. $\frac{3}{4}$ of 12 apples is = _____ apples. _

(2X 1=2marks)

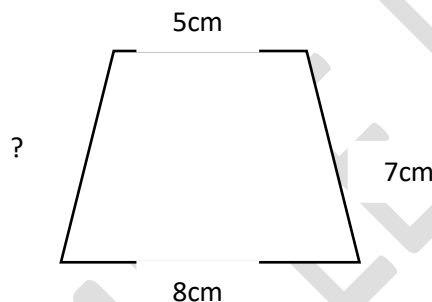


2. If the radius of a circle is 6 cm then its diameter will be _____.

II Do as directed

(2X2=4marks)


1. Arrange in columns and add : 4 kg 250g + 3kg 750g
 2. Find the missing length, If the perimeter of the following figure is 32cm.



III Answer the following

(1X4=4marks)

1. Renu wants to stitch lace around a square table cloth of side 2m .



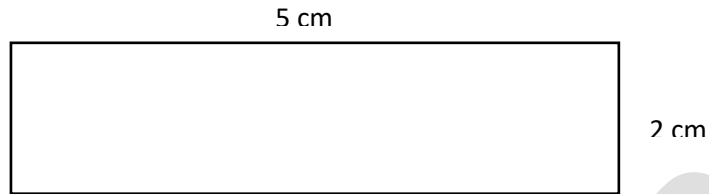
- a. How much of lace is used for 1 table cloth?
 b. How much of lace is used in 3 such table clothes?
 c. If Renu bought 25 m of lace , how much lace will be left after using for 3 table clothes?
 d. If 1 m lace costs ₹. 10, find the cost of 25m of lace.

PROBLEM SOLVING ABILITY

I Solve

(2X 1=2marks)

1. How many small squares of size 1cm can be filled in the given rectangle?



2. 21 days = _____ weeks

II Answer the following

(2X2=4marks)

1. If we distribute 72 tomatoes equally in 6 baskets. How many tomatoes will be there in each box?

2. Write the letters X,Y,Z in the box, so that no letter comes twice in any line.

III Solve with steps

(1X4=4m)

1. Reena wants change for ₹ 500. How many notes will she get if she wants in return-
- (a) all 100 rupee notes? _____
- (b) all 50 rupee notes? _____
- (c) all 10 rupee notes? _____
- (d) all 20 rupee notes? _____

केन्द्रीय विद्यालय संगठन

बेंगलुरु संभाग

प्रश्नपत्र (नमूना) सेट-III अवधि II सत्र 2021-2022

कक्षा : चार

पूर्णांक: 40

विषय : हिन्दी

समय : 2 घंटे

भाग - 1 अपठित गद्यांश

नीचे लिखे गद्यांश को पढ़कर प्रश्नों के उत्तर लिखिए ।

किसी जंगल में एक सुनहरी चिड़िया रहती थी। उसके पंख सोने जैसे थे। जंगल के सारे पशु-पक्षी उसे बहुत प्यार करते थे। इस लाड़-प्यार से वह चिड़िया बहुत घमंडी हो गई। इसी घमंड में डूबी वह एक दिन आकाश में बहुत ऊँची चली गई। उड़ते-उड़ते उसे इस बात का ध्यान ही नहीं रहा कि वह सूरज के एकदम पास आ गई है। उसका सारा शरीर जलने लगा। वह दर्द से रोने-चिल्लाने लगी। वह एक साधु की कुटिया के आगे आ गिरी। साधु ने उसे उठा लिया और उसकी खूब सेवा की। थोड़े दिनों में वह ठीक हो गई, पर उसका शरीर जलने से काला हो गया। चिड़िया को दुखी देखकर साधु ने उसे मधुर आवाज़ का आशीर्वाद दिया। अब सब उसे कोयल के नाम से जानने लगे।

- 1) सुनहरी चिड़िया कहाँ रहती थी ?
- 2) लाड़-प्यार से उस चिड़िया को क्या हुआ ?
- 3) आकाश में उड़ते-उड़ते चिड़िया किसके पास पहुँच गई ?
- 4) चिड़िया का शरीर जलने से कैसा हो गया ?
- 5) अब यह चिड़िया किस नाम से जानी जाती है ?

भाग - 2 गद्य/ पद्य

प्रश्नों के उत्तर लिखिए ?

- 1) पढ़क्कू कौन सा शास्त्र पढ़ता था ? (1 अंक)
- 2) सुनीता को सब लोग गौर से क्यों देख रहे थे ? (2 अंक)

3) नाटक का नाम 'थप्प रोटी थप्प दाल' क्यों है ?

(2 अंक)

स्वस्थ रहने के लिए हमें क्या-क्या खाना चाहिए ?

भाग-3 व्याकरण (10 x 1 = 10 अंक)

1) सही सर्वनाम चुनकर खाली जगह भरिए ।

जीनल ने घर बुलाया ।

क) मुझे

ख) मैं

ग) आप

2) अल्प विराम का चिह्न है-

क) ?

ख) ,

ग) “ ”

3) विशेषण शब्द लिखिए ।

_____ चश्मा

4) सही जगह पर अनुस्वार (बिंदु) लगाइए ।

इतज़ार

5) सही जगह पर चन्द्रबिन्दु लगाइए ।

गाव

6) उचित मुहावरा लिखकर वाक्य पूरे करिए ।

हमें परीक्षा में अच्छे अंक लाने के लिए दिन _____ है।

7) अर्थ लिखिए ।

मंतिख - _____

8) संज्ञा शब्दों पर गोला डालिए ।

भारत हमारा देश है ।

9) लिंग बदल कर लिखिए ।

चूहा- _____

10) सन्युक्ताक्षर से एक शब्द बनाइए ।

म्म - _____

भाग - 4 सृजनात्मक लेखन (5 अंक)

भीखू भाई के बारे में पाँच वाक्यों का एक अनुच्छेद लिखिए ।

अथवा

कोई शरारती जीव घर में घुसकर क्या- क्या शरारत करता है ? उसके बारे में पाँच वाक्यों का एक अनुच्छेद लिखिए ।

भाग - 5 (क) वर्तनी (5 x 1 = 5 अंक)

1) र् के रूप को सही जगह पर डालिए । जैसे खर्च

तकशास्त्र

2) सही वर्ण लिखकर शब्द पूरे करिए ।

गौशा__

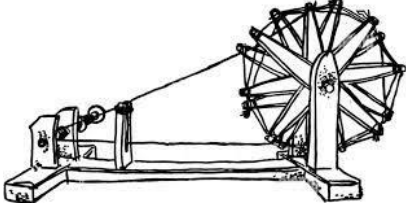
3) वर्णों को सही क्रम में डालकर शब्द बनाइए ।

दा का दु र न - _____

4) शुद्ध शब्द पर गोला डालिए ।

क्योंकी , क्योंकि , कयोंकि

5) चित्र देखकर नाम लिखिए ।



भाग - 5 (ख) शब्द भंडार (अंक - 5)

1) समान तुक वाले शब्द लिखिए ।

सोने - _____

2) वाक्यांश के लिए एक शब्द लिखिए ।

जो कहानी लिखता है - _____

3) विलोम शब्द लिखिए ।

थोड़ा - _____

4) समान अर्थ वाले शब्द लिखिए ।

फुर्ती - _____

5) वचन बदलिए ।

कुर्सी - _____

भाग - 6 सुलेख (5- अंक)

जीवन में बड़ों का आदर करना सबसे महत्वपूर्ण होता है । बड़ों का आदर जब हम करते हैं, तब वास्तव में हम उनका आशीर्वाद पाते हैं और जीवन में आ रही बड़ी से बड़ी समस्याओं को हम हल करते हैं । बड़ों का आशीर्वाद जीवन में कई परिस्थितियों में हमारे काम आता है।

केन्द्रीय विद्यालय संगठन

बेंगलुरु संभाग

प्रश्नपत्र (नमूना) सेट- II अवधि II सत्र 2021-2022

कक्षा : चार

पूर्णांक: 40

विषय : हिन्दी

समय : 2 घंटे

भाग - 1 अपठित गद्यांश (अंक - 5)

नीचे लिखे गद्यांश को पढ़कर प्रश्नों के उत्तर लिखिए ।

एक तालाब था। उस तालाब में कई मछलियाँ रहती थी। इनमें से दो मछलियाँ आपस में बड़ी अच्छी सहेलियाँ थी। पहली मछली बड़ी समझदार थी। वह बिना सोचे-समझे कोई भी काम नहीं करती थी। दूसरी मछली मस्त थी। उसे पानी में उछल-कूद मचाने में बड़ा मज़ा आता था। एक दिन कुछ लोग तालाब के किनारे मछलियाँ पकड़ने आए। उन्होंने तालाब में जाल फेंककर बहुत सारी मछलियाँ पकड़ ली। वे दोनों मछलियाँ भी जाल में फँस गईं। समझदार मछली ने अपना शरीर ऐसा बना लिया जैसे वह मर गई हो। उन लोगों ने उसे मरा समझकर फेंक दिया। दूसरी मछली जाल में बहुत उछल-कूद मचा रही थी, उन लोगों का ध्यान उसकी ओर गया और उन्होंने उसे पकड़कर टोकरी में डाल दिया।

- 1) तालाब में कौन रहता था ?
- 2) मछलियों में समझदार कौन थी ?
- 3) मछलियों में मस्त कौन थी ?
- 4) जाल में कौन फँस गई ?
- 5) लोगों ने किस मछली को पकड़कर टोकरी में डाला ?

भाग - 2 गद्य/ पद्य

प्रश्नों के उत्तर लिखिए -

- 1) 'कौन' कविता में किसकी शैतानियों की बात कही गई है ?

(1 अंक)

2) धनी बिन्नी की देखभाल कैसे करता था ?

(2 अंक)

3) हुदहुद को कहीं हजामिन चिड़िया और कहीं पदुबया के नाम से पुकारते हैं ? क्यों ? (2 अंक)

भाग-3 व्याकरण (10 x 1 = 10 अंक)

1) सही **सर्वनाम** चुनकर खाली जगह भरिए ।

अमन ने पूछा घर कहाँ है ?

क) तुम

ख) मैं

ग) तुम्हारा

2) पूर्ण विराम का चिह्न है-

क) ?

ख) ,

ग) ।

3) विशेषण शब्द लिखो ।

_____ हलवा

4) सही जगह पर अनुस्वार(बिंदु) लगाइए ।

बदगोभी

5) सही जगह पर चन्द्रबिन्दु लगाइए ।

बाध

6) उचित मुहावरा लिखकर वाक्य पूरा करिए ।

किसान खेतों में फसल उगाने के लिए बहुत पसीना _____ है।

7) अर्थ लिखिए ।

गज़ब - _____

8) संज्ञा शब्द पर गोला डालिए ।

हमने हुदहुद के बारे में सीखा ।

9) लिंग बदल कर लिखिए ।

मालिन - _____

10) संन्युक्ताक्षर से एक शब्द बनाइए ।

प्प - _____

भाग - 4 सृजनात्मक लेखन (अंक - 5)

हुदहुद के बारे में पाँच वाक्यों का एक अनुच्छेद लिखिए ।

अथवा

चित्र और सहायक शब्दों की मदद से पाँच वाक्यों का एक अनुच्छेद लिखिए।


फुटबॉल

सड़क

टक्कर

चोट

अस्पताल



भाग - 5 (क) वर्तनी (अंक 5 x 1 = 5)

1) र् के रूप को सही जगह पर डालिए । जैसे खर्च

कुसियाँ

2) सही वर्ण लिखकर शब्द पूरे करिए ।

बा__शाह

3) वर्णों को सही क्रम में डालकर शब्द बनाइए ।

ल गी क - _____

4) शुद्ध शब्द पर गोला डालिए ।

बगीचा , बागिचा , बागीचा

5) चित्र देखकर नाम लिखिए ।



भाग - 5 (ख) शब्द भंडार (5 -अंक)

1) समान तुक वाले शब्द लिखिए ।

आओगे - _____

2) वाक्यांश के लिए एक शब्द लिखिए ।

जो मिट्टी के बर्तन बनाता है - _____

3) विलोम शब्द लिखिए ।

नई - _____

4) समान अर्थ वाले शब्द लिखिए ।

ज़िन्दगी - _____

5) वचन बदलिए ।

पैसा - _____

भाग - 6 सुलेख (अंक - 5)

दोस्त एक-दूसरे को भावनात्मक सहायता प्रदान करने के लिए हैं। जब हम कमज़ोर महसूस करते हैं, तब वे हमें खुश करते हैं, पढ़ाई में हमारी सहायता करते हैं और विभिन्न मज़ेदार गतिविधियों में हमारे साथ शामिल होते हैं। मित्र हमारे जीवन का एक अनिवार्य हिस्सा हैं। दोस्तों के बिना जीवन काफ़ी सुस्त और उबाऊ हो सकता है।

केन्द्रीय विद्यालय संगठन

बेंगलुरु संभाग

प्रश्नपत्र (नमूना) सेट-1 अवधि II सत्र 2021-2022

कक्षा : चार

पूर्णांक: 40

विषय : हिन्दी

समय : 2 घंटे

भाग - 1 अपठित गद्यांश

(5 x 1=5 अंक)

नीचे लिखे गद्यांश को पढ़कर प्रश्नों के उत्तर लिखिए ।

हॉलैंड यूरोप का एक प्रसिद्ध देश है। यह देश समुद्र तट पर बसा हुआ है। देश को समुद्र के पानी से बचाने के लिए लोगों ने एक बड़ी दीवार बना रखी थी। दीवार के पास के एक छोटे से गाँव में एक मज़दूर रहता था। इसका बेटा पीटर भी इसी रास्ते से होकर स्कूल जाया करता था। एक दिन पीटर के स्कूल में देर से आने के कारण अध्यापक महोदय ने उसे दो घंटे के बाद छुट्टी दी। शाम हो गई थी। अचानक पीटर ने दीवार में से एक जगह बहते पानी को देखा । वह यह सोचकर डर गया कि इससे सारा गाँव ही बह जाएगा। उसने थोड़े पत्थर इस सुराख में भरे और फिर अपनी हथेली से उस सुराख को रोके रखा । इससे पानी बंद हो गया।

- 1) समुद्र तट पर कौन-सा देश बसा हुआ था?
- 2) देश को समुद्र के पानी से बचाने के लिए लोगों ने क्या किया?
- 3) दीवार के पास के गाँव में कौन रहता था ?
- 4) पीटर किसका बेटा था ?
- 5) अचानक पीटर ने दीवार में क्या देखा ?

भाग - 2 गद्य/ पद्य

प्रश्नों के उत्तर लिखिए :-

- 1) "कौन" कविता में शरारती जीव कौन था ? (1 अंक)
- 2) सुनीता को दुकानदार का व्यवहार क्यों बुरा लगा ? (2 अंक)

हमें दिव्यांग लोगों से कैसा व्यवहार करना चाहिए ?

3) क्या भीखूभाई को नारियल सच में मुफ्त में ही मिला ? क्यों ?

(2 अंक)

भाग-3 व्याकरण

(10 x 1 = 10 अंक)

1) सही **सर्वनाम** चुनकर खाली जगह भरिए ।

माँ ने कहा कहाँ जा रहे हो ?

क) तुम

ख) मैं

ग) उसका

2) प्रश्न सूचक चिह्न है-

क) ?

ख) ,

ग) ।

3) विशेषण शब्द लिखिए ।

_____ घास

4) सही जगह पर अनुस्वार (बिंदु) लगाइए ।

पसद

5) सही जगह पर चन्द्रबिन्दु लगाइए ।

कुआ

6) उचित मुहावरा लिखकर वाक्य पूरे करिए ।

एवेरस्ट पर चढ़ने के लिए मुझे एड़ी _____ लगाना पड़ा ।

7) अर्थ लिखिए ।

भेद - _____

8) संज्ञा शब्द पर गोला डालिए ।

हम दिल्ली गए थे ।

9) लिंग बदल कर लिखिए ।

मालिक - _____

10) सन्युक्ताक्षर से एक शब्द बनाइए ।

न्न - _____


भाग - 4 सृजनात्मक लेखन (5 अंक)

बापू जी के बारे में पाँच वाक्यों का एक अनुच्छेद लिखिए ।

अथवा

चित्र और सहायक शब्दों की मदद से पाँच वाक्यों का एक अनुच्छेद लिखिए।

उठा देर स्कूल गेट बंद चढ़ा गिर गया डॉक्टर



भाग - 5 (क) वर्तनी (5 x 1 = 5 अंक)

1) र के रूप को सही जगह पर डालिए । जैसे:- आशीर्वाद

खच

2) सही वर्ण लिखकर शब्द पूरे करिए ।

धन्य__द

3) वर्णों को सही क्रम में डालकर शब्द बनाइए ।

ता स्व त्र तं - _____

4) शुद्ध शब्द पर गोला डालिए ।

पहीया , पाहिया , पहिया

5) चित्र देखकर नाम लिखिए ।



भाग - 5 (ख) शब्द भंडार (5 अंक)

1) समान तुक वाले शब्द लिखिए ।

माया - _____

2) वाक्यांश के लिए एक शब्द लिखिए ।

जो सोने के आभूषण गढ़ता है - _____

3) विलोम शब्द लिखिए ।

बेवकूफ - _____

4) समान अर्थ वाले शब्द लिखिए ।

सुबह - _____

5) वचन बदलिए ।

रुपया - _____

भाग - 6 सुलेख (5अंक)

एक व्यक्ति जो हमेशा समय को महत्व देता है और हमेशा अपने समय का प्रबंधन करता है वह एक सफल व्यक्ति होगा और एक खुशहाल जीवन जी सकता है। हमें हमेशा समय को महत्व देना चाहिए और अपना समय बचाना चाहिए। समय उल्टा नहीं हो सकता।

Kendriya Vidyalaya Sangathan

Bengaluru Region

Sample Question Paper Set :3 - Term II Session 2021-22

Class: IV







Max Marks: 40





Subject :EVS

Time: 2 Hours

SECTION A (EACH CORRECT ANSWER CARRIES 1 MARK)

Tick the correct option.

<p>1. _____ is made during Bihu festival.</p> <p>A. campfire b. mezi c. bogi</p>	
<p>2. A _____ bird makes this type of nest.</p> <p>A. weaver b. tailor c. crow</p>	
<p>3. Turmeric is added to colour the food .It is a :</p> <p>A. seed b. stem c. spice</p>	
<p>4. We get silk from the cocoon of this insect:</p> <p>A. silk moth b. butterfly c. ladybird</p>	
<p>5. _____ has this type of beak to eat fruits and nuts.</p> <p>A. eagle b. parrot c. vulture</p>	
<p>6. This is given to people suffering from _____.</p> <p>A. Dengue B. Malaria C. Diarrhoea</p>	

<p>7. _____ is a stem that can be eaten by us.</p> <p>A. carrot b. onion c. potato</p>	
<p>8. The plant in the picture has _____ root.</p> <p>A. aerial prop b. tap c. fibrous</p>	
<p>9. This dress is worn by people in _____</p> <p>A. India B. UAE C. Australia</p>	
<p>10. _____ is served in the Gurudwara.</p> <p>A. langar b. dinner c. lunch</p>	

SECTION B

QUESTIONS FROM Q.11 TO Q.15 CARRY 1 MARK EACH.

11. _____ helps people who are unable to walk.

(Wooden chair / Wheel Chair)

12. _____ are hills of sand seen in the desert.

13. Who am I? I look like jeera, but am used as a mouth freshener.

14. Give any two examples of traditional crafts of India.

15. What is the symbol of the Indian currency?

QUESTIONS FROM Q.16 TO Q.18 CARRY 2 MARKS EACH.

16. Differentiate between the climate and trees found in Kerala and Abu Dhabi.

17. Why is the craft of weaving in danger?

18. Some fruits and vegetables have smooth skin, while some have rough skin. Sandeep has prepared a list of both. But there are some mistakes. Can you help him in correcting the mistake and put the food items in the correct place.

Rahul's List:

Smooth Skin	Rough Skin
Litchi, Jackfruit, Apple, Brinjal	Bitter Gourd, Tomato, Pineapple, Capsicum

QUESTION 19 CARRIES 4 MARKS.

19. Raj feels comfortable when he is touched and loved by his parents. He is not comfortable when his driver uncle touches him. Driver uncle does not belong to Raj's safe circle.

What is a safe circle?

What are the two types of touch mentioned in the situation above. Name them.

SECTION C

QUESTIONS FROM Q.20 TO Q.24 CARRY 1 MARK EACH.

20. Which of the following is not a root vegetable?

- a. potato b. radish c. carrot

21. What things are needed to make one glass of ORS?

- a. One glass of boiled and cooled water + 1 spoon of sugar + 1 spoon of salt.
b. One glass of boiled and cooled water + 1 spoon of sugar + pinch of salt.
c. One glass of boiled and cooled water + pinch of sugar + 1 spoon of salt.

22. Which of the following pairs of plants have fibrous roots?

- a. rice, grass
b. carrot, coconut
c. rose, coriander

23. What arrangements can be made in schools to help children who are not able to walk?

24. Write the full form of MBBS.

QUESTIONS FROM Q.25 TO Q.27 CARRY 2 MARKS EACH.

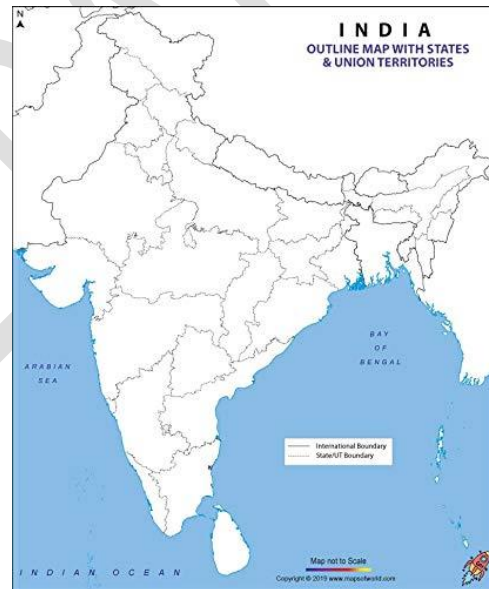
25. Why should you avoid drinking unsafe water? Mention 2 ways of cleaning water.

26. Draw the feet of the following birds:

- a. Feet used to swim.
- b. Feet used to catch prey.


27. Mark the following States/ Union territories in the outline map of India.

- a. Bihu is celebrated here.
- b. Gateway of India is located here.



QUESTION 28 CARRIES 4 MARKS.

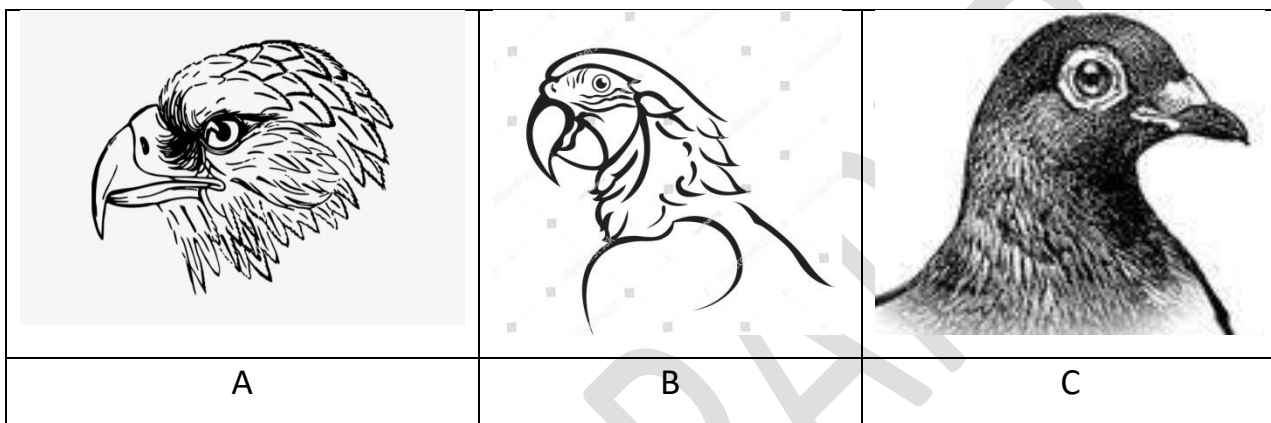
- 28.
 - a. Identify this personality.
 - b. What is her occupation?
 - c. What are the duties she has to do?



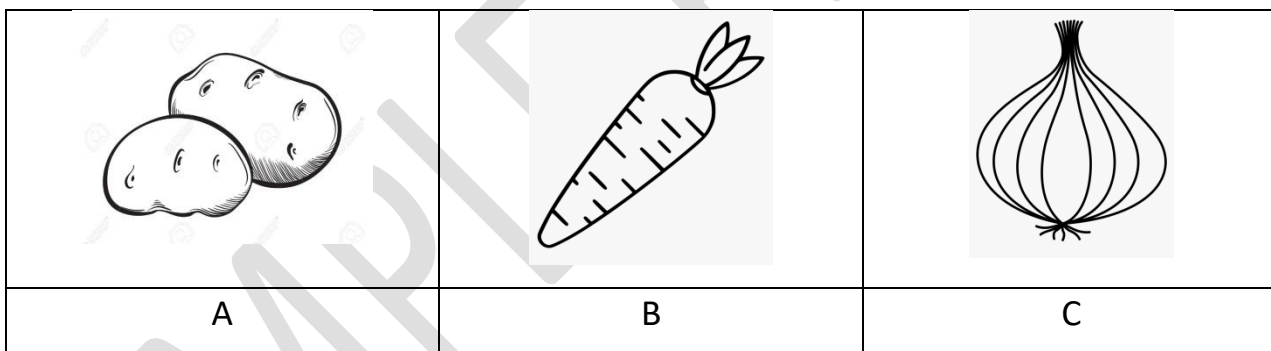
SECTION A (EACH CORRECT ANSWER CARRIES 1 MARK)

Tick the correct option.

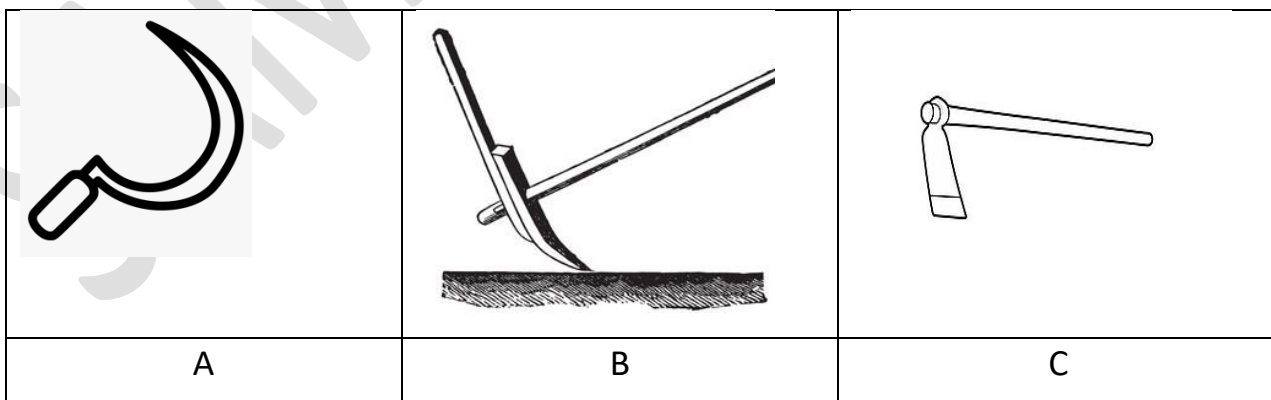
1. _____ has a sharp and strong beak to tear and eat flesh.



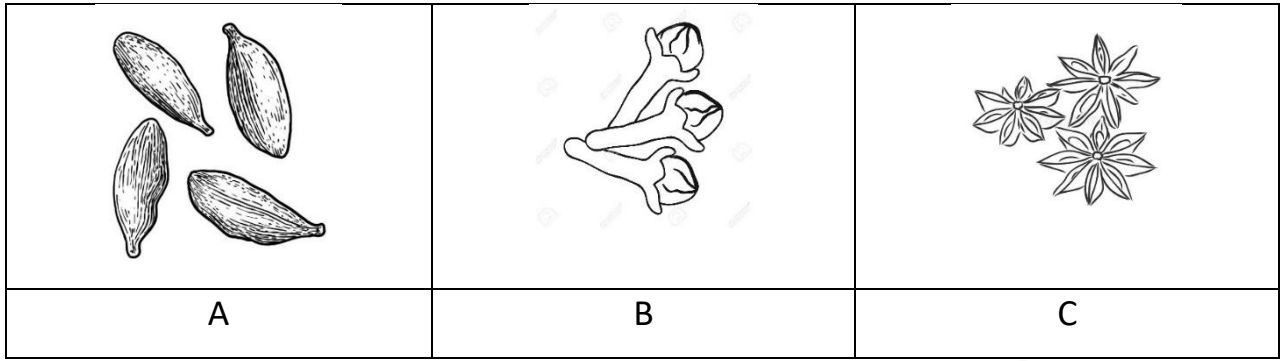
2. _____ is the edible root of a plant.



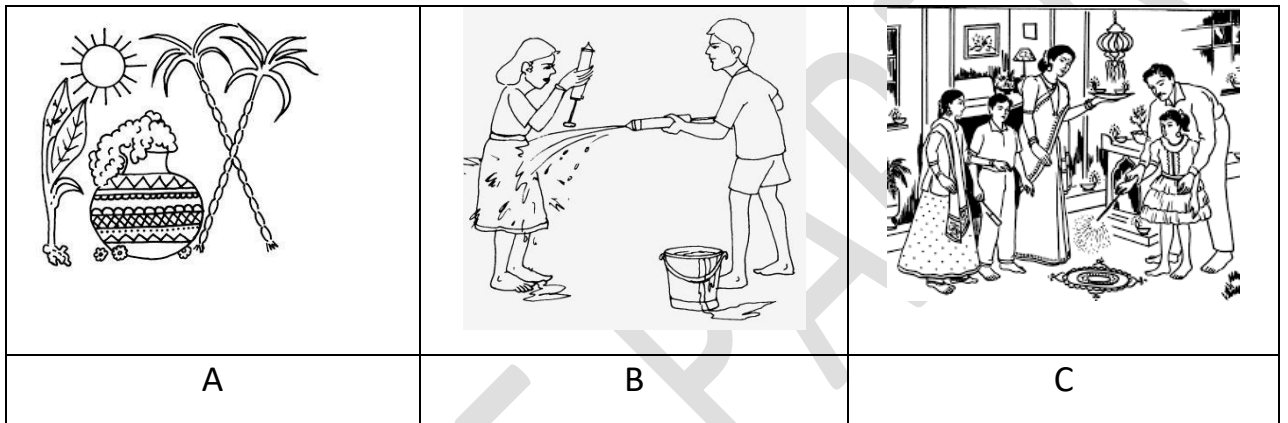
3. _____ is used to harvest the crops.



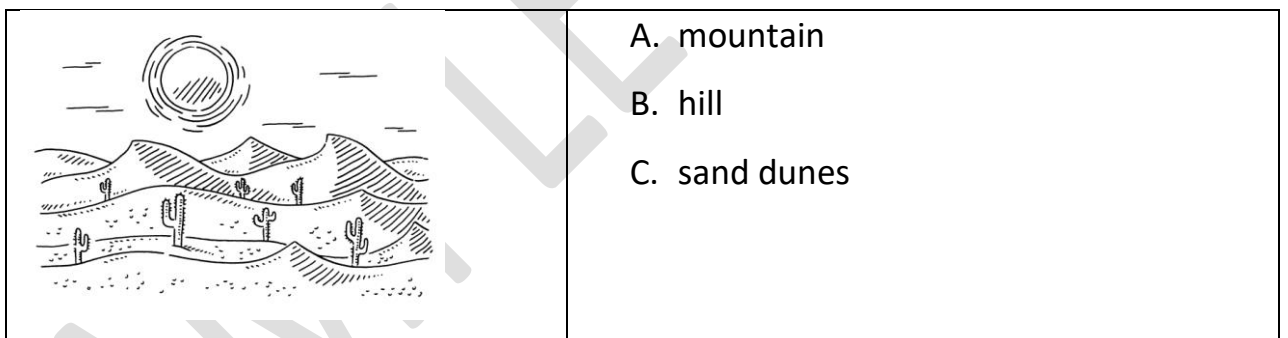
4. _____ is the spice which is used as a medicine for tooth ache.



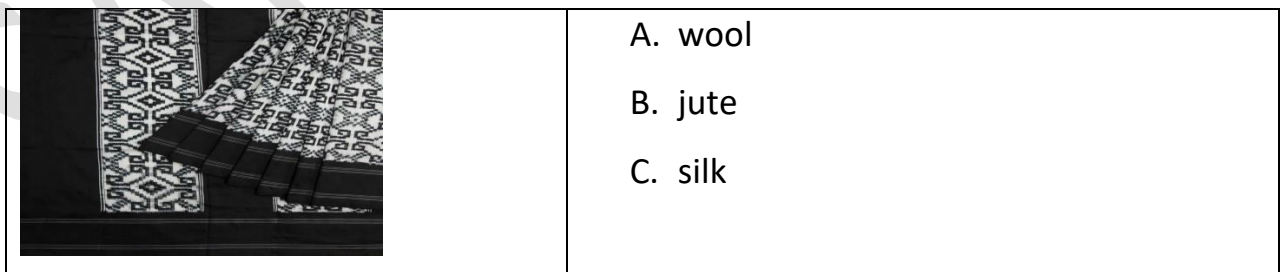
5. _____ is a harvest festival.



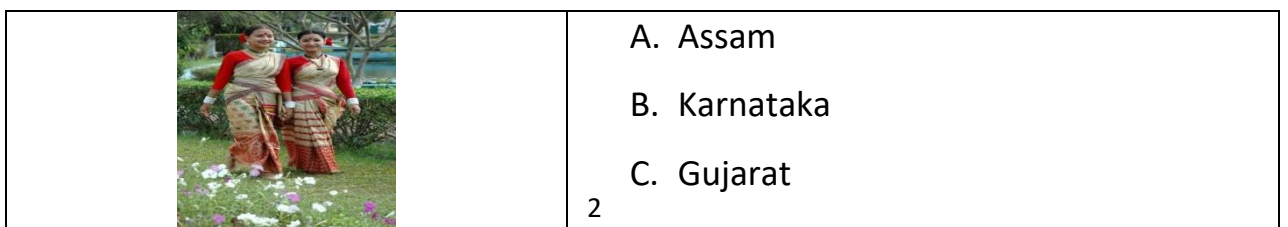
6. Name the landform.




7. Pochampalli sarees are made out of _____



8. This traditional dress is worn by the ladies of _____ state.



9. I can walk and swim but cannot fly.



- A. bat
- B. kiwi
- C. penguin

10. Name this Indian defence service:



- A. Indian Army
- B. Indian Air Force
- C. Indian Navy

SECTION B

QUESTIONS FROM Q.11 TO Q.15 CARRY 1 MARK EACH.

- 11. The _____ tree has roots that look like hanging branches. (banyan/ neem)
- 12. The unwanted plants among the crops are called _____.(seed / weeds)
- 13. _____ is used to give colour to the food. (turmeric/ginger)
- 14. Rampur was flooded. After few days many fell sick with vomiting and loose motions. They are suffering from _____.(dengue/diarrhoea)
- 15. _____ is used in kitchen for cooking. (LPG,Petrol)

QUESTIONS FROM Q.16 TO Q.18 CARRY 2 MARKS EACH.

16. Classify the following vegetables:
(onion, spinach, potato, coriander)

Spoils quickly	Stays for some days

17. It's a foreign country whose currency is Dirham. Name the country and its capital city .

a) Country _____

b) Capital city of that country _____.

18. Expand ORS. How is it prepared?

QUESTION 19 CARRIES 4 MARKS.

19. Identify the following method of conserving water:



Write any three ways to conserve water at home.

a. _____

b. _____

c. _____

SECTION C

QUESTIONS FROM Q.20 TO Q.24 CARRY 1 MARK EACH.

20. Which of the following is not fit for drinking?

a. sea water

b. purified water

c. boiled water

21. The following bird will hunt during night time.

a. owl

b. koel

c. crow

22. _____ house is made up of bamboo and grass during the festival of Bihu.

a. rebo

b. tent

c. bhela ghar

23. _____ is a sweet offered in Gurudwara.

a. Kadha Prasad

b. Kaju katli

c. Gulab jamun

24. Ram is unable to walk/move due to some leg problem but he can move using:

- a. wheel chair b. wooden chair c. plastic chair

QUESTIONS FROM Q.25 TO Q.27 CARRY 2 MARKS EACH.

25. Name any two natural sources of water.

26. Vihaan and Vani are siblings. Vihaan was allowed to go out and play till late evening but Vani was expected to sit at home and help her mother.

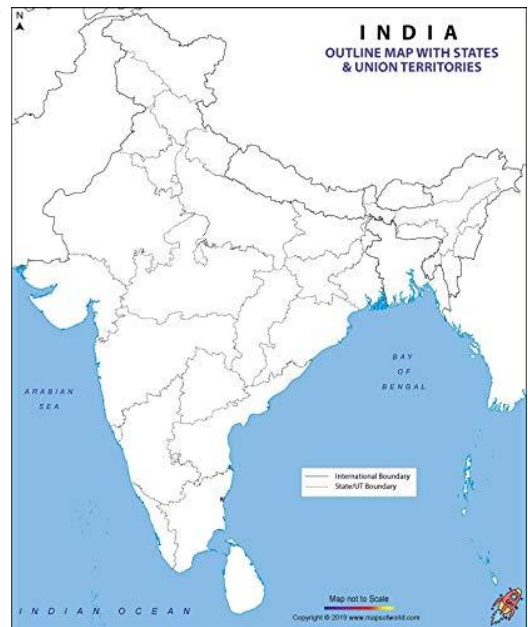
Is it correct to have different rules for Vihaan and Vani? Give reasons to support your answer.

27. Write any two differences between village life and city life.

QUESTION 28 CARRIES 4 MARKS.

28. Fill in the blanks with the clues given and also locate these states in the given map of India.

- a. Bengaluru is situated in _____ state.
- b. Mumbai is the capital city of _____ state.
- c. Onam is celebrated in _____ state.
- d. The capital city of India is _____.



Kendriya Vidyalaya Sangathan

Bengaluru Region

Sample Question Paper Set I - Term II Session 2021-22

Class: IV







Max Marks: 40





Subject: EVS

Time: 2 Hours

SECTION A (EACH CORRECT ANSWER CARRIES 1 MARK)

Tick the correct option:

<p>1. This nest is built by the _____.</p> <p>a. weaver bird b. tailor bird c. coppersmith</p>	
<p>2. The _____ divides sunlight into 7 different colours.</p> <p>a. prism b. bottle c. rainbow</p>	
<p>3. This is added to food to make it _____.</p> <p>a. sweet b. sour c. hot</p>	
<p>4. The instrument used to weave clothes is _____.</p> <p>a. loom b. needle c. sewing machine</p>	
<p>5. _____ helps people who are unable to walk from one place to another.</p> <p>a. wheel chair b. desk c. bench</p>	
<p>6. The symbol of rupee is _____.</p> <p>a. ₹ b. £ c. \$</p>	

<p>7. _____ bird has this type of feet to swim in water.</p> <p>a. eagle b. hen c. duck</p>	
<p>8. _____ is a fruit tree growing in Abu Dhabi.</p> <p>a. plum b. pista c. dates</p>	
<p>9. _____ is celebrated as a harvest festival in Assam.</p> <p>a. Onam b. Bihu c. Pongal</p>	
<p>10. Langar is served in _____.</p> <p>a. Gurudwara b. Temple c. Mosque</p>	

SECTION B

QUESTIONS FROM Q.11 TO Q.15 CARRY 1 MARK EACH.

11. _____ rice is used to make pitha during Bihu festival. (bora/ bao)
 12. Date fruit has a _____ seed. (many/ single)
 13. Who am I? I look like a black pearl and can be added to both sweet and salty dishes.
 14. Give examples of two professions where people have to wear uniform.
 15. Reena was inspired by the story of Defence Officer Wahida Prism. She too wants to become a doctor. What course should she study after school to become a doctor?
Select the correct answer.
- a. MBA b. MBBS c. MCA

QUESTIONS FROM Q.16 TO 18 CARRY 2 MARKS EACH.

16. Differentiate between tap root and fibrous root.
17. Some food items get spoiled within 1-2 days, while some stay fresh for a longer time. Rohit has prepared a list of both. But there are some mistakes. Can you help him in correcting the mistake and put the food items in the correct place.

Rahul's List

Food items that get spoiled in 1-2 days	Food items that remain fresh for longer
Potato, Spinach, Onion	Banana, Coriander, Carrot

18. Why do birds make nests?

QUESTION 19 CARRIES 4 MARKS.

19. Differentiate between Kerala and Abu Dhabi with respect to the following points.

	Kerala	Abu Dhabi
Climate		
Trees		
Dress worn by people		
Currency		

SECTION C

QUESTIONS FROM Q.20 TO Q.24 CARRY 1 MARK EACH.

20. Which of the following is not a spice?

- a. cardamom b. tea c. clove

21. Drinking unclean water can cause:

- a. Malaria b. Diarrhoea c. Covid 19

22. Draw the following beaks:

- a. A beak used to tear flesh.
b. A beak used to eat grains.

23. Sagar decided to help his mother. He cooked dal. He added all the ingredients except one. The dal after cooking was not yellow in colour. Which spice did he forget to add?

24. Arif and Aryan are discussing about a plant:

Arif: Is it a small plant?

Aryan: No, it is very big. It has a thick trunk.

Arif: Does it have fruits?

Aryan: Yes, the fruits are eaten by birds, not by us.

Arif: Does it have any special features?

Aryan: Yes ,it has roots hanging down from its branches.

Can you guess which plant they are discussing about?

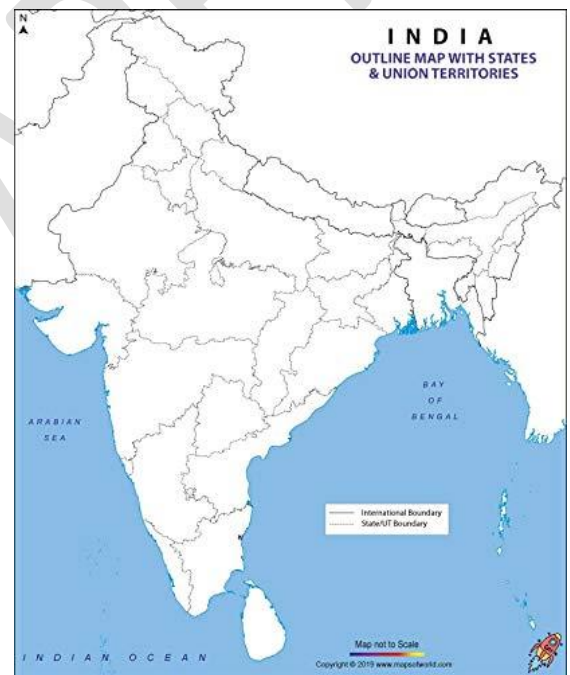
QUESTIONS FROM Q.25 TO Q.27 CARRY 2 MARKS EACH.

25.What is Mid-day meal programme? Why is it given in schools?

26.What is ORS? How can you prepare it?

27.Mark the following States/ Union territories in the outline map of India.

- a. Golden temple is situated here.
- b. Defence Officer Wahida Prism belongs to this place.



QUESTION 28 CARRIES 4 MARKS.

28.(i) Arrange the steps of making a Pochampalli saree in the correct order. (2marks)

- a. Dyeing the yarn.
- b. Cleaning the yarn
- c. Making bundles of yarn.
- d. Weaving the yarn on a loom.

(ii) How did Pochampalli cloth get its name? Why are they famous? (2marks)

Kendriya Vidyalaya Sangathan

Bengaluru Region

Sample Question Paper Set III- Term II Session 2021-22

Class: IV

Max Marks: 40

Subject: English

Time: 2 Hours

A.READING COMPREHENSION

(5X1=5)

Read the unseen passage carefully and do as directed:

Dr. A. P. J. Abdul Kalam, the Former President of India and a world-renowned Space Scientist, was born on 15th October 1931 .He was the 11th President of India from 2002 to 2007. He was a teacher, scientist, author and speaker whose life and works are a treasure for India.Kalam wrote several books, India 2020 and Ignited Minds including an autobiography-*Wings of Fire*. He received the Padma Bhushan, Padma Vibhushan and the Bharat Ratna Award from the Government of India.

Fill in the blanks:

1. Dr. A. P. J. Abdul Kalam is a treasure for India. Give reason.
2. Name two books written by him. _____, _____
3. Name any one Award received by him. _____, _____
4. Answer this question:
Who was Dr. A. P. J. Abdul Kalam?
5. Pick a word from the passage which means -
the story of a person's life written by that person _____

B.PROSE AND POETRY

(1+2+2)

Answer these questions

Q1.Which part of the plant is its 'thirsty feet'?

Q2. Describe Pinocchio in two sentences.

Q3.Who said to whom ?
"Relax, come with me,"

C.GRAMMAR

(10X1=10)

Do as directed:

1) Choose the correct spelling for the contraction: **they are**

- a) theyre
b) they'er
c) the'are
d) they're

2) This is my favourite _____ of jeans

- a) pare,
b) pair,
c) pear
d) peer

3) Punctuate the given sentence. Cant you come to school on time

4) Fill in the blanks with appropriate words to complete the sentence

There are _____ many people in the lift. (two / too)

5) Write a word with a silent 't' _____

6) Make a meaningful sentence.

summer / like / water-melons / I / eating / in.

7) Complete the sentences using the correct form of the word given in the bracket.

We _____ a beautiful song last month. (learn)

8) Fill in the blanks with the -ness form of the word in bracket

Children should take care of the _____ (clean) of their classroom and school.

9) Join the sentences using suitable joining word.(because/so)

I did not study well. I didn't write the exams well.

10) Look at the picture and make a question.



D.CREATIVE WRITING

(1X5=5)

Write five sentences about the situation in the picture



jogging	birds	flying	bench	ice-cream
park	reading	kites	feeding	eating

E SPELLING**(5X1=5)**

1) Unscramble the words below and complete the sentences:

a) The day after today is _____ (motoowrr)

2) Circle the word with the correct spelling

a) quere, queer, quear

3) Fill in the missing letters and complete the sentences:

a) A w r __ s t l __ r tried to move the cow.

b) To hit something very hard wa __ __ op.

4) Unscramble the jumbled letters to make a meaningful word

a) maazed

b)amadza

c) zedema

d) mazeed

F. HANDWRITING:**(1X5=5)**

Write the passage given below neatly and legibly:

Look around you. You will see many people who need some kind of help. At school, your friend may need a pencil or a rubber or may need help with homework. Is there anything you can do for them? Yes, you can help them and show that you care. At home, your mother might need help. You can do small jobs to help her and show her that you care for her. When you help others, you are being caring. A caring person makes other happy

G .VOCABULARY

(5X1=5)

1) Choose the opposite of: important

a) inimportant

b) disimportant

c) unimportant

d) misimportant

2) Complete the sentence using an appropriate - **DESCRIPTIVE WORD**

As _____ as the sun

3) Write the suitable word opposite in meaning to the underlined word.

1) The fish was coloured white _____ and grey above.

4) Write a synonym (word with similar meaning) -queer -- _____

5) Write a rhyming word for: slow _____

Kendriya Vidyalaya Sangathan

Bengaluru Region

Sample Question Paper Set II- Term II Session 2021-22

Class: IV

Max Marks: 40

Subject: English

Time: 2 Hours

A.READING COMPREHENSION

(5X1=5)

Read the unseen passage carefully and do as directed:

I'm sure you all know how important recycling is. Recycling is when you take old things and turn them into new things. You have to collect items that can be recycled, which then goes to a recycling plant. Only certain materials can be recycled. These include things made out of paper, metal, glass and plastic.



There are many things that can be recycled. These things are usually

stamped with the recycling loop. Recycling keeps our planet healthy. It reduces waste. It also saves energy.

So just remember the golden rule: Always recycle your products!

1. Name any one material that can be recycled.
2. Write one way in which recycling keeps our planet healthy?
3. The three R's in the symbol shown are: _____, reuse and recycle.
4. Here the Golden Rule is _____
5. Which of these sentences means Recycling?
 - It means to minimise the amount of waste we create.
 - It refers to using items more than once.
 - It means turning a product to a new use instead of throwing it away.

B. PROSE AND POETRY

(2+2+1)

Answer the following:

- Q1. Should we go with somebody? Should we go alone?
Whom does “we “refer to in this story? Where were they going?
- Q2. ‘The children are waiting for their milk. Please get up’
Who said this to whom?
- Q3) Who were called ‘Hiawatha’s Brothers’?

C GRAMMAR

(10X1=10)

- 1) Use (always / often) to complete the sentence:

Helen Keller was _____ angry.

- 2) Choose the correct form of the verb and complete

Yesterday my teacher _____ a puppet to the class. (bring / brought)

- 3) Use and / or to complete the sentence:

Ajay _____ Ramesh went to see the circus.

- 4) Make new word by adding -ly and complete the sentence.

The children love to sing _____. (neat / loud)

- 5) Add a suitable suffix to make a new word- ness / ity / ty

cruel -- _____

- 6) Give the past tense of- know-- _____

- 7) one story - many _____

- 8) Write the full form of - wasn't

- 9) Choose the correct word and complete it:

_____ are you going? (Where / Wear)

- 10) Re-arrange the words to form a meaningful sentence:

Habit reading good is a

D. CREATIVE WRITING

(1X5=5)

Complete the dialogue between the customer and the shopkeeper .



Shopkeeper: What _____

Customer: I _____

Shopkeeper: _____

Customer: _____

Shopkeeper: _____

E SPELLING

(5X1=5)

1) Encircle the word with correct spelling.

galore galoer golare

2) Fill in the missing letters.

t___ n ___ u e

3) Put the letters in the right order.

wmaigw - _____

4) A place where aeroplanes take off and land-- _____

5) Make 2 **four letter words** using the letters of the word CARPENTER

a. _____

b. _____

F.HANDWRITING

(1X5=5)

Rewrite the passage given below neatly and legibly:

Look around you. You will see many people who need some kind of help. At school, your friend may need a pencil or a rubber or may need help with homework. Is there anything you can do for them? Yes, you can help them and show that you care. At home, your mother might need help. You can do small jobs to help her and show her that you care for her. When you help others, you are being caring. A caring person makes other happy.

G.VOCABULARY

(5X1=5)

1) Write rhyming words for the following.

a) roots - _____

b) mile - _____

2) Add suitable describing word to the given picture

_____ books



3) Make opposite of the given word using - dis / in

own-- _____

4) Write another word for ---

baby horse -

5) Give one word –

Beavers live in _____.

Kendriya Vidyalaya Sangathan
Bengaluru Region

Sample Question Paper Set I- Term II Session 2021-22

Class: IV
Subject: English

Max Marks: 40
Time: 2 Hours

A. READING COMPREHENSION

(5X1=5)

Read the unseen passage carefully and answer the questions:

There was once a King living in the Himalayan region. He wanted to build himself a palace more beautiful and different from any he had seen in the world. He decided that the entire palace should be supported by one pillar and that was to be made from the tallest tree in the Kingdom. In the Himalayas there are many tall trees like - the Spruce, Pine, Oak and Deodar. The tallest and strongest are the Deodars whose very name means – Tree of God.

- 1) Where did the King live?
- 2) What did the King want to build?
- 3) Which tree is also known as the tree of God?
- 4) Pick out one word from the passage which means-
a large house lived in by a King →

5 How was the king's palace different from the other palaces?

B. PROSE / POETRY

(2+2+1=5)

Answer the following:

- 1) Where did the cow sit? (The Milkman's Cow)
- 2) How did Birbal find out the Pundit's mother tongue?
- 3) Name the poet of the poem 'The Naughty boy'.

C. GRAMMAR

(10X1=10)

1) Combine the sentence using – but:

Helen copied the words. She did not understand what she was doing.

2) Complete the sentence:

Insects _____ crawl on the wall but children _____. (can/cannot)

3) Punctuate using- capital letters, commas, full stop, question mark.

where are you going sita

4) Pick out the silent letter :

often

5) The scientists have _____ many viruses in the past. (Fill with the past tense of 'find')

6) Theand the queen watched the contest. (Fill with the other gender of 'queen')

7) Add – a or - an before the word:

8) The speak.....(er/or) spoke very interestingly.

9) Add - ly to the given word -

merry

-

10) Write the other degree of comparison - beautiful , _____ , most beautiful

D. CREATIVE WRITING

(1X5=5)

Given below is some information about Hiawatha. Read them and write five sentences about him.

Red Indian



Nokomis

birds and animals were his friends

Hiawatha

wonders of nature

learnt many things from them



E SPELLING

(5X1=5)

1) Encircle the correct spelling:

walpoe

wallop

wallep

2) Unjumble the letters to make correct word:

silmed ← →

3) Fill in the missing letters:

d		l	i	c	i		u	s
---	--	---	---	---	---	--	---	---

4) Complete the given word using -ei / ie -----

L_ _ _ sure

5) Identify the picture -



Reindeer , Raindeer, Riendeer,

F HANDWRITING

(1X5=5)

Rewrite the given passage neatly and correctly:

Humility and humanity are the two qualities which are essential for a human being. We should be considerate and sympathetic towards our fellow beings. One can seek the blessings of others through a simple, thoughtful gesture. Thus we should be kind and loving to others.

G VOCABULARY

(5X1=5)

1) Make rhyming pairs: mail _____

2) Write a word or sign - you see at the library ↔

3) Write a describing word for:



4) Rewrite the sentence using the opposite of the underlined word.

The road to my house is very narrow.

5) One word which means - complete knowledge of a subject