

Kendriya Vidyalaya Sangathan Bangalore Region

Blue Print -II Term End Exam 2021-22

Class : V
Subject : English

Total Marks-40
Time – 1 hour

Sl No.	Chapter/Lesson/Poem	Total marks	VSA	SA	LA	No. of questions
1.	Reading Comprehension (Unseen)	5	5			5
2.	PROSE /POEM					
	Around The World	2		1		1
	Who will be Ningthou?	2		1		1
	Nobody's Friend	1	1			1
3.	GRAMMAR					
	The Talkative Barber- Prefix / Conjunctions	2	2			2
	Gulliver's Travels – Simile / Degrees of Comparison	2	2			2
	The Little Bully – Contractions/ Articles /Adverbs	3	3			3
	Malu Bhalu - Pronouns	1	1			1
	Around The World – Collective Nouns	1	1			1
	Who will be Ningthou? - Tenses	1	1			1
4.	SPELLING					
	The Talkative Barber	1	1			1
	Sing a Song of People	1	1			1
	The Little Bully	1	1			1

	Class Discussion	1	1			1
	Who will be Ningthou?	1	1			1
5.	CREATIVE WRITING					
	General – Notice Writing (or)	5			1(5)	1
	Paragraph Writing (or)					
	Picture Composition /any other /Character sketch of Malu					
6.	VOCABULARY					
	Around The World	1	1			1
	Topsy Turvy Land	1	1			1
	Gulliver’s Travels	1	1			1
	Who Will Be Ningthou?	1	1			1
	Malu Bhalu	1	1			1
7.	Handwriting - Can be assessed through the handwritten SA/LA uploaded by the students	5				
	TOTAL	40				29

Class : V

Subject : Hindi

Total Marks-40

Time – 1 hour

SI N	Chapter/Lesson/Poem	Total marks	VSA	SA	LA	No. of questions
1	अपठित गद्यांश	5	5	-	-	5
2	(गद्य / पद्य से प्रश्न)					
	छोटी-सी हमारी नदी	2		1		1
	बाघ आया उस रात	1	1			1
	चुनौती हिमालय की	2		1		1
3	व्याकरण					
	चावल की रोटियाँ (कारक चिह्न, विशेषण और विशेष्य)	2	2	-	-	2
	गुरु और चेला (विलोम शब्द)	1	1	-	-	1
	स्वामी की दादी (वचन , लिंग)	2	2	-	-	2
	बिशन की दिलेरी (क्रिया विशेषण, विराम चिह्न)	2	2	-	-	2
	पानी रे पानी (मुहावरे,काल)	2	2	-	-	2
	छोटी-सी हमारी नदी (पर्यायवाची)	1	1	-	-	1
4	वर्तनी	1	1	-	-	1
	स्वामी की दादी					
	गुरु और चेला	1	1	-	-	1

	बिशन की दिलेरी	1	1	-	-	1
	छोटी-सी हमारी नदी	1	1	-	-	1
	चुनौती हिमालय की	1	1	-	-	1
5	सृजनात्मक लेखन (कोई एक)	5			1	1
	चरित्र चित्रण - (बिशन / कोको)					
	लघु लेख / अनुच्छेद - (हिमालय / नदी / पानी का महत्व)					
	चित्र वर्णन					
6	शब्द भंडार					
	चावल की रोटियाँ	1	1			1
	गुरु और चेला	1	1			1
	स्वामी की दादी	1	1			1
	बिशन की दिलेरी	1	1			1
	चुनौती हिमालय की	1	1			1
7	सुलेख - छात्रों द्वारा अपलोड किए गए हस्तलिखित लघु उत्तर / दीर्घ उत्तर के माध्यम से मूल्यांकन किया जाएगा ।	5				
	कुल	40				29

Class : V
Subject : Maths

Total Marks-40
Time – 1 hour

COMPETENCY	KNOWLEDGE 10			UBC10			AC 10			PSA 10			TOTAL
	VSA	SA	LA	VSA	SA	LA	VSA	SA	LA	VSA	SA	LA	
CHAPTER													
1. Mapping Your Way			1(4)		1(2)		1(1)						7
2 . Boxes And Sketches					1(2)		1(1)			2(1)			5
3. Tenths and Hundredths	1(1)	1(2)		1(1)				1(2)					6
4. Area and its Boundary	1(1)							1(2)			1(2)		5
5. Smart Charts				1(1)		1(4)							5
6. Ways to Multiply and Divide											1(2)	1(4)	6
7. How Big? How Heavy?		1(2)								1(4)			6
TOTAL													40

Class : IV
Subject : EVS

Total Marks-40
Time – 1 hour

Sl. No.	Lessons	OBSERVATION-10			IDENTIFICATION-15			DISCOVERY OF FACTS-15			TOTAL MARKS
		VSA	SA	LA	VSA	SA	LA	VSA	SA	LA	
1	What if it Finishes?	2(1)				1(2)					4
2	A Shelter so High!				1(1)					1(4)	5
3	When the Earth Shook!	3(1)						1(1)			4
4	Blow Hot, Blow Cold					1(2)			1(2)		4
5	Who will do this Work?				1(1)						1
6	Across the Wall	1(1)			1(1)						2
7	No Place for Us?	1(1)			1(1)				1(2)		4
8	A Seed Tells a Farmer's Story	1(1)				1(2)		1(1)	1(2)		6
9	Whose Forests?				1(1)			1(1)			2
10	Like Father, Like Daughter	1(1)						1(1)			2
11	On the Move Again	1(1)						1(1)			2
12	Map Reading						1(4)				4
	TOTAL	10(1)			5(1)	3(2)	1(4)	5(1)	3(2)	1(4)	40

Kendriya Vidyalaya Sangathan

Bengaluru Region

Sample Question Paper Set III- Term II Session 2021-22

Class: V

Max Marks: 40

Subject: Mathematics

Time: 2 Hours

KNOWLEDGE

I Fill in the blanks by choosing the correct option. (2X1=2 marks)

1. A closed cube has _____ squares.

- a) 5 b) 6 c) 4

2. The decimal number for : Four and forty-one hundredths is _____

- a) 4.41 b) 0.441 c) 44.1

II Answer the following (2 X2=4marks)

1. If the scale of a map reads 1cm = 200km on the ground, then

5cm = _____ km on the ground.

700km on the ground = _____ cm on the map.

2. State the most appropriate unit (sq cm / sq m / sq Km) to be used to measure the following

a) area of a city _____

b) area of a table top _____

(1X4=4marks)

III) Read the India map given below and fill in the blanks by choosing the correct directions given in the bracket. [

north , south , east , west]

a. Assam is towards _____ of India.

b. Kerala is towards _____ of India.

c. New Delhi is towards _____ of India.

d. Gujarat is towards _____ of India.



II. UNDERSTANDING

I) Answer the following by choosing the correct option. (2X1=2marks)

1. In a playing dice how many dots will be shown on the face opposite to face showing 5 dots

- a) 1 b) 2 c) 3



2. Which question matches the given problem.?

. There are 32 students in a class who pay the fees. Each student pays fees of Rs 1800

- a) How many students will pay the fees?
 b) How much will each student pay?
 c) What is the total fees amount collected in this class?

II) Answer the following questions.

(2X2=4marks)

1 For the following situations what will you calculate-- Perimeter or Area ?
(Tick the correct option)

- i) to carpet the floor of a room- (perimeter / area)
- ii) to fix a lace along the border of a rectangular piece of cloth- (perimeter / area)

2.This is a record made by Geeta made regarding the pets kept in a zoo.
Observe the following table and answer the questions given below

Fishes	<input type="checkbox"/>	<input type="checkbox"/>	<input type="checkbox"/>	<input type="checkbox"/>		
Birds	<input type="checkbox"/>	<input type="checkbox"/>	<input type="checkbox"/>	<input type="checkbox"/>	<input type="checkbox"/>	<input type="checkbox"/>
Rabbits	<input type="checkbox"/>	<input type="checkbox"/>	<input type="checkbox"/>			
Turtles	<input type="checkbox"/>	<input type="checkbox"/>				

- a) The total number of rabbits and turtles in the zoo is _____.
- b) There are _____ number of birds more than number of fishes.(5/ 8/ 10 / 7)

III. Read the table given below and answer the questions given. (1X4=4marks)

S.No.	Animal	Average Height
1	Elephant	2.65m
2	Giraffe	5.8m
3	Camel	2.1m
4	Horse	1.6m

Answer the following

- a) The tallest among these four animals is _____.
- b) The shortest among these four animals is _____.
- c) The height of camel is _____ m and _____ cm
- d) Arrange these animals in the ascending order of their height.

_____ , _____ , _____ , _____

III) ABILITY TO COMPUTE

I) Answer the following by choosing the correct option.

(2X1=2marks)

1.The product of 3.4 and 2.3 is _____

- a)7.82 b)78.2 c)782.0

2.An oil tank can hold 60 litres of oil. Another oil tank can hold twice as much as the first tank. What is the total capacity of both the tanks?

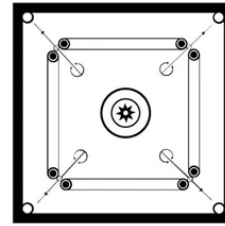
- a)240 litres b)180 litres c)120 litres

II)Solve the following (show all the steps) (2X2=4marks)

1. Find the perimeter and the area of a square carrom board whose side is 50cm.

Perimeter = _____

Area= _____



2. .Abdul had a small pool in his garden of length 4m, breadth 2m and height 3m. He wants to fill this pool with water. How many litres of water does he need to fill the pool?

III. Compute the following ,identify the answer in the grid and colour it. (1X4=4marks)

83 X 45= _____

26 X 72= _____

9828 ÷ 12= _____

945 ÷ 9 = _____

891	819	1567
3735	1782	1872
3573	105	15

PROBLEM SOLVING ABILITY

I)Answer the following by choosing the correct option. (2X1=2marks)

1. If the volume of 6 marbles is 5ml, then the volume of 30 marbles is

- a)30ml b)25ml c)36ml

Kendriya Vidyalaya Sangathan

Bengaluru Region

Sample Question Paper Set II- Term II Session 2021-22

Class: V

Max Marks: 40

Subject: Mathematics

Time: 2 Hours

KNOWLEDGE

I Fill in the blanks

(2X 1=2marks)

- 1) The decimal number for $30 + 4 + \frac{3}{10} + \frac{5}{100}$ is _____
- 2) The amount of space occupied by a solid is called its _____

II Answer the following

(2X2=4marks)

- 1) Write the number name of following numerals.
 - a) 8.9 _____
 - b) 56.06 _____
- 2) 9 five-rupee coins occupies a volume of 10 ml of water . How many coins are needed to occupy a volume of
 - a) 30ml of water _____
 - b) 60 ml of water _____

III 1) Look at the given map of India and answer the questions given below:

(4X1=4marks)



(a) Karnataka is to the _____ of Jammu Kashmir.

- (b) Name a north eastern state of India.
- (c) Name a state to the north of Delhi.
- (d) If you are standing in Gujarat and facing towards east, which state will be on your left-hand side.

Understanding of Basic Concepts

I Do as directed . (2X1=2marks)

- 1) $12/100$ as a decimal number is written as _____
- 2) The following pie-chart shows the favourite beverages of a few teachers in a school. Which beverage is liked the most ?

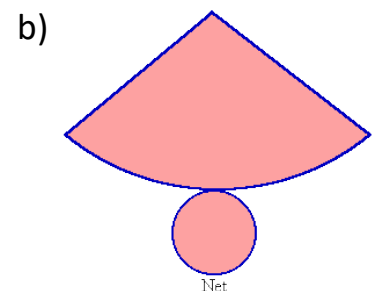
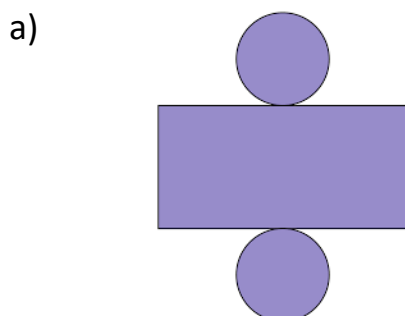
Favourite Beverage



II Do as directed (2X2=4marks)

- 1) For the following situations what will you calculate-- Perimeter or Area ?
(Tick the correct option)
- a) to fix the tiles on the floor of a room (perimeter/area)
- b) To find the distance you walked around a rectangular park(perimeter/area)

2) Draw the deep drawing of the following net drawing.



III Do as directed

(1X4=4marks)

1) Rajeev owns a food truck parked in centre of the city. He sells burger, pizza, hot-dog and fried chicken. The tally shows how many of each food items were sold on weekends. Observe the table and answer the questions given below:

Food Items	Tally Marks
 Burger	
 Pizza	
 Fried Chicken	
 Hot Dog	

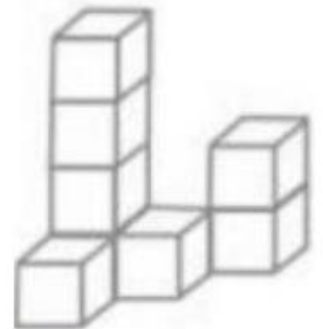
- a) How many pizzas were sold? _____
- b) Which food item was sold more -burger or fried chicken? _____
- c)How many more burgers were sold than the hot dogs? _____
- d)Which food item was sold the least? _____

Ability to Compute

I Do as directed

(2X1=2marks)

1)The total number of cubes in the given shape is _____



2) If 1 cm on a map represents 200 km on the ground, then distance of 8 cm on the map will represent how many kms on the ground? _____

II Solve the following

(2X2=4marks)

- 1) Reena cut a piece of length 12.65 cm from a stick that was 15.5 cm long. How long is the stick now?
- 2) The perimeter of a rectangular park is 450m . If its breadth is 120m then find its length and also find the area of this park.

III Solve the following (show the steps)

(1X4=4marks)

- 1) A cube with an edge of 7 cm and a cuboid measuring 7 cm × 4 cm × 8 cm are kept on a table. Which shape has more volume the cube or the cuboid and by how much more?

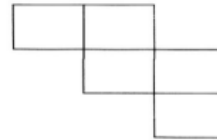
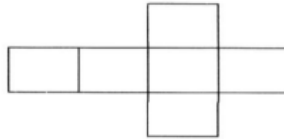
Problem Solving Ability

I Answer the following questions.

(2X1=2marks)

1) $62 \times \underline{\hspace{2cm}} = 2356$

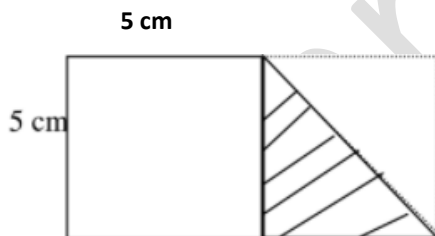
- 2) Among the following nets , tick the one which when folded will make a closed cube.



II Solve the following.

(2x2=4marks)

- 1) A rectangular piece of paper is folded on one of the corners as shown below. What is the perimeter of the rectangular piece of paper?



- 2) If an egg costs ₹ 6.50. How much will 1 dozen eggs cost?

III Solve the following

(1X4=4 marks)

- 1)The cost of a book is ₹ 65. Renu bought 23 books.

a) How much money does she pay for the 23 books?

b) How much money did she pay for 23 books? More than ₹1000 or less than ₹1000

c) What is the cost of 27 such books?

d) She gave ₹2000 note to the shopkeeper. How much money will she get back after purchasing 27 books?

Kendriya Vidyalaya Sangathan

Bengaluru Region

Sample Question Paper Set I- Term II Session 2021-22

Class: V

Max Marks: 40

Subject: MATHEMATICS

Time: 2Hours

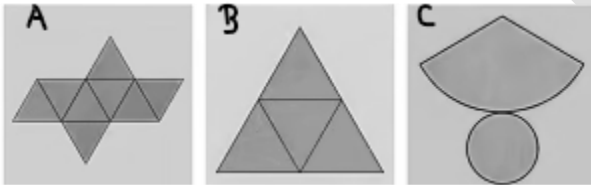
Knowledge

I. Choose and tick the correct answer (2x1=2marks)

1) Area is

- a) the region or surface covered by a closed figure.
- b) is the length of the outer boundaries of a closed figure.
- c) None of the above.

2) The net of a cone is



II. Do as directed. (2x2=4marks)

1) Arrange the following decimals in increasing order.

0.25 , 0.025 , 5.05 , 0.05

2) Write the number name of the following decimals.

a) 4.5 = _____

b) 24.07 = _____

III. Look at the table and answer the question given below: (1x4=4marks)

 apples	
 oranges	
 pears	
 mangos	

The following fruits were used for making a fruit punch.

- How many apples were used? _____
- How many more pears were used than the oranges? _____
- Which fruit was used the least? _____
- Which fruit was used the most? _____

Understanding the Basic Concept

I. Fill in the blanks (2x1=2marks)

- $0.05 \times 100 =$ _____
- 0.02 as a fraction is written as _____.

II. Answer the following Questions (2x2=4marks)

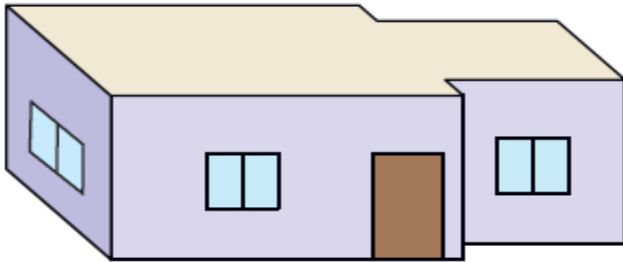
- The scale of a map shows $2\text{cm} = 40\text{km}$. If the distance on the map between two places is 5cm then find the actual distance between the two places on the ground?
- Mr Deepak walks 5 km towards the south and then turns to the right. After walking 3 km he turns to the left and walks 5 km. What direction is he facing right now?

(1X 4=4 marks)

III) Draw a floor map for the given deep drawing of a house.

And in the floor map also draw one more window on the wall opposite to the door.

Can you show this window on the deep drawing given.(Yes/No



Ability to Compute

I. Fill in the blanks.

(2x1=2marks)

1) $25.5 \div 100 =$ _____

2) $12.8 \times 100 =$ _____

II. Solve the following (Show all the steps).

(2x2=4marks)

1) If Suhani jumped 4.05 m and Jagrati jumped 4.50 in a long jump competition. Then who among the two jumped more and how much more .?

2) Find the volume of a cuboid of length 45cm , breadth 10cm and height 20cm.

III) Solve the following (Show all the steps)

(1x4=4marks)

1) Ram works as a cook and is paid Rs 50 per day.

a) What will be his Salary for the month of February? (not a leap year)

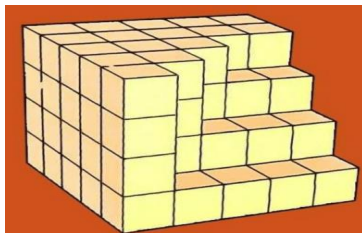
b) Calculate his salary for the whole year, if he has worked on all the days.(not a leap year)

Problem Solving Ability

I) Choose the correct answer.

(2x1=2marks)

- 1) One morning after sunrise, Nandita and Ravi were sitting in a lawn with their backs towards each other. Nandita's shadow fell exactly towards her left hand side. Which direction was Ravi facing?
a) East b) West c) North d) South
- 2) How many more unit cubes are required to complete this figure:



- a) 20 b) 9 c) 12 d) 15

II) Solve the following (Show all the steps).



(2x2=4marks)

- 1) The length of a square playground is 50 metres. How many metres of wire will be needed more for fencing all around the playground if Gopi already has 100 metres of wire.
- 2) How many 5 rupees coins of 9grams each will be in a sack ,If the sacks weighs 18kg .

III) Solve the following (Show all the steps).

(1x4=4marks)

- 1) If the perimeter of the both these fields are the same , then find out the area of the square. given that the length of the rectangle is 8m and breadth 2m.



केन्द्रीय विद्यालय संगठन

बंगलुरु संभाग

प्रश्नपत्र (नमूना) सेट-III अवधि II सत्र 2021-2022

कक्षा - पाँच

पूर्णांक - 40

विषय - हिन्दी

समय - 2 घंटे

पठन

निम्नलिखित अपठित अनुच्छेद में पूछे गए प्रश्नों के सही उत्तर चुनिए :-

(5×1 =5 अंक)

“रक्तदान महादान” ,रक्तदान को सबसे बड़ा दान कहा गया है। रक्त एक ऐसा पदार्थ है जो सभी मनुष्यों में समान रूप से बहता है। हिंदू ,मुस्लिम एवं ईसाई किसी का रक्त अलग रंग का नहीं होता। यदि कोई अधिक बीमार हो या दुर्घटनाग्रस्त हो जाए तो उस समय रक्त की माँग की जाती है और उस समय जाति धर्म का बंधन टूट जाता है ,उस समय केवल एक ही लक्ष्य होता है कि रोगी को निरोगी कैसे करें। इससे हमें यह सबक सीखना चाहिए कि हमें जाति और धर्म का भेदभाव भुलाकर प्रेम से रहना चाहिए।

प्रश्न 1.किस दान को महादान माना जाता है ?

क) कन्यादान

ख) धनदान

ग) रक्तदान

प्रश्न 2. सभी लोगों के रक्त का रंग कैसा होता है ?

क) नीला

ख) लाल

ग) नीला और लाल

प्रश्न 3. रोगी के लिए हमारा लक्ष्य क्या होना चाहिए ?

क) उसकी जाति का ही रक्त मिले ।

ख) उसका रक्त स्वयं बन जाए ।

ग) रोगी निरोगी हो जाए ।

प्रश्न 4. एक ही रंग का रक्त हमें क्या संदेश देता है ?

क) सभी धर्म एक है ।

ख) सभी को प्यार से रहना चाहिए ।

ग) दोनों उत्तर सही हैं ।

प्रश्न 5किसी का रक्त अलग रंग का नहीं होता।

क) हिंदू ,मुस्लिम एवं सिक्ख

ख) हिंदू ,मुस्लिम एवं ईसाई

ग) सिक्ख ,मुस्लिम एवं ईसाई

गद्य/ पद्य

प्रश्न 1. बेटू ने बाबा को रात के समय बाहर निकलने से मना क्यों किया ?

(1अंक)

प्रश्न 2. प्राथमिक चिकित्सा पेटी में क्या -क्या रखा जाता है ?

इसका इस्तेमाल कब किया जाता है ?

(2 अंक)



प्रश्न 3. धरती को 'गुल्लक' क्यों कहा गया है ?

(2 अंक)

प्रश्न 1. उचित सर्वनाम चुनकर रिक्त स्थान की पूर्ति कीजिए ।

- अपना काम _____ करो ।

क) तुम

ख) वह

ग) स्वयं

प्रश्न 2. इन में से कौन -सा शब्द पानी का पर्यायवाची शब्द नहीं है ।

क) गगन

ख) जल

ग) नीर

प्रश्न 3. नीचे लिखे वाक्य में सही विराम चिन्ह लगाइए ।

- सेंटिला, नागालैंड में तुम्हारा घर कहाँ है

क) |

ख) !

ग) ?

प्रश्न 4. उचित शब्दों से वाक्य पूरा कीजिए ।

- मुन्न् _____ खिड़की _____ बाहर देखा ।

क) ने , से

ख) से , ने

ग) पर , से

प्रश्न 5. दिए गए वाक्यों में से सही वाक्य चुनिए ।

क) पेड़ के नीचे एक झाड़ी थी ।

ख) चूड़ियाँ आले रखा है ।

ग) कहानी अभी आधा ही हुआ था ।

प्रश्न 6. सही क्रम में लगे हुए शब्दों वाला वाक्य चुनिए ।

होता है फल का मेहनत मीठा ।

क) होता फल का मीठा मेहनत है ।

ख) मेहनत का फल मीठा होता है ।

ग) मीठा फल मेहनत होता है ।

प्रश्न 7. पड़ोसी शब्द का सही स्त्रीलिंग रूप चुनिए ।

क) पड़ोसिन

ख) पड़ोस

ग) पड़ोसनी

प्रश्न 8. उपयुक्त मुहावरे से रिक्त स्थान पूरा कीजिए ।

- गरमा-गरम समोसे देखकर मेरे _____

क) मुख में पानी-पानी हो गया ।

ख) मुँह में पानी आ गया ।

ग) मुँह में प्यास आ गया ।

प्रश्न 9. क्रिया का सही रूप चुनकर रिक्त स्थान भरिए ।

शाहजहाँ ने ताजमहल _____ ।

- क) बनाना
- ख) बनाएगा
- ग) बनवाया

प्रश्न 10. निम्न वाक्य में से विशेषण शब्द चुनिए ।

- बढ़िया नाश्ता बना है ।

- क) बना
- ख) बढ़िया
- ग) नाश्ता

रचनात्मक लेखन

(5 अंक)

दिए गए चित्र को ध्यान से देखकर इस चित्र के बारे में 3 वाक्य लिखिए । आज कल कोविड-19 फैला हुआ है । अगर आप ऐसी जगह जाते हैं तो क्या-क्या सावधानियाँ बरतेंगे ? 2 वाक्य में लिखिए ।



प्रश्न 1. शुद्ध वर्तनी चुनिए।

- क) प्रयावरण
- ख) पर्यावरण
- ग) परयावरण

प्रश्न 2 चन्द्रबिन्दु का सही स्थान पर बताइए ।

झाक

- क) झाँ
- ख) कँ
- ग) झां

प्रश्न 3. सही मात्रा लगाकर अर्थपूर्ण शब्द बनाइए ।



सीढ़__नुम__ खेती

- क) ि ि
- ख) ि ि
- ग) ि ि

प्रश्न 4 स्वामीनाथन में आए वर्णों से बना कौन-सा शब्द अर्थपूर्ण शब्द नहीं है ।

क) स्वामी

ख) थन

ग) वामी

प्रश्न 5 वाक्यांश के लिए एक शब्द लिखिए -

हिम का घर -

हि		ल	
----	--	---	--

क) मा , य

ख) य , मा

ग) स , क

सुलेख

दिए गए अनुच्छेद को सुंदर लिखावट में लिखिए ।

(5 अंक)

एक राजा को रास्ते में बूढ़ा किसान दिखाई दिया। राजा ने किसान से पूछा - बाबा आप क्या कर रहे हैं ? बूढ़ा किसान बोला - महाराज मैं आम के पौधे लगा रहा हूँ । राजा बोला - बाबा , तुम्हारी यह मेहनत तो बेकार है । बूढ़े किसान ने कहा - मेहनत कभी बेकार नहीं जाती , महाराज ! मैंने जो फल खाए, उनके पेड़ मेरे बाप- दादा ने लगाए थे। अब, मैं जो पौधे लगा रहा हूँ ; इसके फल मेरे पोते-पोतियाँ खाएँगे। किसान की सूझ से राजा खुश हुआ।

प्रश्न 1. “ फौरन ” का समानार्थक शब्द नहीं है ।

- क) तुरंत
- ख) शीघ्र
- ग) देरी

प्रश्न 2. रेखांकित शब्द का विपरीत शब्द चुनकर वाक्य पूरा कीजिए ।

- सर्दी का मौसम तो गया ,अब तो _____ का मौसम आएगा ।

- क) बरसात
- ख) शरद
- ग) गर्मी

प्रश्न 3.सही तुकवाले शब्दों की लड़ी चुनिए -

- क) राजा -खाजा - भारी
- ख) जीरा -खीरा -मीरा
- ग) बिरानी -भारी -सवारी

प्रश्न 4. चित्र देखकर पर्यायवाची शब्द चुनिए।

- क) गिरि , पर्वत
- ख) आसमान , गगन
- ग) धरा , भू



प्रश्न 5.जो चीज़ खाने में अच्छी हो उसे _____ कहते हैं ।

- क) स्वादिष्ट
- ख) कड़वी
- ग) व्यंजन

केन्द्रीय विद्यालय संगठन

बेंगलुरु संभाग

प्रश्नपत्र (नमूना) सेट-II अवधि II सत्र 2021-2022

कक्षा : पाँच

पूर्णांक: 40

विषय : हिन्दी

समय : 2 घंटे

पठन

(5x1=5 अंक)

निम्नलिखित अपठित अनुच्छेद में पूछे गए प्रश्नों के सही उत्तर चुनिए :-

फूलों की चादर ओढ़े यह पेड़ मार्च-अप्रैल से लेकर जुलाई तक गर्मी सहता है। चटक लाल व नारंगी रंग के फूलों से सजा यह गुलमोहर का पेड़ छतरीनुमा शांत भाव से खड़ा रहता है तभी इसे प्रायः सड़कों के किनारे ,बाग़ -बगीचों और पार्क में लगाया जाता है। संस्कृत में इस पेड़ का नाम राज- आभरण है जिसका अर्थ है राजसी आभूषणों से सजा हुआ वृक्ष। मधुमक्खियाँ इन फूलों पर खूब मंडराती हैं। गुलमोहर की छाल व बीजों का प्रयोग बहुत सी दवाइयों में भी किया जाता है।

प्रश्न 1) गुलमोहर का पेड़ फूलों की चादर कब से कब तक ओढ़े रहता है ?

- मार्च -अप्रैल से लेकर अगस्त
- मार्च -अप्रैल से लेकर जुलाई
- जनवरी से लेकर मार्च -अप्रैल

प्रश्न 2) गुलमोहर के फूलों का रंग कैसा होता है ?

- लाल व नारंगी
- पीला व लाल
- नारंगी व पीला

प्रश्न 3) राज- आभरण का क्या अर्थ है ?

- साधारण आभूषण
- राजसी आभूषण
- शादी के आभूषण

प्रश्न 4) गुलमोहर के पेड़ को कहाँ- कहाँ लगाया जाता है ?

- गमले में
- घरों में
- सड़कों के किनारे

प्रश्न 5) गुलमोहर पेड़ के किस भाग से दवाइयाँ बनती हैं ?

- फूल व पत्ते
- बीज व छाल
- जड़ व व फल

गद्य / पद्य

मिली एक ग्वालिन धरे शीश गगरी ,
गुरु ने कहा तेज ग्वालिन न भाग री ।

प्रश्न 1) ये पंक्तियाँ किस कविता से ली गई हैं, और इसके कवि कौन हैं?

(1 अंक)

प्रश्न 2) बिशन घायल तीतर को क्यों बचाना चाहता था?

(2 अंक)

प्रश्न 3) धरती की गुल्लक किन साधनों से भरती है?

(2 अंक)

प्रश्न 1) सर्वनाम के सही रूप से वाक्य पूरा करिए ।

----- घर कर्नाटक के किस शहर में है?

- वह
- वे
- तुम्हारा

प्रश्न 2) वे कश्मीर घूमने निकले थे। इस वाक्य में घूमने निकले थे शब्द क्या हैं ?

- संज्ञा
- क्रिया
- विशेषण

प्रश्न 3) बहुवचन लिखिए : नदी

- नादीयाँ
- नदियाँ
- नदीया

प्रश्न 4) आँख लगना मुहावरे का सही अर्थ चुनिए ।

- मर जाना
- सो जाना
- आँख चिपका देना

प्रश्न 5) भौगोलिक शब्द में कौन सा प्रत्यय लगा है: -----

- ईक
- इक
- इनमें से कोई नहीं

प्रश्न 6) भेडे चराने मेरी बेटी चली जाएगी। वाक्य पढ़कर उचित काल का नाम लिखिए ।

- वर्तमान काल
- भूतकाल
- भविष्यत् काल

प्रश्न 7) ऊँचे हैं किनारे इसके इस वाक्य में कौन सा शब्द विशेषण है?

- किनारे
- इसके
- ऊँचे

प्रश्न 8) वाक्य पूरा करिए ।

वह इतना धीरे चल रहा था मानो -----

- कछुआ हो
- हिरन हो
- बाघ हो

प्रश्न 9) दिए गए वाक्य को पढ़कर क्रिया विशेषण लिखिए ।

शिकारी जोर -जोर से चिल्ला रहा था ।

- जोर -जोर
- शिकारी
- चिल्ला

प्रश्न 10) उचित व्याकरण चिन्ह लगाइए ।

तुम कहाँ जा रहे हो

- |
- ?
- ,

अपने अनुभवों व चित्रों की सहायता से जल/पानी की उपयोगिता पर 8-10 पंक्तियों अनुच्छेद लिखिए ।



वर्तनी

(5 x 1 = 5 अंक)

प्रश्न 1) सही शब्द चुनिए।

- हीमालय
- हिमालय
- हेमालय

प्रश्न 2) सही मात्रिक वर्ण चुनकर शब्द पूरा करिए ।

___ लाहल

- को
- कौ
- का

प्रश्न 3) वर्णों का क्रम सही करके शुद्ध शब्द चुनिए ।

घि बा न

- बघीन
- बाघीना
- बाघिन

प्रश्न 4) चित्र देखकर नाम बताइए।

- दरबान
- दीवार
- दरवाजा



प्रश्न 5) पहाड़ी शब्द में किन मात्राओं का प्रयोग हुआ है?

पहाड़ी

सुलेख

(5 अंक)

निम्न अनुच्छेद को अपने सुन्दर हस्तलेख में लिखिए ।

यदि निरंतर अभ्यास किया जाए, तो किसी भी कठिन कार्य को किया जा सकता है। ईश्वर ने सभी मनुष्यों को बुद्धि दी है। उस बुद्धि का इस्तेमाल तथा अभ्यास करके मनुष्य कुछ भी सीख सकता है। अर्जुन तथा एकलव्य ने निरंतर अभ्यास करके धनुर्विद्या में निपुणता प्राप्त की। उसी प्रकार वरदराज ने, जो कि एक मंदबुद्धि बालक था, निरंतर अभ्यास द्वारा विद्या प्राप्त की और ग्रंथों की रचना की। उन्हीं पर एक प्रसिद्ध कहावत बनी –
” करत-करत अभ्यास के, जड़मति होत सुजान।
रसरि आवत जात तैं, सिल पर परत निसान।।”

प्रश्न 1) आगाह करना का समानार्थी शब्द है :-

- मनोरंजन करना
- सचेत करना
- डराना

प्रश्न 2) सुबह का विलोम शब्द है :-

- रात
- शाम
- दोपहर

प्रश्न 3) धार का तुक वाला शब्द बताइए :-

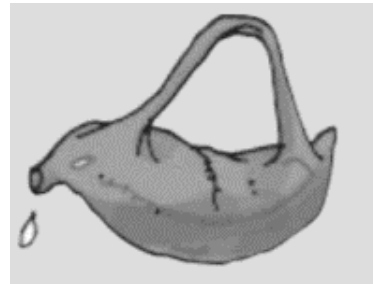
- धरा
- कार
- जाल

प्रश्न 4) वाक्यांश के लिए एक शब्द लिखिए: जो शिकार करता है

- अनाड़ी
- पुजारी
- शिकारी

प्रश्न 5) चित्र देख कर नाम बताइए |

- मुशुक
- माषक
- मशक



Sample Paper

केन्द्रीय विद्यालय संगठन

बेंगलुरु संभाग

प्रश्नपत्र (नमूना) सेट-I अवधि II सत्र 2021-2022

कक्षा : पाँच

पूर्णांक: 40

विषय : हिन्दी

समय : 2 घंटे

पठन

(5 x 1=5 अंक)

निम्नलिखित अपठित अनुच्छेद में पूछे गए प्रश्नों के सही उत्तर चुनिए :-

भारत हमारी मातृभूमि है। इसमें छह लाख से अधिक गाँव शामिल हैं। हमारे देश की पैंसठ प्रतिशत जनता गाँवों में रहती है। हमारा देश एक कृषि प्रधान देश है। मोहन का परिवार भी रामपुर गाँव में रहता है। उसके पास एक सुंदर गाय है। उसका नाम गौरी है। मोहन उसकी बहुत सेवा करता है। गाय के दो बछड़े थे। वे अब बैल हो गये हैं। वे खेत के काम में आते हैं। मोहन इनको अपना गोधन कहता है। मोहन के घर में दूध, दही, मक्खन और घी खूब होता है। खेती करने के लिए बैलों का उपयोग किया जाता है। मोहन का गाँव भी धीरे-धीरे समृद्ध होता जा रहा है। इसलिए आज भारत के गाँवों की दिशा और दशा बदलती जा रही है।

प्रश्न 1. मोहन कहाँ रहता है ?

क) मोहन शामपुर गाँव में रहता है।

ख) मोहन रामपुर गाँव में रहता है।

ग) मोहन कानपुर गाँव में रहता है।

प्रश्न 2. कौन सा कथन सही है ?

क) भारत हमारी पितृभूमि है ।

ख) हमारा देश एक कृषि प्रधान देश है ।

ग) देश की पैसठ प्रतिशत जनता शहरों में रहती है ।

प्रश्न 3. गाय के बच्चे को क्या कहते हैं ?

क) बछड़ा

ख) बैल

ग) मेमना

प्रश्न 4. मोहन किनको 'गोधन' कहता है ?

क) गाय, बैल और बछड़े को

ख) पेड़ और पौधे को

ग) गाँव के लोगों को

प्रश्न 5. अनुच्छेद के अनुसार आज गाँवों की दिशा और दशा बदलती जा रही है, क्यों ?

क) क्योंकि गाँव धीरे- धीरे खराब होते जा रहे हैं ।

ख) क्योंकि गाँव धीरे- धीरे समृद्ध होते जा रहे हैं ।

ग) क्योंकि शहर धीरे- धीरे समृद्ध होते जा रहे हैं ।

गद्य/ पद्य

प्रश्न 1. छोटी सी हमारी नदी कविता के किस शब्द से पता चलता है कि नदी के किनारे जानवर जाते हैं ? (1 अंक)

प्रश्न 2. जवाहरलाल ,किशन और कुली रस्सी से क्यों बँधे थे ? (2 अंक)

प्रश्न 3. 'बिशन की दिलेरी' पाठ के बिशन के बारे में तुम क्या जानते हो? दो वाक्यों में लिखिए । (2 अंक)

व्याकरण (10 x 1=10 अंक)

प्रश्न 1. मेरी लेख अच्छी नहीं है । इस वाक्य में 'लेख' के लिए उपयुक्त भाववाचक संज्ञा शब्द लिखिए ।

क) लेखक

ख) कलम

ग) लिखावट

प्रश्न 2. सही सर्वनाम चुनकर खाली जगह भरिए ।

शिक्षिका ने रिया कोपास बुलाया ।

क) तुम

ख) अपने

ग) तुम्हारे

प्रश्न 3. सही वचन शब्द से वाक्य पूरा करिए।

शिकारी ने चार मारीं ।

क) गोली

ख) एक गोली

ग) गोलियाँ

प्रश्न 4. बक्सा शब्द के लिए उचित विशेषण शब्द बताइए।

क) सच्चा

ख) भारी

ग) समझदार

प्रश्न 5. राजम को एक नवयुवक मिला । नवयुवक शब्द का लिंग बताइए ।

क) पुल्लिंग शब्द

ख) स्त्रीलिंग शब्द

ग) नपुंसकलिंग शब्द

प्रश्न 6. जल्दी सोना, जल्दी उठना अच्छी आदत है । रेखांकित शब्द क्या है?

क) संज्ञा

ख) क्रिया

ग) विशेषण

प्रश्न 7. सही शब्द से वाक्य पूरा करिए।

अमन भाई पढ़ रहा है ।

क) की

ख) का

ग) के

प्रश्न 8. 'आँख लगना' मुहावरा किस वाक्य में लगेगा ?

क) पढ़ते - पढ़ते मेरी -----लग गई ।

ख) चोरी करके चोर ----- हो गए ।

ग) हाथी को एक केला खिलाना ऐसे है जैसे ----- ।

प्रश्न 9. मुझे दिन रात मेहनत करनी पड़ती है । इस वाक्य में योजक चिह्न कहाँ लगेगा?

क) मुझे- मेहनत

ख) दिन - रात

ग) करनी-पड़ती

प्रश्न 10. भूतकाल क्या बताता है?

क) आने वाला समय

ख) चल रहा समय

ग) बीता हुआ समय

कल्पना करो यदि तुम्हारा घर नदी के किनारे होता तो तुम वहाँ क्या- क्या करते ? एक अनुच्छेद लिखो ।

वर्तनी

(5 x 1=5 अंक)

प्रश्न 1. सही स्थान पर ' र ' का प्रयोग वाला शब्द चुनिए ।

क) परबत

ख) पर्वत

ग) प्रवत

प्रश्न 2. अक्षरक्रम को सही कर शब्द बनाइए ।

बैलको खींचते हैं। (ल बै डी गा)

क) डीलगाबै

ख) बैलगाडी

ग) गाडीबैल

प्रश्न 3. सही शब्द से खाली स्थान भरें ।

मेरी पिताजी आ रहे ----- ।

क) है ।

ख) हैं।

ग) हे।

प्रश्न 4. सही अक्षर भरकर सही अर्थ वाला शब्द बनाएँ ।

राजी प ___ ई में बहुत होशियार है ।

क) डा

ख) ढा

ग) ढा

सुलेख

दिए गए अनुच्छेद को सुंदर लिखावट में लिखिए । (5 अंक)

'वाणी' ही मनुष्य को अप्रिय व प्रिय बनाती है। यदि मनुष्य मीठी वाणी बोले, तो वह सबका प्यारा बन जाता है और उसमें अनेक गुण होते हुए भी यदि उसकी बोली मीठी नहीं है, तो उसे कोई पसंद नहीं करता। इस तथ्य को कोयल और कौए के उदाहरण द्वारा सबसे भली प्रकार से समझा जा सकता है। दोनों देखने में समान होते हैं, परंतु कौए की कर्कश आवाज और कोयल की मधुर बोली दोनों की अलग-अलग पहचान बनाती है, इसलिए कौआ सबको अप्रिय और कोयल सबको प्रिय लगती है।

"कौए की कर्कश आवाज और कोयल की मधुर वाणी सुन।

सभी जान जाते हैं, दोनों के गुण।।"

शब्द भण्डार

(5 x 1=5 अंक)

प्रश्न 1. दुर्गम शब्द का अर्थ है ।

क) जहाँ पहुँचना कठिन हो।

ख) जहाँ पहुँचना आसान हो।

ग) सुगम रास्ता ।

प्रश्न 2. सही विपरीत शब्द वाला जोड़ा चुनिए ।

क) नीची - खाली

ख) बहादुर - कायर

ग) दोस्त- मित्र

प्रश्न 3. पगडंडी किसके लिए सही शब्द होगा ?

क) छोटी डंडी

ख) पहाड़ों के बीच में से कच्चा रास्ता

ग) पानी से भरा

प्रश्न 4. गलत पर्यायवाची शब्द बताइए ।

क) पानी - जल - नीर

ख) धरती - भू - धरा

ग) पक्षी - नर - चिड़िया

प्रश्न 5. उड़ाई का तुक शब्द होगा ।

क) मलाई

ख) चेला

ग) जीरा

Sample Paper

**KENDRIYA VIDYALAYA SANGATHAN
BENGALURU REGION
SAMPLE QUESTION PAPER- TERM II: SESSION 2021-22**

**CLASS: V
SUBJECT: EVS**

**MAX. MARKS: 40
TIME: 02 HRS.**

SECTION-1 [OBSERVATION AND REPORTING]

I. Observe the pictures and answer the questions.


1. Name the tent that protects Changpas from extreme cold .
- Pashima
 - Rebo
 - Lekha



2. What is the disaster caused by sudden shaking of earth's surface called ? *
- Volcano
 - Earthquake
 - Famine



3. Which process of agriculture is observed in the picture?
- Harvesting
 - Ploughing
 - Irrigation



4. What is the meaning of 'Torang' in Kuduk language?
- Adivasi
 - Forest
 - animals

5. Name this musical instrument and how is it played.

- a. Violin, using strings
- b. Flute , by blowing
- c. Been , by blowing



6. Many families in Srinagar live in 'donga' These boats can be seen in _____ lake and _____ river.


- a. Kaveri river and Dal lake
- b. Dal lake and Jhelum river
- c. Dal lake and Yamuna river

7. Which gas is used for cooking in house?

- a. Liquid Petroleum gas(LPG)
- b. Petrol
- c. Wood

8. Some old houses in Srinagar have a special window which comes out of the wall known as

- a. Lekha
- b. Donga
- c. Dab



9. What do you understand by the term 'Identical twins'?

- a. Both siblings look different.
- b. Both the siblings look alike.
- c. Two friends who look alike.



10. Name the sport and how many players are there in each team?

- a. Football , 11 players
- b. Basket ball , 5 players
- c. Volley ball , 5 players



SECTION-2 [IDENTIFICATION AND CLASSIFICATION]

A] Who am I? (1 x 2 = 2 marks)

1. I am a world famous shawl made from the wool of a goat that are found on very high altitudes . Who am I? _____



2. I am used to run the vehicles. I am a gas and emit less smoke. Who am I? _____

Identify the picturs and answer the questions. (1 X 3 = 3 marks)

1. Identify the person. He is _____

He worked on _____ plants.



2. Identify the person in the picture who is known as 'daughter of the jungle' . _____

She opened a centre and called it as _____ which means jungle.



3. Are the children in the picture safe? How?

Ans: _____



B] Answer the following questions. (3 x 2 = 6 marks)

1. Sequence the argricultural process in correct order and name each process.



2. Observe the picture and answer the questions.

- In the picture name a vehicle that does not pollute the environment and also using it everyday is a good exercise for our body.
- Why does this vehicle not pollute the environment?



Ans: _____

- Anil is a two year old boy who suddenly was unable to walk. Doctor told he was affected by polio.
 - Which part of the body gets affected by polio?

Ans: _____

- Which programme was introduced by the government to eradicate polio?

Ans: _____

C] Answer the following questions. (4 marks)

- Identify and name the industry shown in the picture. _____

- Which raw material is used in these refineries?

Ans: _____



- 'Petrol and diesel will not last forever. Save it for the future.' Justify the statement and give one suggestion to save fuel.

Ans: _____

Suggestion-

i. _____

SECTION-3 [DISCOVERY OF FACTS]

A] Fill in the blanks by choosing the correct answer.(1 x 5 = 5 marks)

1. Team spirit , light , fuel , Venezuela , India , Condensation , Evaporation , heavy

1. Hot air is _____ and rises up.
2. _____ is the process where water vapour becomes liquid.
3. The materials which are burnt to produce heat energy are known as _____.
4. _____ is the feeling of togetherness among the members of a team.
5. The country with the richest source of oil reserve is _____.

B] Answer the following questions.

1. What is Jhoom farming? In which state it is done? (2 m)

Ans: _____

2. Give reasons. (2 x 2 = 4 marks)

- a. During winters, families in Leh live in the ground floor of their houses. Why ?

Ans: _____

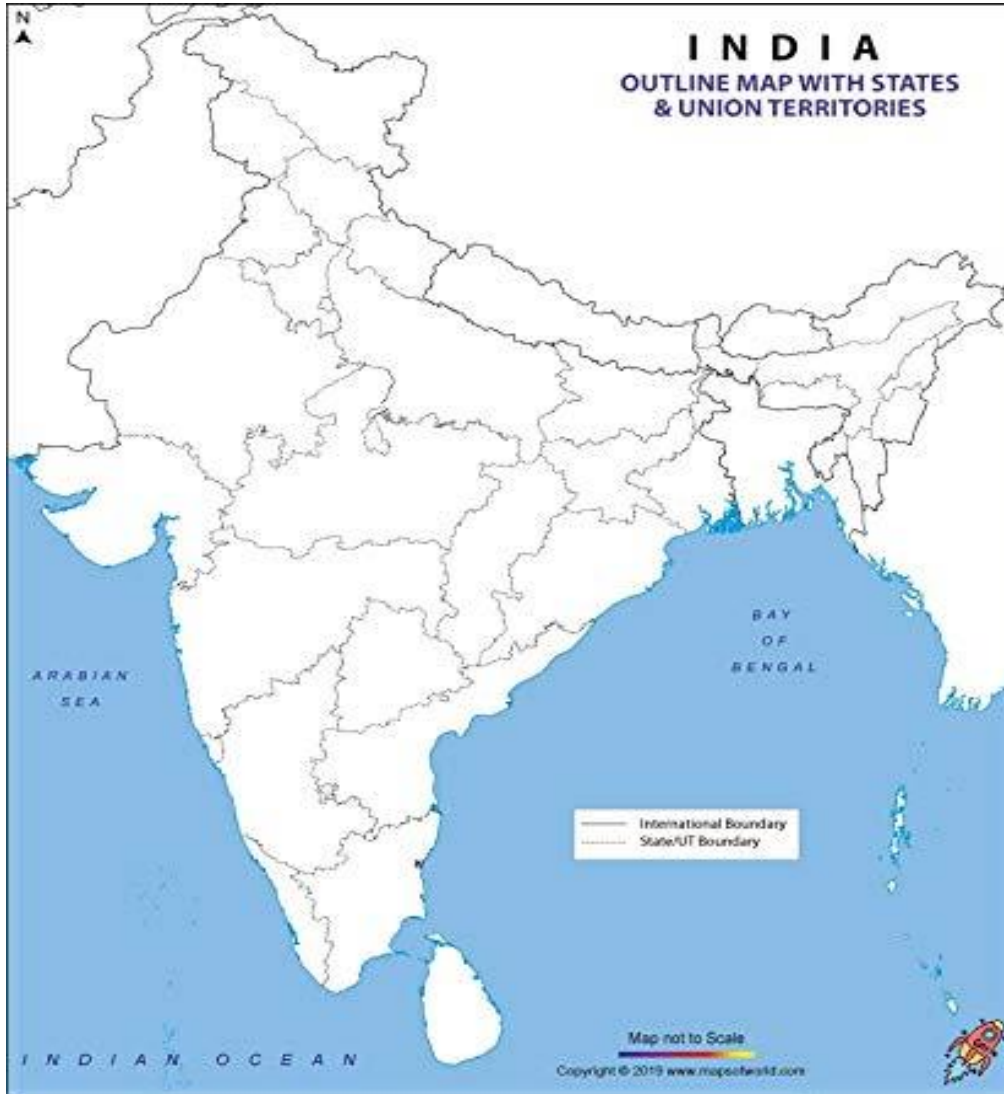
- b. "Forest is our collective bank". Write two sentences to prove the statement right.

Ans: _____

C] Read the questions and mark the places in the given map. (1 x 4 = 4 marks)

1. The state in South India has houseboats as a tourist attraction _____
2. The state in which Bhuj earthquake occurred on 26th January 2001 is _____
3. India's cold desert is located in _____

4. Cheraw dance is the special dance performed by the people of _____



**KENDRIYA VIDYALAYA SANGATHAN
BENGALURU REGION
SAMPLE QUESTION PAPER- TERM II: SESSION 2021-22**

**CLASS: V
SUBJECT: EVS**

**MAX. MARKS: 40
TIME: 02 HRS.**

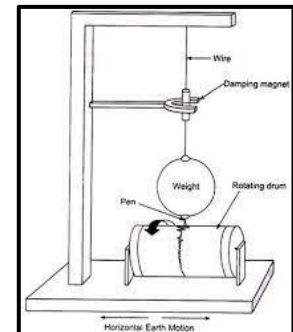
SECTION-1 [OBSERVATION AND REPORTING]

I. Observe the pictures and answer the questions as directed.

1. Name the natural calamity that struck India in 2004.



2. Instrument used to detect and record earthquake.



3. _____ is a solid fossil fuel formed from decomposed plant remains.



4. Sugar and _____ are made from sugarcane plant.



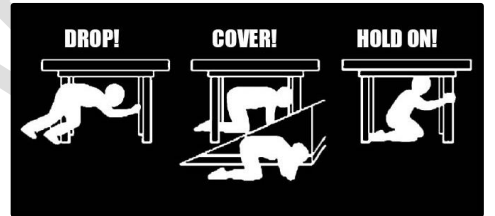
5. In this team game how many members are needed in one team?



6. The highest dam in India is



7. This is the safety tip at the time of a natural calamity.
Name the natural calamity.



8. In earlier times farmers used _____
leaves to protect seeds from insects.



9. Observe the picture and write the source of energy needed for this. _____.



10. Name the immunisation programme started by the government of India to eradicate Polio. _____ .



SECTION-2 [IDENTIFICATION AND CLASSIFICATION]

VSA (1X5 = 5)

I. Identify the pictures and answer the questions as directed.

1. Identify the sports woman who won Rajiv Gandhi Khel Ratna award in 2016.



2. Identify the social reformer.



3. Identify the dance form of Mizoram.



4. Changpas keep their animals in _____



5. Identify the Indian river flowing through the states of Karnataka and Tamilnadu. _____



Short Answer Questions. (3 X 2 = 6)

1. Correlate

a. Breath in : Oxygen ; breath out : _____

b. less rainfall : drought ; more rainfall : _____

Answer in two to three sentences.

2. Mohan classified the musical instruments into two categories. On what basis did he classify?

Group A	Group B
Flute	Tabala

Clarinet Saxophone Trumpet	Drum Xylophone Violin
----------------------------------	-----------------------------

3. Write any two differences between old methods of farming and modern methods of farming.

Long Answer Questions. (1X 4 = 4)

1. Locate the following states in the given map of India.

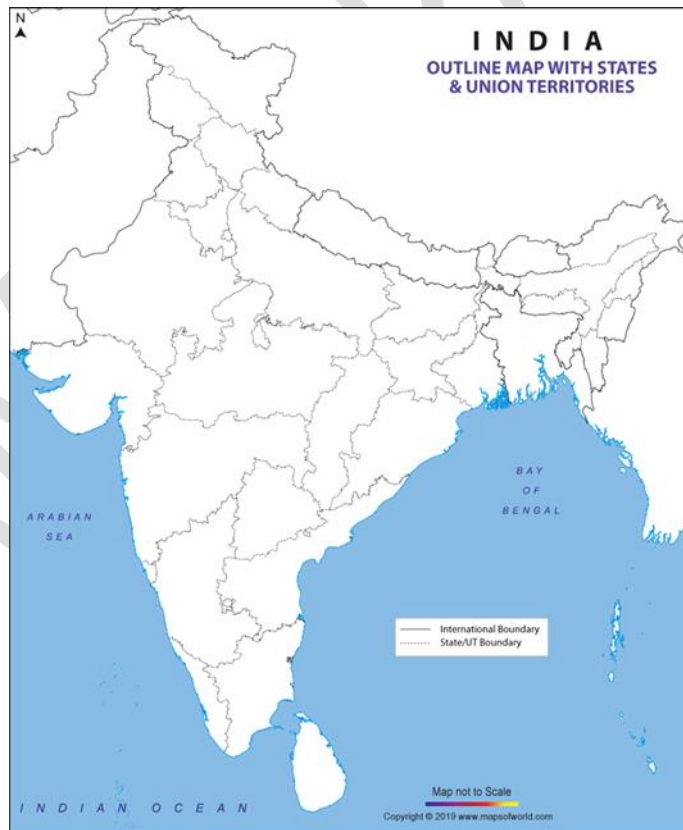
a. A north eastern state where thick forests are found.

b. the Union territory where Changpa tribe lives.

c. Mumbai is the capital of this state.

d. Bengaluru is the state.

capital of this



SECTION-3 [DISCOVERY OF FACTS]

I. Choose the correct answer from the options given and fill in the blanks

1. This is an acquired trait. _____
a. colour of the eyes b. shape of the ear lobe c. handwriting
2. The full form of WHO is
a) World Housing Organisation b) World Health Organisation
c) Women's Health Organisation
3. Forests are our _____
a. collective banks
b. collection centres
c. collective trees
4. It is a natural fertiliser. _____
a. cow dung
b. Factum phose
c. urea
5. The agent who lends money is called _____
a. kuduk
b. Mukadam
c. Torang

Short Answer questions. (3X 2 = 6)

Answer in two to three sentences.

1. Seeds should be sown at proper spacing. Why?
2. Chetan took a hot shower on a winter day. After the bath he could see drops of water on his bathroom mirror. How did it happen?

3. Rohan's house was in a village, on the bank of a river. Their livelihood was farming. Due to the development plans of Government, a new dam was constructed there. His family had to move to a city.

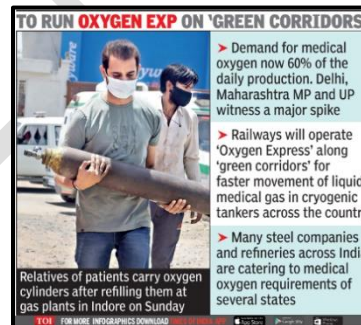
He took admission in a new school. What problems must have he faced due to this displacement due to the construction of dam?

Long Answer questions. (1X 4 = 4)

1. Mountaineers carry oxygen cylinder along with them while climbing. Why?



2. Given here are a few recent newspaper cuttings about the scarcity of oxygen cylinders. Why do people need oxygen cylinders? Explain.



OXYGEN DEMAND & SUPPLY			
Division	Home Isolation Patients	Cylinders In Demand	Cylinders supplied
Agra	4,964	684	512
Bareilly	13,829	928	199
Gorakhpur	12,474	900	631
Lucknow	21,617	598	323
Ayodhya	5,993	185	185
Moradabad	13,657	1,125	431
Aligarh	2,842	169	57
Prayagraj	5,960	366	366
Meerut	22,871	545	268
Kanpur Nagar	10,452	176	159



**KENDRIYA VIDYALAYA SANGATHAN
BENGALURU REGION
SAMPLE QUESTION PAPER- TERM II: SESSION 2021-22**

**CLASS: V
SUBJECT: EVS**

**MAX. MARKS: 40
TIME: 02 HRS.**

SECTION-1 [OBSERVATION AND REPORTING]

I] Answer all the questions.(MCQ)

1[10]

1. Characteristics or habits got genetically from our family are called _____.

- a) Acquired Traits b) Inherited Traits c) Individual Traits

2. _____ are called farmer's friends.

- a) earthworms b) rats c) monkeys

3. Name this. It uses wind energy to produce electricity.

- a) Solar Panel b) Nuclear Plant c) Wind Mill

4. To play which of this musical instrument you need not blow out air.

- a) Harmonium b) Been c) Mouth Organ

5. The sudden shaking or trembling of the surface of earth is called _____.

- a) Landslide b) Famine c) Earthquake

6. This art form which is a beautiful carving on wood is called _____



- a) Khatamband
b) Dab
c) Meharab

7. Name this bog cone shaped tent made by stitching together the strips of woven yak hair used to protect from strong icy winds.



- a) Lekha
b) Donga
c) Rebo

8. From your observations name that which is not a natural disaster.

- a) Tsunamis b) stampede c) Volcanic Eruption

9. Name this great personality who worked for eradicating untouchability and for the upliftment of untouchables.



- a) Dr. Bhimrao Ambedkar
- b) Mohandas Karamchand Gandhi
- c) Babu Jagjivan Ram

10. Which of this is a team game?

- a) Weightlifting
- b) Skating
- c) Kho-Kho

SECTION-2 [IDENTIFICATION AND CLASSIFICATION]

II] Answer in a word or a sentence.

1[5]

1. These seeds like lentils, beans and chickpeas are commonly called as _____.
[Millets/ Spices/ Pulses]

2. _____ is a waste matter from plants and animals which is put on the soil to make the plants grow better.
[Manure/ Fertilizer/ Pesticide]

3. Traditional cultural dance performed in Mizoram, characterized by the use of bamboo staves to set the rhythm for dancers is called _____ dance.
[Laho / Cheraw / Santhali]

4. _____ is a fuel used for cooking food.
[Petrol/ CNG/ LPG]

5. Doctors use _____ to listen to our heartbeat.
[Stethoscope/Microscope/Microphone]

III] Answer in two to three sentences.

2[3]

1. Given are the impacts of migration of people from villages to big cities. Write (P) for **positive impacts** and (N) for **negative impacts**.

- . Better job and quality of life. ()
- . Unhygienic conditions and crime. ()
- . Exploitation of migrants. ()
- . Better opportunity for education. ()

2. Name a thing each in which this energy conversion is taking place-

a. Electric energy to light energy: _____

b. Sun energy to heat energy: _____

3. To do which of these activities do we blow out air? Put (✓) mark.

a. To blow away dust. ()

b. To light a candle. ()

c. To stoke a fire. ()

d. To deflate a balloon. ()

IV] Other than sports women have gained recognition in various other fields. Name two women personalities in each case. 4[1]

Field	Women Personalities	
1. Politics		
2. Mountaineering		
3. Police Department		
4. Defense		

SECTION-3 [DISCOVERY OF FACTS]

V] Answer in a word or sentence. 1[5]

1. Hot air _____ and cold air _____. [Rises up/ sinks down]

2. In earthquake prone areas _____ houses are better.
[Clay and wooden/ Stone and brick]

3. We should switch off the engine of the vehicles at the red light to _____.
[save money and damage/ save fuel and avoid pollution]

4. Afsana has jumped over the 'gender wall'. Here the term 'gender wall' refers to _____.
[Gender bias/ gender sensitivity]

5. During winters people in Leh live on the ground floor of their house which has no windows because _____. [it keeps them warm from outside cold weather/ the house may fall due to snowfall]

VI] Answer in two to three sentences.

2[3]

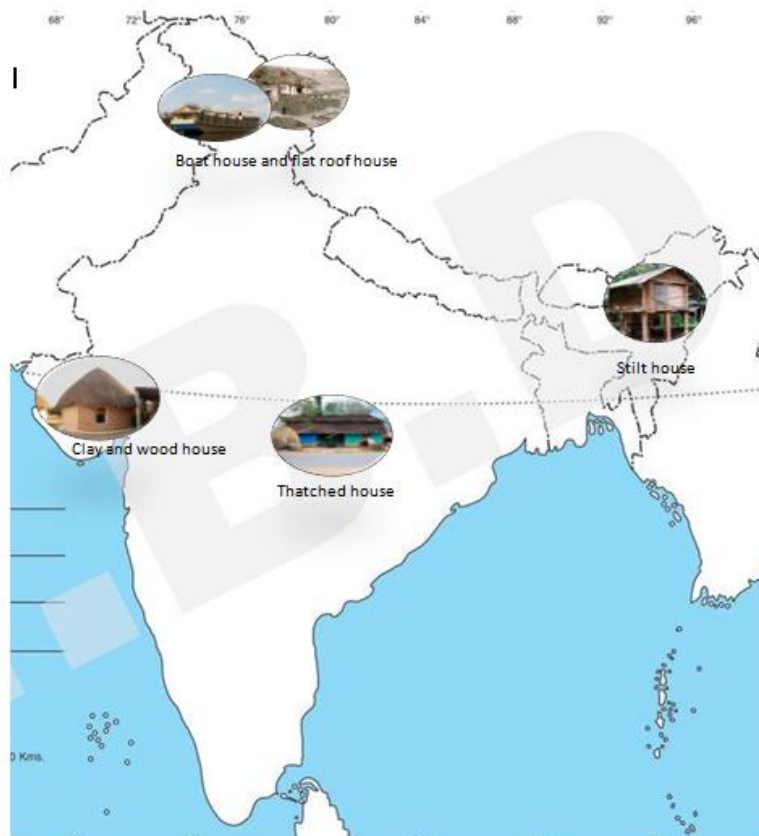
1. For the forest dwellers, forest is their collective bank. Why do you think forests are called 'Collective Bank'?

2. Why should farmers avoid growing same crop over and over?

3. Which different developmental projects lead to migration of people of rural and forest areas to other places? Name any two.

VII] Look at the location of the type of the houses in the map. Name these states and also match them to the dance forms of these states given below.

4[1]



Bas Dandia



Cheraw Dance



Karma Nritya



Shendol Dance

Kendriya Vidyalaya Sangathan

Bengaluru Region

Sample Question Paper Set III- Term II Session 2021-22

Class:

Max Marks: 40

Subject:

Time: 2 Hours

Read the following informal letter and answer the questions that follow. (5 x1=5)

502 A,
Block B,
Vigyan Vihar,
New Delhi.

17 January 2022

Dear Prabha,

I received your letter yesterday after a long time. Hope you and your parents are fine. My school reopened on 3rd January, after the winter break.

I was very happy to know that you have got the first prize in the English Recitation competition held in your school last week. I too received a trophy as prize yesterday for dance competition. I also got a new set of storybooks as birthday present from my sister Nisha. They are very good. I shall show you all these when you come to visit us. I am sure you'll love it.

Convey my regards to your parents.

Your Loving Friend,
Swapna

Q1. Who has written this letter?

- a. Prabha b. Swapna c. Nisha

Q2. What did Swapna get as birthday present?

- a. story books b. prize c. trophy

Q3. To whom was the letter written?

- a. Prabha b. Swapna c. Nisha

Q4. For which competition did Prabha get a prize?

a. dance

b. recitation

c. speech

Q5. What all did Swapna want to show her friend?

a. prize and presents

b. prize and house

c. prize and school

B. Prose and Poetry

(2 +2+1=5)

1. A good friend has many qualities. Write any two qualities needed to be a good friend.
2. How did the king want to select the future king? Who was selected finally?
3. "As soon as they passed over the Medicine River, the bridge crashed down into the raging waters below". Name the lesson from which this sentence has been taken.

C. Grammar

(10 x1=10)

1.Fill in the blank by adding a **suitable prefix** to the word given in the bracket.

It is very _____ to tease anyone. (kind)

2.Rearrange the **jumbled words** to make a meaningful sentence

one Discipline of is most important everyone's thing life in the

3.Use an appropriate **comparison**.

The boy was tired and walked as slow _____

4.Fill in the blank with an appropriate **article**.

Mr Raghu is _____ honest man.

5.Circle the words which can end with the suffix '**less**'

no

lend

care

thing

home

6. Use a **group name** and fill up.

The children looked at the _____ of stars.

7.Fill in the blank with a suitable **form of the verb**.

They are _____ a new plan (make)

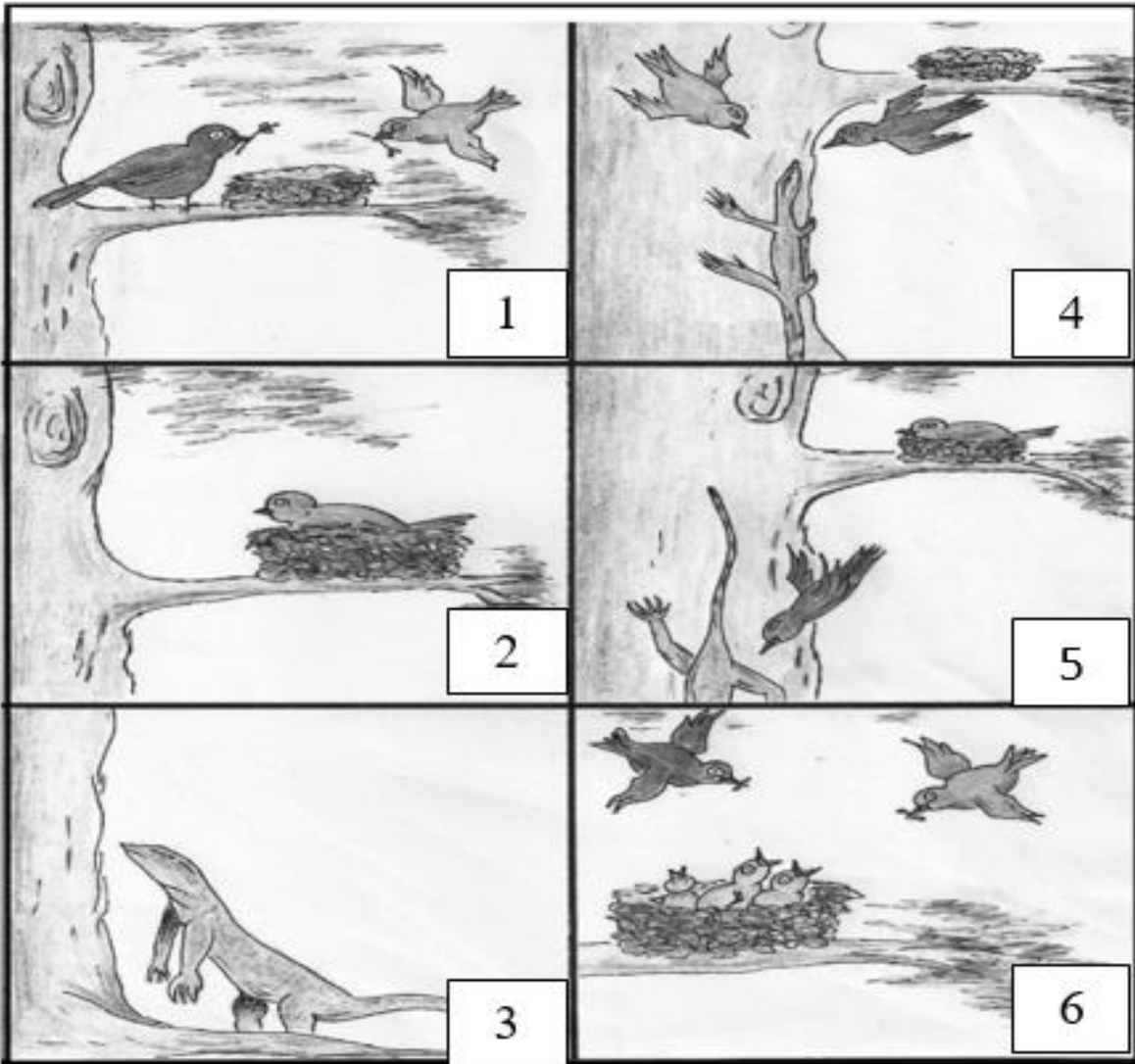
8. Rewrite using a **pronoun** in place of the underlined words.

Manu and Mohan live in Dharwad. Manu and Mohan are smart boys. Their parents are proud of Manu and Mohan.

D. Creative Writing

(5 x1=5)

Look at the given pictures and write a short paragraph in about five sentences. Suggest a suitable title for it.



E. Spellings

(5 x1=5)

1. Three words are wrongly spelt. Correct the words and rewrite the sentences.

A marriage processhun was going on a suspention bridge. Suddenly the bridge collapsed and many people got hurt. Their journeee was not lucky.

2. Tick the right word

Snow white, snow bright was her main/mane.

A white pigeon is a symbol of peace/piece.

3. Which set of double letters should be used to fill in the blank?

pa __ engers

a. rr

b. tt

c. ss

F Vocabulary

(5 x1=5)

1. Give one word for the following.

A land with no vegetation- _____

2. Complete the following sentences using the correct words that have the similar meaning of the underlined word.

a) If you prepare well for the **competition** you win the _____.

b) The train suddenly **stopped** and nobody knew why it _____.

3. Make new words starting with the last two letters.

i) explore _____ ii) flash _____

G Handwriting

(5 marks)

Copy down this paragraph, neatly.

“Swachh Bharat Abhiyan” is a mission led by the Government of India to make India a clean country. It was launched on October 2 2014 at Raj Ghat, New Delhi. The main aim of SBA is to clean up the streets, roads and develop the infrastructure of our cities, towns and villages. It also aims to provide safe and adequate drinking water to everyone. We can do our bit by not littering the streets and segregating our household waste.

KENDRIYA VIDYALAYA SANGATHAN

BENGALURU REGION

SAMPLE QUESTION PAPER -II TERM; SESSION -2021-22

CLASS: V

MAX. MARKS: 40

SUBJECT: ENGLISH

TIME: 2 hrs.

I) Read the following passage and answer the questions given below. (5x1=5)

Ever since he was six years old, Nick had wanted to get a puppy. His parents always refused. They said he wasn't capable of taking care of a puppy. "You have no idea how much work a puppy is," Dad said. "You would have to housebreak the puppy, train the puppy to obey you, and groom it, too." "And then there's taking the puppy to the vet, playing with it, and feeding it," Mom added. "It's not that I'm against having a puppy. But a puppy takes up a lot of time." Nick couldn't think of a way that he could convince his parents that he was ready for a puppy. Then, he got an idea. "If I volunteer at the animal shelter," he thought, "I'll bet Mom and Dad will see that I'm ready to take care of a puppy!"

Q1. Why did Nick's parents refuse to get him a puppy?

A: _____

2. What idea flashed to Nick that he can convince his parents to get him a puppy?

A: _____

Q3. A person who volunteers is someone who :

- a. studies for tests.
- b. does no work at all.
- c. does work without being paid.

Q4. The synonym of convince in the passage is _____ .

- a. sure
- b. persuade
- c. presume

Q5. What does the phrase have no idea mean?

- a. do not understand
- b. can't think
- c. ran out of ideas

II) Prose/ Poem

Answer the following questions. (5)

Q1. "There was no station in sight ." What does the line mean in the lesson 'Around the world.'

Q2. "They only did to me what I keep doing to the other children."

- i) Name the lesson from which this line is taken from
- ii) Who said this sentence to whom?

Q3. Name the poet of the poem- 'Nobody's Friend.'

III) GRAMMAR (10X1=10)

1. Rewrite the passage using pronouns.

Priyanka and Ramya are sisters. Priyanka and Ramya were hungry. Mrs Ali gave Priyanka and Priyanka food. They thanked Mrs Ali.

2. Complete the following using group names.

1.The _____ of elephants entered the sugarcane field.

3. Choose the correct answer

1.He fell asleep _____ he was reading the book.

- a. and
- b. while
- c. which

2.He is very intelligent _____ careless.

a. so b. but c. and

4. Complete the following using the correct form of words.

1. Meena is _____ than Rakesh but Asha is the _____ student of the class. (intelligent)

5. Choose the correct verb to fill in the blank.

a. That chair _____ when you sit in it. (spined, spins)

b. He _____ to listen to music. (love, loves)

6. Choose the correct sentence.

i. **parts many coffee popular in world the is very of.**

a. Coffee is popular in many parts of the world.

b. Many parts of the world coffee is popular .

c. Coffee is very popular in many parts of the world.

7. Rewrite the following sentences, adding the correct article where needed.

Cattle were grazing in field.

a , an , the

8. Choose the correct word and complete the following .

b) Today the _____ is good.

a. whether b. weather

9. Rewrite the sentence using past tense form.

1. The masons build the house.

A: _____

10. Punctuate and rewrite the given sentence.

Ruskin Bonds poem "Firefly in My Room" is about insects

A: _____

II) Spelling / Vocabulary

(10X1=10)

1) Complete the word using the given clues .

- i) pa ___ en ___ s (people travelling by train)
- ii) ho ___ ___ d (terrible)

2) Encircle the correct word.

- i) cunductor conductor..... conductor
- ii) elivators... elevatours.... elevators

3) Give one word for the following

- i) greatly surprised : _____
- iii) A person who tells the story of his life : _____

4) Write two words with silent letter: 't'

- i) _____
- ii) _____

5) Complete the given words using : ai / ia

- i) famil_____r
- ii) bacter_____

6) Write two rhyming words for the following words.

- ii) friend _____

7) Write a word each the given suffix '---less' and '--- ly'

- i) ___less - _____
- ii) ___ly - _____

8) Give one word

To break the continuity of-

9) Write two words with prefix: im _____ .

i) _____

ii) _____

10). Which sets of words have been spelled correctly?

whisel, swiming, minister

giants, friend, toffee

sandwich , handkerchief, langauges

special, procession, taught

CREATIVE WRITING

(5)

- a) You are the house captain there is going to be a inter house Dance Competition .Write a notice to inform students about the selection process.

(OR)

- b) Write a character sketch of Malu Bhalu in about fifty words

HANDWRITING

Write the give passage neatly. (5)

It is only when God is with us that we succeed. Without God's grace we cannot achieve anything. Even little things seem difficult when we lack God's grace; our strength seems reduced to zero. But when God is with us we become heroes. God is the source of all strength. When we trust in God, and derive strength from God, we are unbeatable.

KENDRIYA VIDYALAYA SANGATHAN

BENGALURU REGION

SAMPLE QUESTION PAPER -I TERM; SESSION -2021-22

CLASS: V

MAX. MARKS: 40

SUBJECT: ENGLISH

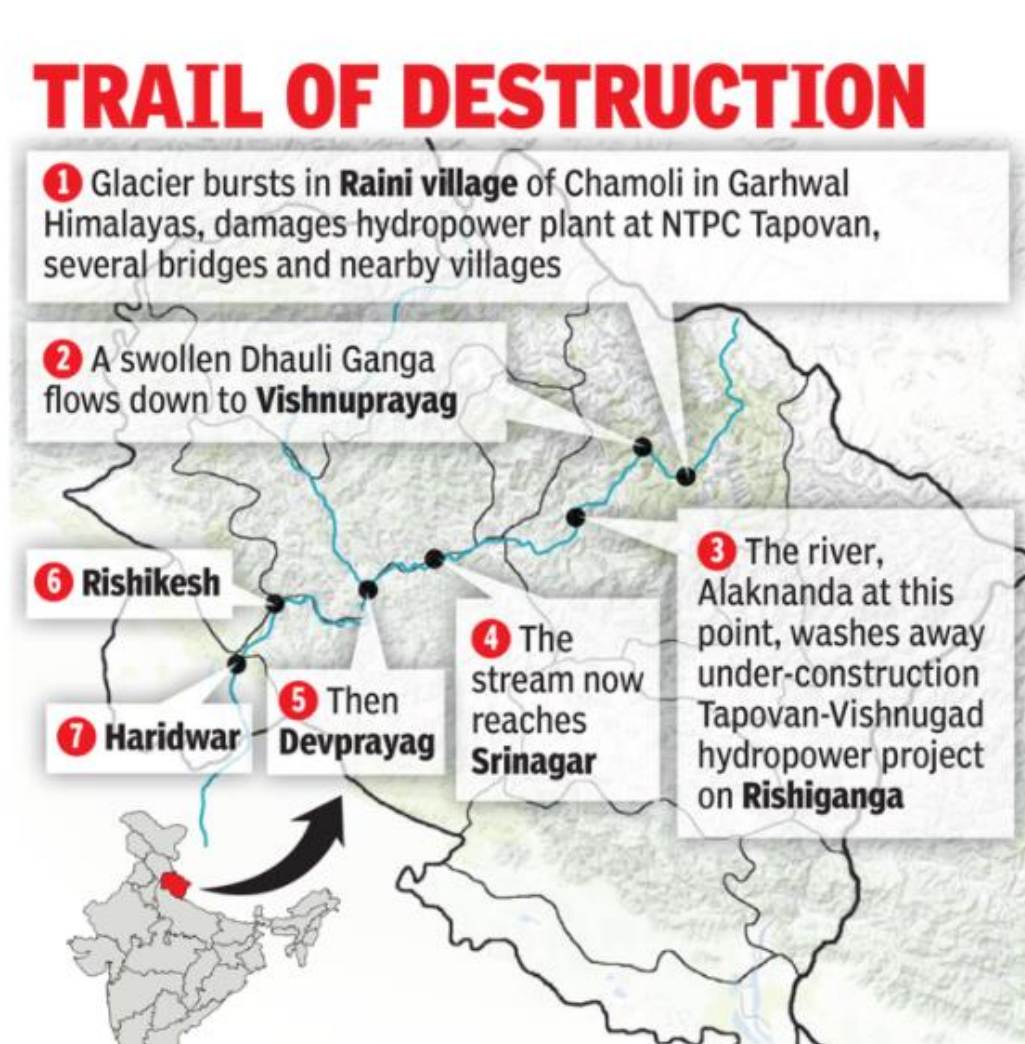
TIME: 2 hrs.

A Reading

Look at the picture and answer questions 1 to 5

(5 X 1=5)

Glacier Burst in Uttarakhand



1. Name the places which were destroyed by the glacier outburst?
2. Which river washed away the Tapovan -Vishnugad hydropower project?
 - Devprayag
 - Alaknanda

- Dhauli Ganga
3. The meaning of 'under construction Tapovan Hydropower Project' is:
The project was getting constructed and was not finished.
The project was built underground.
The project was in the foothills of the Himalayas.
 4. Trace the stream's journey.
 - Srinagar-Devprayag-Haridwar
 - Devprayag-Rishikesh-Haridwar
 - Devprayag-Haridwar- Rishikesh
 5. Where is Garhwal?

B. Prose/Poetry (Reader)

(2+2+1=5)

1. Malu clasped her mother and landed into the water. What happened after that?
2. Do you think the Sultan was generous?
3. Name the lesson in your reader which has been written by Jules Verne.

C. Grammar

(10 X1=10)

Do as directed :

1. David slept all his life without doing any work. He sold his house to make a living (Rewrite using the correct past tense of the verbs)
2. There lived a honest man in a United States of America.(Correct the articles and rewrite)
3. A dog is stronger than a cat.(Rewrite using 'as strong as')
4. No other school is as beautiful as ours(Rewrite using the superlative degree of 'beautiful').
5. Its quiet and calm here, isn't (Punctuate the sentence)
6. He rarely works hard , that's why he scores well(Use the correct adverb and rewrite)
7. Jaya listened to music on her ipod. After an hour it ran out of charge.

Pick the pronoun used for Jaya-..... ; ipod -.....

8. The teacher told the students not to be _____to others (add a prefix to 'kind' and fill)

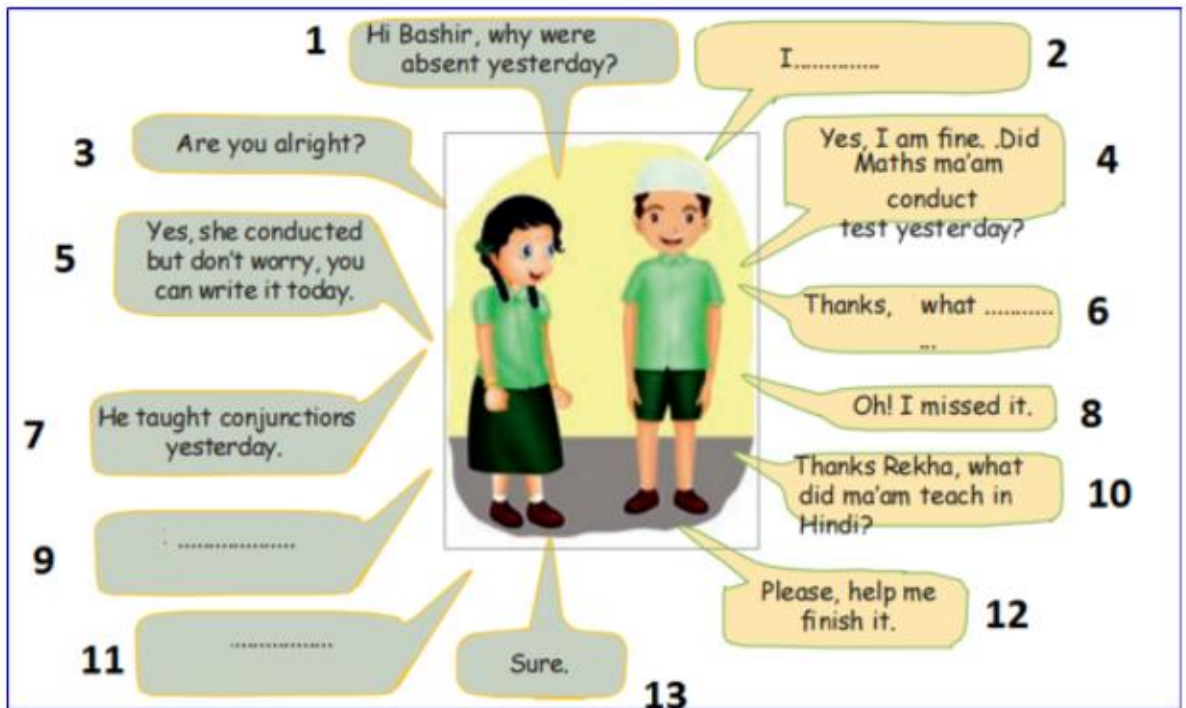
9. When something is use.....(ly/less/ful) we throw it away.

10. The cows were grazing in the field.(Replace the underlined word with a collective noun and rewrite)

D.Creative Writing

Complete the conversation in the picture. Put the numbers and write the answers.(2, 6, 9 and 11).

Give a title for this conversation .



E Spelling

1. Write any two words which have a silent 'b'.
2. The children were very _____ (Rearrange the letters –' u q i t e' and fill)
3. sandwitch , sandwhich , sandwich (Circle the correctly spelt word)
4. Which letters are used twice in the word (o, f, e)- t
5. Thewere treated by the nurse with a lot of
(pick the right pair of words)

- patience, patient
- patient, patience
- patients, patience

F Handwriting

(5 marks)

Folk tales are part of an oral tradition, which means they originated in the era before literacy and are passed down orally from generation to generation. Common types of folk tales include **fairy tales, fables, trickster tales, and 'why' stories**. From turtles who talk too much, jackals and mangos, to tigers and laughing fish, Indian folk tales delight people of all ages with beautiful narratives on friendship, morality and philosophy. Clever tricksters, villains and brave heroes make up the beautiful folk history of India.

G Vocabulary

(5 x1=5)

1. Add one more word to the group-' nervous, panic, sacred
2. Which word can be added after the word 'several.....'.
 - laugh
 - idle
 - times

3. Give one word for the following

- unwanted plants
- person who narrates a story

4. Rewrite using the correct homophone-

The pupil were the only once who loved their king.