

**Kendriya Vidyalaya Sangathan****Bengaluru Region****Sample Question Paper Set III- Term II Session 2021-22**

Class : III

Max Marks: 40

Subject: English

Time: 2 Hours

**A.READING****(5×1=5)****I. Read the passage and answer the questions:**

Once there lived a cap seller who sold caps in the market. One day he was passing through a forest to go to village carrying a basket full of caps on his head. He felt tired, and fell asleep under a tree. After some time, he woke up and found his basket empty. He was worried. He saw some monkeys sitting on the tree wearing the caps.

1. What did the cap seller sell?
2. Where was he going?
3. What did he find when he woke up?
4. One who sells cap is known as \_\_\_\_\_.
5. Pick the rhyming word of 'full' from the story.

**B.TEXTUAL QUESTIONS**

1. What does the child decide to do? 2 marks
2. Where were the people going? 2 marks
3. How old is the speaker? 1 mark

**C.GRAMMAR****( 10×1=10)****Do as directed**

1. Give the gender of  
father \_\_\_\_\_
2. Use capital letter and full stop wherever necessary.  
delhi is the capital of india

3. It was a cold day yesterday.

We did not \_\_\_\_\_ to school.( go ,went )

4. Write the plural of

goose \_\_\_\_\_

5. Use the word in sentence of your own- 'desert'

6. Fill in the blank with -do not /does not.

I \_\_\_\_\_ want to trouble you.

7. Underline the action word in the sentence.

A squirrel leaps from tree to tree.

8. Underline the describing word in the given sentence.

I can walk across the desert even on a hot afternoon.

9. Choose the correct word from the bracket.

My father is \_\_\_\_\_ home.( at , in )

10. Write the short form of

do not \_\_\_\_\_

**D.Creative Writing**

**(5)**

**Describe the picture in five sentences.**



**E. SPELLING 5×1=5**

1. Select the right spelling:  
a) throun      b) thorn      c) thorne
2. Rearrange the jumbled letters to form a word:  
l e s g g w i
3. Fill in the missing letters:  
g \_ \_ n t
4. Add 'ish' to the given word:  
child \_\_\_\_\_
5. Write 'ing' form of:  
clap- \_\_\_\_\_

**F. HANDWRITING****(5)****Rewrite the passage neatly:**

Knowledge is what all that a person knows. Without knowledge, it is not possible to rise high in life. A wise or knowledgeable man is truly powerful in all respects. If a person has knowledge, he can achieve anything in life. The more you acquire knowledge, the more you become humble.

**G.VOCABULARY****(5 x1=5)**

1. Write the rhyming word for 'day'.
2. A \_\_\_\_\_ works in a library (Give one word).
3. Write the full form of I'll \_\_\_\_\_
4. Fill in the blanks with the opposite of the underlined word:  
The sun appears in the day and the moon at \_\_\_\_\_
5. Write a similar word for 'foolish'.

**Kendriya Vidyalaya Sangathan****Bengaluru Region****Sample Question Paper Set II - Term II Session 2021-22**

Class: III

Max Marks: 40

Subject: English

Time: 2 Hours

**A READING COMPREHENSION****I. Read the passage and answer the questions: (5×1=5)**

Apple Park is an amazing building. It is built in the shape of a circle and is one mile around. Like many of Apple's stores, the round building has lots and lots of glass. There are around 3,000 individual pieces in total. It is the most expensive buildings in the United States.

Apple Park is already famous for its architecture. Because of the size and shape of the building, many people call it Apple's "spaceship" headquarters.

1. What is the shape of the main building?
2. Apple Park is famous for its:  
(a) cost                      (b) architecture                      (c) beauty
3. How many pieces of glass are used to make the main building?
4. Choose the past tense of 'build' from the passage.
5. In which country is the Apple Park situated?

**B Answer the following questions:**

1. Why is the road annoyed with the crow? 2 marks
- 2 Why didn't the child go with the horse? 2 marks
3. For how many weeks can a camel store food in its hump? 1mark

**C GRAMMAR****(10×1=10)**

- (1) The girl puts the pebble (into/in) her mouth.
- (2) Write the past tense of  
climb \_\_\_\_\_.

- (3) .....tell lies. Always speak the truth.(Fill with the opposite )
- (4) Expand **He's** and make a sentence using it.
- (5) Choose the right word and fill in the blank space:  
I do not have \_\_\_\_\_ money to buy fruits. (much, enough)
- (6) Put a tick against the sentence with right punctuation:
- (a) "What a good idea"
- (b) What a good idea.
- (c) What a good idea?
- (d) What a good idea!
- (7) Add "ly" to make a word and fill in the blank:  
The train whistles \_\_\_\_\_ (loud).
- (8) Write the plural form of underlined word:  
Tom's foot got wet in the rain.
- (9) Write the correct form of the word in the bracket and complete the sentence:  
A tiny frog was \_\_\_\_\_ (hop) along the ground.
- (10) Rewrite the sentence after changing the underlined word.  
I could here a lovely song from the radio.

**D CREATIVE WRITING-** Describe the above picture in 5-8 sentences (5)



**E. SPELLING (5× 1=5)**

- (a) A small, smooth, round stone \_\_\_\_\_.
- (b) Place these letters in right order to form the name of an animal:  
P E S H E \_\_\_\_\_.
- (c) Fill in the blanks to spell a word from the story (My Silly Sister)  
N\_\_ U\_\_HTY.
- (d) Underline the silent letter in the word given:  
calm
- (e) Choose the correct word:  
The seals \_\_\_\_\_ into the icy water (dive, drive).

**F. HANDWRITING****(5)**

Honesty is usually regarded as the best policy. Honesty has a real place in every field of life. The present day world gives best chances for the success of honestmen. Honesty alone will give you the right place. It makes you disciplined and happy.

**G. VOCABULARY****(5× 1=5)**

- (1) Give another word for: huge \_\_\_\_\_.
- (2) A baby deer is known as \_\_\_\_\_.
- (3) Circle the rhyming words:  
Who will go to the hill?
- (4) Arrange the movement word from slow to fast:  
run, walk, hop, crawl
- (5) Ant lives in an \_\_\_\_\_ (beehive, anthill).

**Kendriya Vidyalaya Sangathan**

**Bengaluru Region**

**Sample Question Paper Set I- Term II Session 2021-22**

**Class: III**

**Max Marks: 40**

**Subject: English**

**Time: 2 Hours**

**A. READING**

**(5×1=5 )**

**Unseen Passage**

While I was walking to school, I saw an old lady standing next to the road. The road was really busy. It was morning and lot of people were going to work. This means it was difficult to cross the road. So, I asked if she needed some help and we went to the zebra crossing. Then we both crossed the road safely. We all need help sometimes. We should try to help each other whenever we can.

1. Where was the child going?
2. Why was the road busy?
3. Where did they cross the road?
4. What do you learn from this passage?
5. Give a suitable title for the passage.

**B. EXTENDED TEXT QUESTIONS**

1. What does the baby do with the pebbles? **2 marks**
2. Who does the postman bring letters for? **2 marks**
3. Where did the mother tiger and her small cub live? **1 mark**

**C. GRAMMAR**

**(10×1=10)**

1. Write the full form of  
It's - \_\_\_\_\_.
2. Complete the sentence with the correct word:  
A horse \_\_\_\_\_ (neigh, neighs)
3. Complete the blank with right form of word:  
The tiger \_\_\_\_\_ up closer to the tiger cub. (creep)
4. Write the correct form of the word:  
She \_\_\_\_\_ sweetly. (say, sing)

5. Underline the describing word:

The boy's hair was curly.

6. Underline the action word:

The monkey swings by his tail.

7. One: bush; Many : \_\_\_\_\_.

8. My brother lives in Mumbai. ( Change the sentence into plural)

9. The goat and its baby were sleeping under the tree.( Rewrite using the word for a baby goat)

10. Use the correct form of the word in the bracket:

Nutan is \_\_\_\_\_ than Pankaj (tall).

#### D.CREATIVE WRITING

(5)

Complete the story by using the given clues:

Five brothers...always fighting with each other... father called them one day... tied five sticks together... asked them to break the bunch... nobody could break... father untied the bunch... gave a stick to each... told to break... it was easily broken...

Moral of the story is...

#### E.SPELLING

(5×1=5)

(i) Rearrange the letters to make meaningful words:

S E G P A - \_\_\_\_\_

(ii) Tick the correct spelling:

excitement

exitment

exsitement

(iii) Fill in the missing letters:

p \_ b b l \_ s

(iv) Name a creature which crawls \_\_\_\_\_



(v) We \_\_\_\_\_ using a pencil. (write, right)

**F HANDWRITING**

(5)

**Rewrite the given passage:**

Unity is strength. As long as we are united, we can solve any problem. The moment we get separated, we become weak. Tagore also said that the world should not be divided into fragments, but should be treated as a single unit.

**G VOCABULARY**

(5×1=5)

- (i) Find the name of a hidden fruit in the word  
'CANDIDATE' - \_\_\_\_\_
- (ii) Write two rhyming words for  
fare - \_\_\_\_\_ , \_\_\_\_\_
- (iii) The first two letters of the word are missing. Complete with the help of  
given clue:  
\_\_\_\_\_ t t e n (baby cat)
- (iv) Choose the word which means same as the word 'SILENT'  
( quiet, quite )
- (v) Choose the right word and fill in the blank:  
Young one of a cow is \_\_\_\_\_ (calf, kid)

केन्द्रीय विद्यालय संगठन

बेंगलुरु संभाग

प्रश्नपत्र (नमूना) सेट-1 - अवधि II सत्र 2021-22

कक्षा - तीसरी

पूर्णांक - 40 अंक

विषय - हिन्दी

समय- 2 घंटे

अपठित

(5×1=5 अंक )

निम्नलिखित अपठित गद्यांश को पढ़कर प्रश्नों के उत्तर दीजिए ।

एक बार पिता जी बाज़ार से आ रहे थे । उनके हाथ में थैला था । उनके साथ उनका पालतू कुत्ता शेरु भी था । तभी अचानक एक बदमाश आया और पिताजी के थैले को छीनने लगा । शेरु ने देखा और दौड़कर उस बदमाश के ऊपर झपटा । बदमाश डर गया और थैला छोड़कर भाग गया । पिताजी ने शेरु को पुचकारा और घर के लिए चल दिए । शेरु भी उछल - कूदकर पिताजी के साथ चल दिया ।

1. पिताजी कहाँ से आ रहे थे ?
2. पिताजी के हाथ में क्या था ?
3. पालतू कुत्ते का क्या नाम था ?
4. शेरु किसके ऊपर झपटा ?
5. वाक्य पूरा करो । ----- भी उछल-कूदकर----- के साथ चल दिया ।

गद्य / पद्य

दिए गए प्रश्नों के उत्तर दीजिए ।

1. कविता की पंक्तियों को पूरा कीजिए । ( 2 अंक )

एक काबुलीवाले की कहते हैं \_\_\_\_\_

लाल मिर्च को देख गया भर उसके \_\_\_\_\_

2. शिवदास ने गुरुजी की थैली देखकर अपनी गाड़ी क्यों दे दी ? (2 अंक )

3. तीनों भाई किस मौसम में घर की तलाश में निकले ? (1 अंक )

### व्याकरण

(10×1=10 अंक )

1. बहुवचन लिखिए :-  
चटाई -
2. दिए गए वाक्य में से सर्वनाम शब्द छाँटिए ।  
मैंने पत्र लिखा ।
3. दिए गए वाक्य में सही चिन्ह लगाइए । (? , | !)  
वाह कितना सुंदर दृश्य है
4. लिंग बदल कर लिखिए : ----  
नानी - \_\_\_\_\_
5. रंग शब्द से रंगाई शब्द बना है। इसी तरह से और शब्द बनाइये -  
पढ़ - ----- सुन - -----
6. इस वाक्य को ठीक करके लिखिए ।  
पहाड़ी गाँव बाघ का डर बना रहता है ।
7. विशेषता बताने वाला शब्द छाँटिए ।  
मैं खेत से ताज़ा मटर लाया हूँ ।
8. नीचे लिखे वाक्य में काम वाला शब्द बताइए ।  
गुरुजी बाज़ार जाते हैं ।
9. रेखांकित शब्द का विलोम शब्द लिखिए ।  
मेरी बात ठीक है ।
10. सही शब्द चुनकर वाक्य पूरा करिए ।  
रंग के बारे \_\_\_\_\_ मेरी कोई खास पसंद नहीं है । ( मैं , मैं )


## रचनात्मक लेखन

(5 अंक)

चित्र देखिए और दिए गए शब्द - संकेतों की सहायता से चित्र के बारे में पाँच वाक्य लिखिए ।

संकेत- बिन्दु -

(बर्तन धोना , पशुओं को नहलाना , बाल धोना , पानी काला होना , नदी में कूड़ा फेंकना)



## वर्तनी

(5×1=5 अंक )

1. संख्या (12) की वर्तनी लिखिए: -----
2. दिए गए शब्दों में से सही शब्द चुनिए ।  
मिरच , मिर्च
3. सही संयुक्ताक्षर से शब्द पूरा करो । आ ---- म ( स , श्र )
4. शुद्ध करके लिखो ।  
न ज़ मी

5. सही स्थान पर उचित मात्रा लगाकर शब्द लिखो ।

बा र श

**सुलेख**

(5 अंक )

दिये गए अनुच्छेद को सुंदर लिखावट में लिखें -

हमें समय का सदुपयोग करना चाहिए। जो समय को नष्ट करता है , बाद में समय उसको नष्ट कर देता है । हमें समय की कद्र हमेशा करनी चाहिए , केवल तभी हम जीवन में आगे बढ़ सकते हैं ।

**शब्द - भंडार**

(5×1=5 अंक )

1. नीचे लिखे शब्द का तुक वाला शब्द लिखें ।

सर्दी - \_\_\_\_\_ लाल - \_\_\_\_\_

2. आप इस काम के लिए कहाँ जाते हो ?

काँपी - किताब खरीदने \_\_\_\_\_

3. 'वृक्ष' का समान अर्थ वाला शब्द लिखिए ।

4. इस जानवर की बोली (आवाज़) लिखिए -

बकरी - \_\_\_\_\_

5. वाक्यांश के लिए एक शब्द लिखिए ।

मिट्टी के बर्तन बनाने वाले - \_\_\_\_\_

केन्द्रीय विद्यालय संगठन

बेंगलुरु संभाग

प्रश्नपत्र (नमूना) सेट-1 - अवधि II सत्र 2021-22

कक्षा - तीसरी

पूर्णांक - 40 अंक

विषय - हिन्दी

समय- 2 घंटे

अपठित

(5×1=5 अंक )

निम्नलिखित अपठित गद्यांश को पढ़कर प्रश्नों के उत्तर दीजिए ।

एक बार पिता जी बाज़ार से आ रहे थे । उनके हाथ में थैला था । उनके साथ उनका पालतू कुत्ता शेरु भी था । तभी अचानक एक बदमाश आया और पिताजी के थैले को छीनने लगा । शेरु ने देखा और दौड़कर उस बदमाश के ऊपर झपटा । बदमाश डर गया और थैला छोड़कर भाग गया । पिताजी ने शेरु को पुचकारा और घर के लिए चल दिए । शेरु भी उछल - कूदकर पिताजी के साथ चल दिया ।

1. पिताजी कहाँ से आ रहे थे ?
2. पिताजी के हाथ में क्या था ?
3. पालतू कुत्ते का क्या नाम था ?
4. शेरु किसके ऊपर झपटा ?
5. वाक्य पूरा करो । ----- भी उछल-कूदकर----- के साथ चल दिया ।

गद्य / पद्य

दिए गए प्रश्नों के उत्तर दीजिए ।

1. कविता की पंक्तियों को पूरा कीजिए । ( 2 अंक )

एक काबुलीवाले की कहते हैं \_\_\_\_\_

लाल मिर्च को देख गया भर उसके \_\_\_\_\_

2. शिवदास ने गुरुजी की थैली देखकर अपनी गाड़ी क्यों दे दी ? (2 अंक )

3. तीनों भाई किस मौसम में घर की तलाश में निकले ? (1 अंक )

### व्याकरण

(10×1=10 अंक )

1. बहुवचन लिखिए :-  
चटाई -
2. दिए गए वाक्य में से सर्वनाम शब्द छाँटिए ।  
मैंने पत्र लिखा ।
3. दिए गए वाक्य में सही चिन्ह लगाइए । (? , | !)  
वाह कितना सुंदर दृश्य है
4. लिंग बदल कर लिखिए : ----  
नानी - \_\_\_\_\_
5. रंग शब्द से रंगाई शब्द बना है। इसी तरह से और शब्द बनाइये -  
पढ़ - ----- सुन - -----
6. इस वाक्य को ठीक करके लिखिए ।  
पहाड़ी गाँव बाघ का डर बना रहता है ।
7. विशेषता बताने वाला शब्द छाँटिए ।  
मैं खेत से ताज़ा मटर लाया हूँ ।
8. नीचे लिखे वाक्य में काम वाला शब्द बताइए ।  
गुरुजी बाज़ार जाते हैं ।
9. रेखांकित शब्द का विलोम शब्द लिखिए ।  
मेरी बात ठीक है ।
10. सही शब्द चुनकर वाक्य पूरा करिए ।  
रंग के बारे \_\_\_\_\_ मेरी कोई खास पसंद नहीं है । ( मैं , मैं )


## रचनात्मक लेखन

(5 अंक)

चित्र देखिए और दिए गए शब्द - संकेतों की सहायता से चित्र के बारे में पाँच वाक्य लिखिए ।

संकेत- बिन्दु -

(बर्तन धोना , पशुओं को नहलाना , बाल धोना , पानी काला होना , नदी में कूड़ा फेंकना)



## वर्तनी

(5×1=5 अंक )

1. संख्या (12) की वर्तनी लिखिए: -----
2. दिए गए शब्दों में से सही शब्द चुनिए ।  
मिरच , मिर्च
3. सही संयुक्ताक्षर से शब्द पूरा करो । आ ---- म ( स्र , श्र )
4. शुद्ध करके लिखो ।  
न ज़ मी



5. सही स्थान पर उचित मात्रा लगाकर शब्द लिखो ।

बा र श

**सुलेख**

(5 अंक )

दिये गए अनुच्छेद को सुंदर लिखावट में लिखें -

हमें समय का सदुपयोग करना चाहिए। जो समय को नष्ट करता है , बाद में समय उसको नष्ट कर देता है । हमें समय की कद्र हमेशा करनी चाहिए , केवल तभी हम जीवन में आगे बढ़ सकते हैं ।

**शब्द - भंडार**

(5×1=5 अंक )

1. नीचे लिखे शब्द का तुक वाला शब्द लिखें ।

सर्दी - \_\_\_\_\_ लाल - \_\_\_\_\_

2. आप इस काम के लिए कहाँ जाते हो ?

काँपी - किताब खरीदने \_\_\_\_\_

3. 'वृक्ष' का समान अर्थ वाला शब्द लिखिए ।

4. इस जानवर की बोली (आवाज़) लिखिए -

बकरी - \_\_\_\_\_

5. वाक्यांश के लिए एक शब्द लिखिए ।

मिट्टी के बर्तन बनाने वाले - \_\_\_\_\_

## केन्द्रीय विद्यालय संगठन

### बेंगलुरु संभाग

#### प्रश्नपत्र ( नमूना ) सेट- II अवधि II सत्र 2021-2022

कक्षा - तीसरी

पूर्णांक :40

विषय - हिन्दी

समय :2 घंटे

### अपठित

#### निम्नलिखित अनुच्छेद को पढ़कर प्रश्नों के उत्तर दीजिए: (5×1=5अंक)

एक दिन एक हिरन तालाब में पानी पी रहा था कि उसकी नज़र अपनी परछाई पर पड़ी। पानी में अपनी छाया देख कर वह सोचने लगा- वाह ! मेरे सींग कितने सुन्दर हैं। काश, मेरे पैर भी इतने सुन्दर होते! तभी उसके कानों में शिकारी कुत्तों की आवाज़ टकराई, चौंककर वह फुर्ती से दौड़ा। अपने पैर, जिन्हें वह बदसूरत समझता था। उन्हीं की सहायता से वह कूदता हुआ दूर जाकर एक झाड़ी में घुस गया। उसके सुन्दर सींग झाड़ी की टहनियों में बुरी तरह फंस गए थे। वह भागने की कोशिश में था कि तभी शिकारी कुत्ते करीब आ पहुँचे और उसे पकड़ लिया।

#### सही विकल्प चुनकर लिखिए -

- हिरन कहाँ पानी पी रहा था ?  
तालाब में ( ) नदी में ( ) बाल्टी में ( )
- हिरन ने अपनी छाया कहाँ देखी ?  
पानी में ( ) शीशे में ( ) कुँए में ( )
- हिरन के कानों में किसकी आवाज़ टकराई ?  
कुत्तों की ( ) शेर की ( ) हाथी की ( )
- हिरन अपने शरीर के किस हिस्से को बदसूरत समझता था ?  
पैरों को ( ) कानों को ( ) पूँछ को ( )
- 'मदद' शब्द का समान अर्थ वाला शब्द लिखिए - \_\_\_\_\_

## गद्य / पद्य

### निम्नलिखित प्रश्नों के उत्तर लिखिए ।

1. मीरा बहन ने गोपाल आश्रम की स्थापना कहाँ की ? (2 अंक)
2. अवंती ने कपड़ा अलमारी में क्यों रख दिया? सेठ को किस दिन आने को कहा ? (2 अंक)
3. काबुलीवाले के मुँह में क्या देखकर पानी आया ? (1 अंक)

### व्याकरण

1. दिए गए शब्द का बहुवचन लिखिए । (10×1=10 अंक)  
कपड़ा -----
2. विलोम शब्द लिखिए  
अन्दर -----
3. दिए गए वाक्य में विराम चिन्ह लगाइए।  
तुम क्या लाए हो
4. 'नाम वाला शब्द' छाँटकर लिखिए ।  
वह दिल्ली जायेगा ।
5. 'काम वाला शब्द' छाँटकर लिखिए ।  
अमित मैदान में दौड़ता है ।
6. सही शब्द चुनकर 'मुहावरा' पूरा कीजिए ।  
(उजाला , अँधेरा )  
चिराग तले -----

7. दिए गए शब्दों को **सही क्रम** में लगाकर वाक्य बनाइए ।

हुए देखा साँप मैंने रेंगते एक को

8. दिए गए वाक्य में से '**विशेषता वाला शब्द**' छाँटकर लिखिए ।

तितली के पंख सुन्दर होते हैं ।

9. दिए गए शब्द का '**स्त्रीलिंग**' लिखिए ।

शेर -----

10. **सही शब्द** चुनकर वाक्य पूरा कीजिए ।

साँप सड़क की -----जाने लगा । ( ओर / और )

### रचनात्मक लेखन

(5 अंक)

दिए गए चित्र को पहचान कर उसके बारे में पाँच वाक्य लिखिए।



।

**वर्तनी**

(5×1=5अंक)

1. अशुद्ध शब्द को शुद्ध करके लिखिए ।

नरीयल -----

2. वर्णों को सही क्रम में लगाकर शब्द बनाइए ।

त ना क ख र -----

3. दिए गए शब्द पर चन्द्रबिंदु लगाइए ।

चटाइया -----

4. निम्नलिखित "संयुक्ताक्षर वाला कोई एक शब्द लिखिए ।

' च्च' -----

5. 'छूटा हुआ' अक्षर लिखिए ।

झों - डी

### सुलेख

(5 अंक)

दिये गए अनुच्छेद को सुंदर लिखावट में लिखें -

पेड़ हमारे मित्र हैं । पेड़ हमें ऑक्सीजन देते हैं तथा हवा को शुद्ध करते हैं। पेड़ों के कारण बारिश होती है। पेड़ कई सारे जानवरों, पक्षियों, और कीड़ों को रहने के लिए स्थान देते हैं ।

### शब्द भंडार

(5×1=5अंक)

वाक्यांश के लिए एक शब्द लिखिए ।

1. जो खेत में काम करता है---

2. 'कठिन' का विलोम शब्द----

3. जहाँ गेहूँ पिसवाने जाते हैं ----

4. 'तलाश' का समान अर्थ -----

( उचित शब्द भरो । )

5. बीना दौड़ते हुये थक गई थी ----- उसने हार नहीं मानी ।

( इसलिए , लेकिन , और )

**Kendriya Vidyalaya Sangathan**

**Bengaluru Region**

**Sample Question Paper Set I- Term II Session 2021-22**

**Class: III**

**Max Marks: 40**

**Subject: Mathematics**

**Time: 2 Hours**

**Knowledge**

**I. Fill in the blanks :**

**(2X1= 2 marks)**

1. If  $9 \div 9$  then quotient=\_\_\_\_and remainder=\_\_\_\_
2. The product of 8 and 3 = \_\_\_\_\_


**II. Answer the following:**

**(2 x 2 = 4 marks)**

1. Write a multiplication fact for each of these addition facts:

- a.  $8 + 8 + 8 =$  \_\_\_\_\_
- b.  $10 + 10 + 10 + 10 + 10 =$  \_\_\_\_\_

2. Observe the picture and answer :



- a. Number of plates = \_\_\_\_\_
- b. Number of apples in each plate = \_\_\_\_\_
- c. Total number of apples = \_\_\_\_\_
- d. Multiplication fact = \_\_\_\_\_

**III.**

**(4X 1 = 4 marks)**

1 Choose the most appropriate unit of measure from the following and complete the table .

( 1 Litre, 1Kg, 50ml, 20g)

Sl. No.	Things required	Right quantity
1.	Rice for 5 people	
2.	Water for a day for a person	
3.	Salt for one dish for a family	
4.	Oil for a dish for a family	

**Understanding Basic Concepts**

**I Fill in the blanks :**

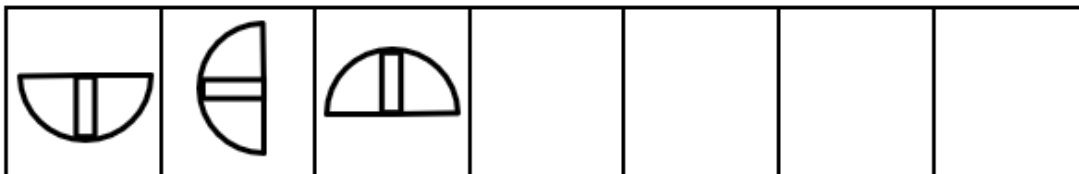
**(2X1 = 2 marks)**

1. Half litre = \_\_\_\_\_ millilitres.
2. If 100 is subtracted from 897 , the number you get is \_\_\_\_\_.

**II Do as directed :**

**(2x 2 = 4marks)**

1. Extend the pattern to four more places :



2. Classify the following into odd or even numbers:

47, 98, 53, 50

- a. Even numbers- \_\_\_\_\_
- b. Odd numbers- \_\_\_\_\_

(4X1= 4 marks)

III . Observe the table and answer the questions given below:

Favourite Sweet	Number of children
Jalebi	3
Kaju barfi	14
Laddoo	7
Mysore pak	25
Rasgulla	9
Total children =	

- Most favourite sweet is \_\_\_\_\_.
- Least favourite sweet is \_\_\_\_\_.
- Children who like Kaju barfi are \_\_\_\_\_ ( less / more ) than children who like Rasgulla .
- Total number of children \_\_\_\_\_

**Ability in Computation**

I. Insert the correct sign : ( + , ÷ , - , x , = ) (2X 1 = 2marks)

1.  $6 \square 2 = 12$

2.  $70 \square 10 = 7$

II. Solve the following: (2 x 2 = 4 marks)

1. Arrange in columns and add : Rs 26 . 75 and Rs 14 . 40

2. Arrange in columns and subtract : Rs 63 . 25 from Rs 204 . 50



( 4x 1= 4 Marks )

- III. If these balloons are shared equally among 3 girls. How many balloons will each girl get?



- a. Number of balloons = \_\_\_\_\_  
b. Number of girls = \_\_\_\_\_  
c. \_\_\_\_\_ ÷ \_\_\_\_\_ = \_\_\_\_\_  
d. Each girl gets \_\_\_\_\_ balloons.

### Problem Solving Ability

I Choose the correct answer :

( 1 x 2 = 2 Marks )

1. Find the difference between the place value of 4 and 6 in the number 465.

a. 300      b. 340      c. 360      d. 400

2. A box holds 10 pencils. How many boxes are needed for 110 pencils?

a. 10      b. 5      c. 9      d. 11

II . Solve the following:

( 2 x 2= 4 Marks )

1. If there are 56 candles packed equally in 7 boxes, then how many candles are there in each box?
2. Observe the price tag of each item given below and find the cost of :




a. One doll and one biscuit packet = Rs \_\_\_\_\_

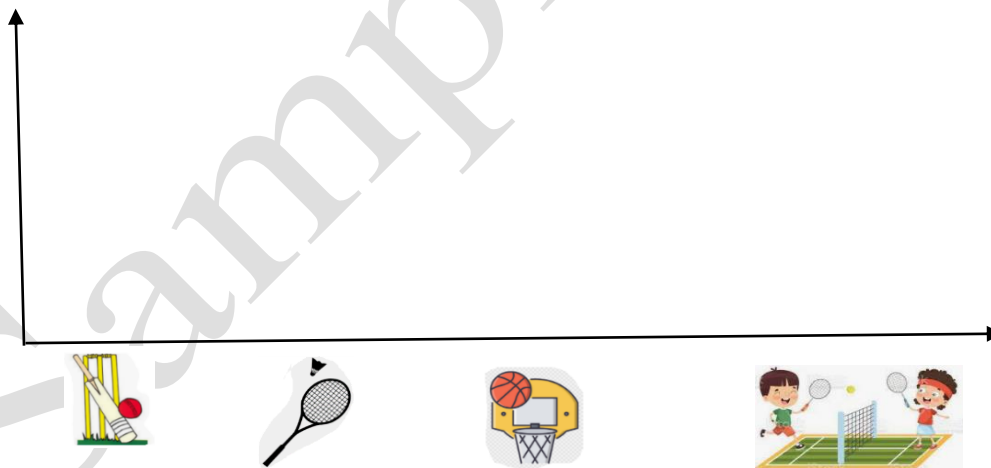
b. 3 cars and one biscuit packet = Rs \_\_\_\_\_

(4X1 = 4 marks)

III The following information was collected in a class regarding "Favourite game"

Use this information and draw  for each child on top of the game they like in the space given below

Game	Cricket	Badminton	Basketball	Tennis
Number of children	4	8	5	3



a. How many students are there in the class? \_\_\_\_\_

b. Most students like \_\_\_\_\_

**Kendriya Vidyalaya Sangathan**

**Bengaluru Region**

**Sample Question Paper Set II- Term II Session 2021-22**

**Class: III**

**Max Marks: 40**

**Subject: Mathematics**

**Time: 2 Hours**

**Knowledge**

**I. Choose the correct answer : (2X1= 2 marks)**

1. Multiplication is repeated \_\_\_\_\_ ( addition / subtraction )
2. The weight of a school bag can be measured using a \_\_\_\_\_  
( metre scale / weighing machine )

**II. Do as directed: (2 x 2 = 4 marks)**

1. Observe the picture and write



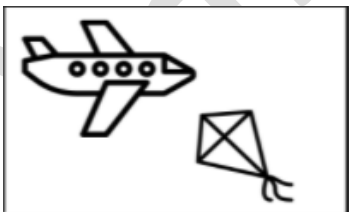
a) There are \_\_\_\_\_ rabbits .

b) Multiplication fact \_\_\_\_\_

2. Write the name of the heavier object in each of the following:

a) \_\_\_\_\_


b) \_\_\_\_\_



**III. Complete the multiplication tree :**

**(1 X4= 4 marks)**

(clue - ..... x ..... =30)



## Understanding Basic Concepts

I. Fill in the blanks :

(2X1= 2 marks)

1.



= Total= \_\_\_\_\_ Rupees

2. Two dozen apples = \_\_\_\_\_ apples

II. Do as directed :

(2 x 2 = 4 marks)

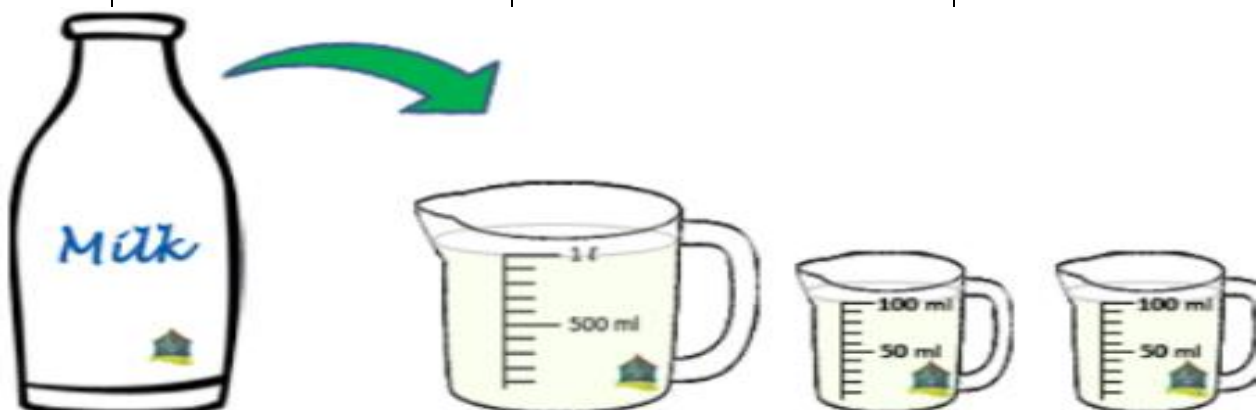
1. Keerthi has a bottle filled with milk . She pours the milk into the following measuring cups. Now , what is the(total ) capacity of the bottle ?

2. Decode the secret message :

3W3E 3L3I3K3E 3M3A3T3H3E3M3A3T3I3C3S

III. Write the most appropriate unit of measure for the following : (1 X 4= 4 marks)  
( litres , kilograms , millilitres , grams )

a. Rice bag	
b. Turmeric powder	
c. Eye drops	



## Ability in Computation

### I Fill in the blanks :

(2X1 = 2marks)

1. 4 tens more than 700 is \_\_\_\_\_
2. Find the quotient :  $54 \div 6 =$  \_\_\_\_\_

### II Solve the following :

(2 x 2= 4 marks)

- 1 Using the expanded notation complete the table and find the product:

$$32 \times 14 = \underline{\hspace{2cm}}$$

X	30	2
10	300	
4		

2. Extend the pattern to two more places.

- a) 6, 8, 11, 15, 20, \_\_\_\_\_, \_\_\_\_\_
- b) 19, 17, 15, 13, \_\_\_\_\_, \_\_\_\_\_

### III. Complete the Cash Memo :

(4X1= 4 marks)

#### CASH MEMO

Item	Rate per Item	Quantity	Rs	P
Notebooks	25.00	3		
Pens	12.00	5		
Dairy milk chocolate	7.00	1	7	00
Frooti	14.00	2		
		Total		






#### Problem Solving Ability

### I. Choose the correct answer:

(2X1 = 2marks)

1. Tick the number that is less than 75 but greater than 50?

- a. 43                      b. 37                      c. 72                      d. 84

2. One  is equal to 3 birds.     = \_\_\_\_ birds
- a. 3                      b. 12                      c. 15                      d. 18

**II. Solve the following :**





**(2 x 2 = 4marks)**

- 1 A book has 72 pages. What will be the total number of pages in 4 such books?
- 2 Rajini has 28 kg mangoes to sell. She sold all the mangoes equally to 4 men. How many mangoes did each man get ?

**III. Observe the smart chart and answer:**

**(1X4 = 4 marks)**

Use the given information and draw  for each vehicle on top of the picture given below .

Mode of Transport	Bus	Car	Bicycle	Scooter
Number of vehicles	3	7	5	2
				



- a. The number of bicycles is \_\_\_\_\_ than the number of scooters .  
( more / less )
- b. Total number of vehicles = \_\_\_\_\_

**Kendriya Vidyalaya Sangathan**

**Bengaluru Region**

**Sample Question Paper Set III- Term II Session 2021-22**

**Class: III**

**Max Marks: 40**

**Subject: Mathematics**

**Time: 2 Hours**

**Knowledge**

**I. Fill in the blanks: (2X1=2marks)**

1. 3 kg = \_\_\_\_\_ g
2. In  $18 \div 2 = 9$  , The quotient is \_\_\_\_\_

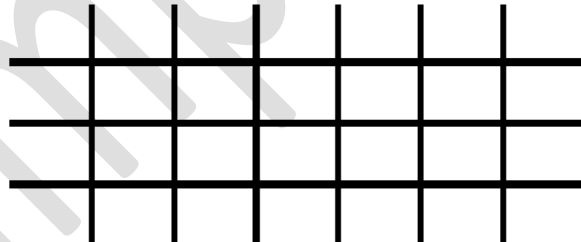
**II. Do as directed: (2 x 2 = 4 marks)**

1. Write the correct unit used to measure the following : ( millilitre / litre )

- a. A bucket of water : \_\_\_\_\_      b. A cup of tea : \_\_\_\_\_



2. Look at the arrangement of sticks and write the \_\_\_\_\_ :























- a. number of horizontal Sticks = \_\_\_\_\_
- b. Multiplication fact : \_\_\_\_\_

2. Observe the smart chart and answer :

( 1X4= 4 marks)

**Fruit**

				
				
				
				
				
				
banana	apple	pineapple	orange	pear

- How many pears are there ? \_\_\_\_\_
- How many bananas are there ? \_\_\_\_\_
- There are 6 \_\_\_\_\_.
- There are \_\_\_\_\_ fruits in all .

### Understanding Basic Concepts

I. Choose the correct answer :

(2X1= 2 marks)

1. What comes next in this pattern :

AB 12 , CD 34 , EF 56 , \_\_\_\_\_ ?

- a. IJ 78      b. GH 78      c. KL 78      d. MN 78

2. \_\_\_\_\_ is an even number .

- a. 235      b. 316      c. 509      d. 473

II. Do as directed :

( 2 x 2 = 4marks)

1. Decode the secret message :

**HCIHW KOOB ERA UOY GNIDAER**

2. Write the division fact for the given multiplication facts:

Multiplication Fact	Division Fact
$7 \times 8 = 56$	
$4 \times 8 = 32$	



**III Guess their weights and match.**

**(4X1 = 4 marks)**

- |             |                      |          |
|-------------|----------------------|----------|
| a) Mango    | i) More than 1000 kg | (      ) |
| b) Elephant | ii) 80 kg            | (      ) |
| c) Dog      | iii) 400 kg          | (      ) |
| d) Cow      | iv) Less than 1 kg   | (      ) |

**Ability in Computation**

**( 2x1=2 marks)**

**I Add the given money and write the total in the space provided in each of the following**

:

a)




b)




**II Do as directed :**

**(2 x 2 = 4marks)**

1. Complete the table :

Multiplication fact	Addition fact	Product
2 x 5	Example : 5 + 5	10
6 x 3		
4 x 8		

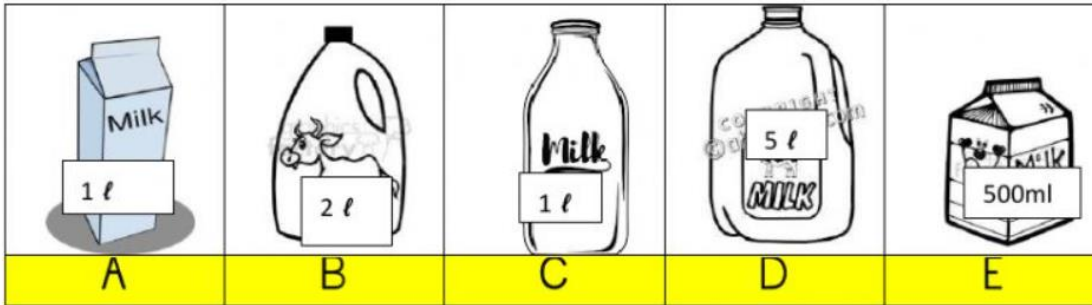
2. Observe carefully the attendance sheet of students of class III and fill in the blanks given below

Class and Section	Total strength	Number Present	Number Absent
III-A	40	38	2
III-B	42	36	4
Total class: III			6

a) Total number of students present in the class III is \_\_\_\_\_.

b) Total strength in class III is \_\_\_\_\_.

**III Look at the following picture and answer the questions given below: (1 x 4 = 4 marks)**




- a. Quantity of milk in containers A and C = \_\_\_\_\_
- b. Quantity of milk in containers B + E = \_\_\_\_\_
- c. Container D has \_\_\_\_\_ ( more / less ) milk than container B
- d. Quantity of milk in all the containers A + B + C + D + E = \_\_\_\_\_

**Problem Solving Ability**

**I Do as directed : ( 2X1 = 2marks)**

1. Extend the pattern to one more place:



2. Ruhi writes a number pattern as 5 , 10 , 15 , 20 , 25 , ...  
What is the rule followed in this pattern ? Rule : \_\_\_\_\_






**II Solve the following : (2 x 2 = 4 marks)**

- 1. Rani and her friends went to a circus. They bought 8 tickets . Cost of each ticket was Rs 60 . How much did they spend on tickets ?
- 2. Ravi is packing 48 eggs into boxes . Each box holds 6 eggs . How many boxes will he need to pack all the eggs ?

**III Do as directed.**

**(1X4=4marks)**

1. Sonu visited a park . She saw the following in the park while playing . Help Sonu to find out how many of these she saw by answering the questions given below:

	TALLY
 spider	
 ant	
 snail	
 butterfly	
 bee	

- a. Which insect did Sonu see more? \_\_\_\_\_
- b. How many butterflies did she see? \_\_\_\_\_
- c. Number of spiders are \_\_\_\_\_ ( more / less ) than the number of snails
- d. Bees are \_\_\_\_\_ more than butterflies. ( 2/ 3/ 4)

**Kendriya Vidyalaya Sangathan**

**Bengaluru Region**

**Sample Question Paper Set :1 - Term II Session 2021-22**

**Class: III**

**Max Marks: 40**

**Subject: EVS**

**Time: 2 Hours**

**OBSERVATION AND REPORTING**

Each question carries one mark

(10x1=10 marks)

**I. Observe the pictures and do as directed.**

1) Name this personality who invented the Braille Script. \_\_\_\_\_



2) \_\_\_\_\_ is used as a remedy for toothache.



3) This type of pot is known as \_\_\_\_\_.



4) \_\_\_\_\_ is the root of a plant that we eat as food.



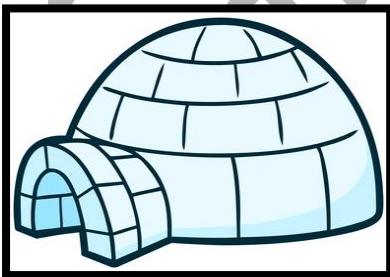
5) \_\_\_\_\_ is a famous Badminton player.



6) He delivers our letters \_\_\_\_\_.



7) Name this house. \_\_\_\_\_



8) What does this signboard stand for? \_\_\_\_\_



9) This is a \_\_\_\_\_ family.



10) A \_\_\_\_\_ doctor treats sick animals.



**IDENTIFICATION AND CLASSIFICATION**

**15Marks**

**I. Do as directed**

**(5x1=5 marks)**

**1) Choose the correct answer**

a) The oldest and cheapest means of communication

i) aerogramme

ii) post card

iii) inland letter

iv) envelope

b) Braille script is based on \_\_\_\_\_ points.

i) 6

ii) 10

iii) 4

iv) 8

2) Identify this game which is played with a ball. \_\_\_\_\_



3) Encircle the odd one out

i) butterfly

ii) parrot

iii) soil

iv) dog

4) Fill in the blanks

North, South, East and West are the four \_\_\_\_\_.

**II. Answer the following questions**

**(3x2=6marks)**

1) Observe the picture carefully and write two ways by which water can be reused.



2) The names of some food items are given in the box. Classify them based on their source.

Milk, turmeric, corn, honey, spinach, ajwain, fish, egg

Food items from animals	Food items from plants

3) We have five sense organs. Mention two activities during which we use more than one sense organ.

**III. Observe the picture and answer the following questions** (1x4=4 marks)



- 1) Name this type of house. \_\_\_\_\_
- 2) Why are these houses made on bamboo pillars?
- 3) What kind of roofs do these houses have?
- 4) Why are the roofs made like these?

**DISCOVERY OF FACTS**

**(15 marks )**

**I. Choose the correct answer**

**( 5X 1= 5marks)**

1) a) World Animal Day is celebrated on

- |                               |                              |
|-------------------------------|------------------------------|
| i) 5 <sup>th</sup> June       | ii) 4 <sup>th</sup> October  |
| ii) 14 <sup>th</sup> November | iv) 15 <sup>th</sup> October |

b) Tank bunds are commonly found in

- |             |                      |
|-------------|----------------------|
| i) Assam    | ii) Rajasthan        |
| iii) Punjab | iv) Himachal Pradesh |

2) Fill in the blanks

a) \_\_\_\_\_ is our national game.



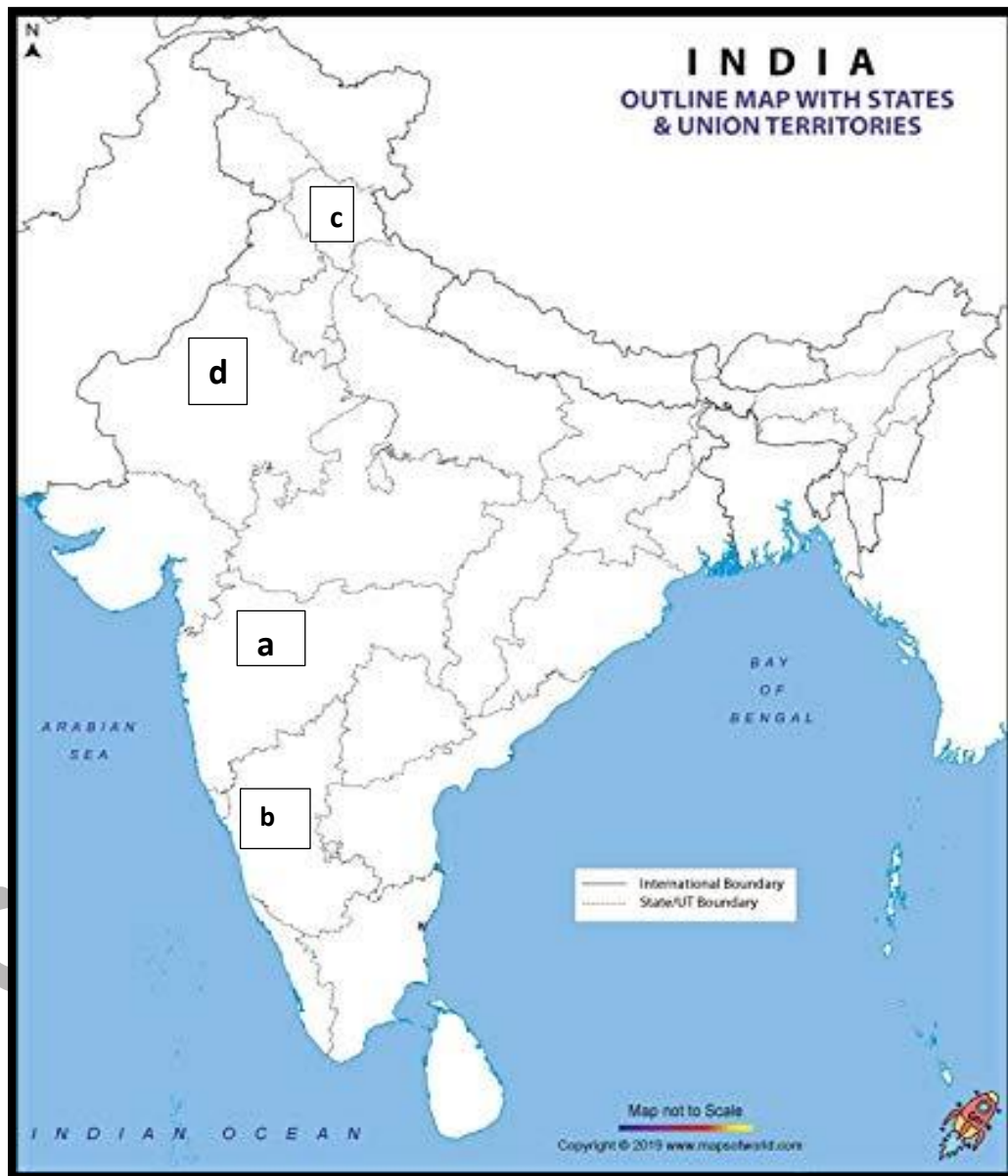
b) \_\_\_\_\_ in a map help us to locate a place easily.

c) \_\_\_\_\_ is the capital of India.

**II. Do as directed.**

**(3x2=6 marks)**

A. Identify the states marked in the map of India.



a) \_\_\_\_\_

b) \_\_\_\_\_

c) \_\_\_\_\_

d) \_\_\_\_\_

**B. Answer the following questions**

- 1) What are natural fibres? Give two examples.
- 2) What values and things do we learn when we are the part of a family?

(write any 4)


**III. Answer the following question**

**(4marks)**

a) What is a food chain?

b) Draw the picture of a food chain using the following.

grass	snake	eagle	frog	grasshopper
-------	-------	-------	------	-------------



c) A food chain always starts with a \_\_\_\_\_.

**Kendriya Vidyalaya Sangathan**

**Bengaluru Region**

**Sample Question Paper Set :2 - Term II Session 2021-22**

**Class: III**

**Max Marks: 40**

**Subject: EVS**

**Time: 2 Hours**

**OBSERVATION AND REPORTING**

**10 marks**

**I Observe the pictures and answer the questions.**

**(10x1=10 marks)**


- 1) Name this type of house found in Jammu and Kashmir.



- 2) \_\_\_\_\_ people move around with the help of this white cane.



- 3) Name the bird in the picture.



4) This is a \_\_\_\_\_ family.




5) What does this sign board stand for? \_\_\_\_\_



6) \_\_\_\_\_ is the flower of a plant that we eat as food.



7) A \_\_\_\_\_ makes beautiful pots.




8) \_\_\_\_\_ is used for ploughing the field.



9) This house stands on \_\_\_\_\_ pillars.



10) \_\_\_\_\_ is a special way of reading and writing for people who cannot see.



**IDENTIFICATION**

**15 marks**

**I. Do as directed**

**( 5x1=5 marks)**

1) Choose the correct answer

a) There are \_\_\_\_\_ players in a football team.

- i) 12      ii) 10      iii) 14      iv) 11

b) Dice is related to

- i) carrom      ii) chess      iii) ludo      iv) cards

2. Fill in the blanks

a) A drawing of a place on a flat surface is called a \_\_\_\_\_.

b) Igloo is made of \_\_\_\_\_.

3) Circle the odd one out

cabbage

mint


potato

spinach


II Answer the following questions

( 3x2=6 marks)

- 1) Write any one difference between natural and artificial fibres. Give one example for each.
- 2) Look at the map and answer the questions.



- a) How many houses are there in the map?
  - b) What is near the bus stop?
  - c) Is the post office closer to the school or the hospital?
  - d) How many hand pumps are there in the map?
- 3) Observe the picture and answer the questions.



a) In order to send this post card to your friend, what will you write on the lines given. \_\_\_\_\_

b) What is the full form of the six-digit number that is written in the boxes?

\_\_\_\_\_.

c) Identify the personality seen on the post card.

d) Name another method of communication through writing which can be sent through a post office.

\_\_\_\_\_

**III. Answer the following question**

**(1 X 4 = 4 marks)**

1) Write the steps required for making a pot.

**DISCOVERY OF FACTS**

**15 marks**

**I. Do as directed.**

A. Encircle the correct answer

**(5 X 1 = 5 marks )**

1) To send a letter to your uncle living in another country you use \_\_\_\_\_

a) post card

b) aerogramme

b) envelope

d) inland letter

B. Give an example of

a) A public place where you have seen a telephone: \_\_\_\_\_.

b) Game which we play with a ball \_\_\_\_\_.

c) Unstitched cloth \_\_\_\_\_.

C. Correlate

water : river ; clay : \_\_\_\_\_

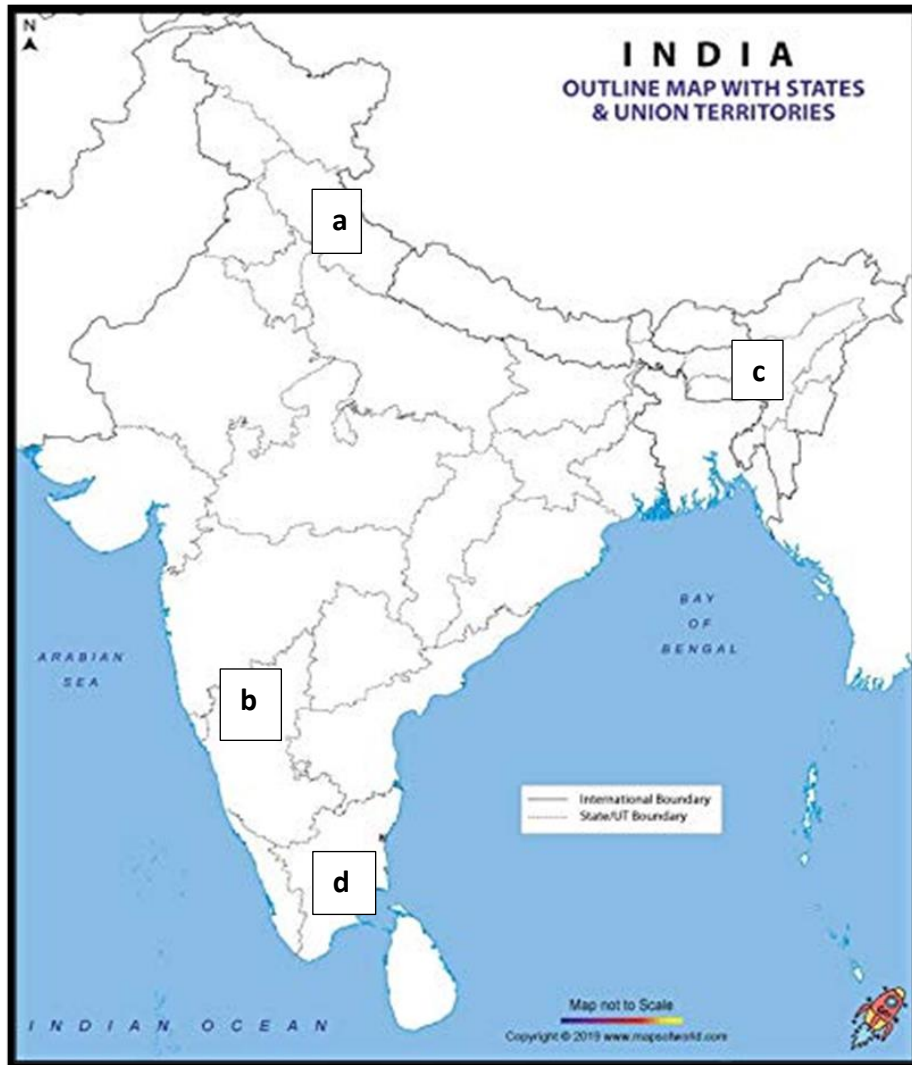
**II. Answer the following questions**

**( 3 X 2= 6 marks)**

1) The walls of the mud houses are very thick in places like Rajasthan. Why?

2) List any four ways of saving water in your house.

3) Identify the states marked in the map of India.



- a) \_\_\_\_\_
- b) \_\_\_\_\_
- c) \_\_\_\_\_
- d) \_\_\_\_\_

III. Answer the following questions.

(4 marks)

- a) How will you look after your pet/domestic animal. (Suggest any three ways)
- b) Draw and colour your pet animal.



Kendriya Vidyalaya Sangathan

Bengaluru Region

Sample Question Paper Set :3 - Term II Session 2021-22

Class: III

Max Marks: 40

Subject: EVS

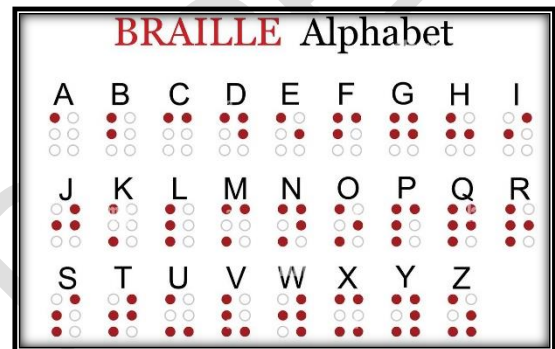
Time: 2 Hours

**OBSERVATION AND REPORTING (10 Marks)**

**I. Observe the picture and answer the questions (10x1=10 marks)**

1) Write EVS in Braille script

.....



2) ..... is the

stem of a plant that we eat as food.



3) This type of pot is known as \_\_\_\_\_ .



4) Name this type of house

.....




5) Name this woman sports personality

.....



6) What does this signboard

indicate?.....



7) In olden days people used.....

to get their messages across.



8) Tick the living thing.



9) This is a farm tool which is used for digging the clay from the clay pit.  
.....



10) Name this medicinal plant  
.....



**IDENTIFICATION ( 15 Marks)**

**I. Do as directed.**

**(5x 1= 5 Marks)**

**A. Encircle the correct answer**

- 1) This type of house has a semicircular roof  
a) stilt house b) mud house c) igloo d) villa
- 2) A small family is also known as a  
a) nuclear family b) joint family c) big family

**B. Fill in the blanks.**

1) The fibres which are made from various chemicals by man are called ..... fibres.

2) The ..... members resemble each other in their physical features and habits .

**C. Correlate**

clay :soil; wood : .....

## II. Do as directed

(3x 2=6 marks)

1. Classify the given games as *Indoor or Outdoor*

hopscotch ( stapoo), carrom, chess , kabaddi , gilli-danda, snake and ladder, cricket, ludo .

Indoor	Outdoor
1	1
2	2
3	3
4	4

2) Observe the picture carefully and answer the questions.

Picture A



Picture B



a) In which picture do you observe a differently abled person?

.....

b) In what way is he differently abled?

.....

c) How did you identify it?

.....

d) If you see such a person on the road how would you help him?

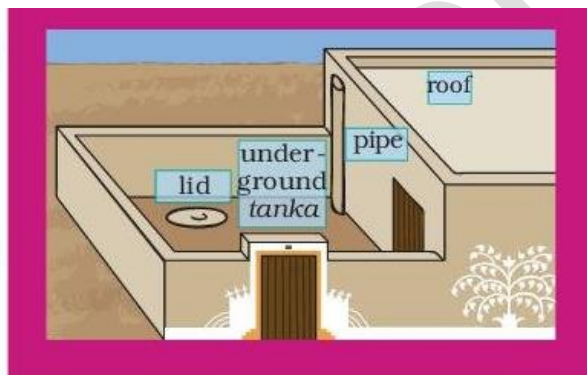
.....  
.....

3) Write any two differences between a houseboat and other types of houses.



House Boat	Other types of houses

III. Observe the picture and answer the questions given below. ( 4 marks)



1) What is rain water harvesting?

2) Complete the steps involved in making a tanka.

- a) Dig a pit in the courtyard
- b) .....
- c).....
- d) .....
- e)The water is used for drinking after it.

## DISCOVERY OF FACTS

15 Marks

### I) Choose the correct answer.

( 5x 1 = 5 marks)

a) World White Cane Safety Day is celebrated on

- 1) 15<sup>th</sup> October   2) 5<sup>th</sup> June   3) 4<sup>th</sup> October   4) 3<sup>rd</sup> March

b) It is a wild animal.

- 1) goat   2) lion   3) cow   4) horse

2) Fill in the blanks

a) Collecting stamps as a hobby is called .....

b) An animal which helps to pull the cart -----

c) An example for natural fibre.....

### II) Answer the following questions.

( 2x3=6 Marks)

#### 1) Give reasons

a) In hilly areas like Manali in Himachal Pradesh houses are made with sloping roofs.

b) At night the ladder is removed from the stilt houses in Assam.

2) This is Rita in the centre


Draw neatly and colour

a) A tree behind Rita

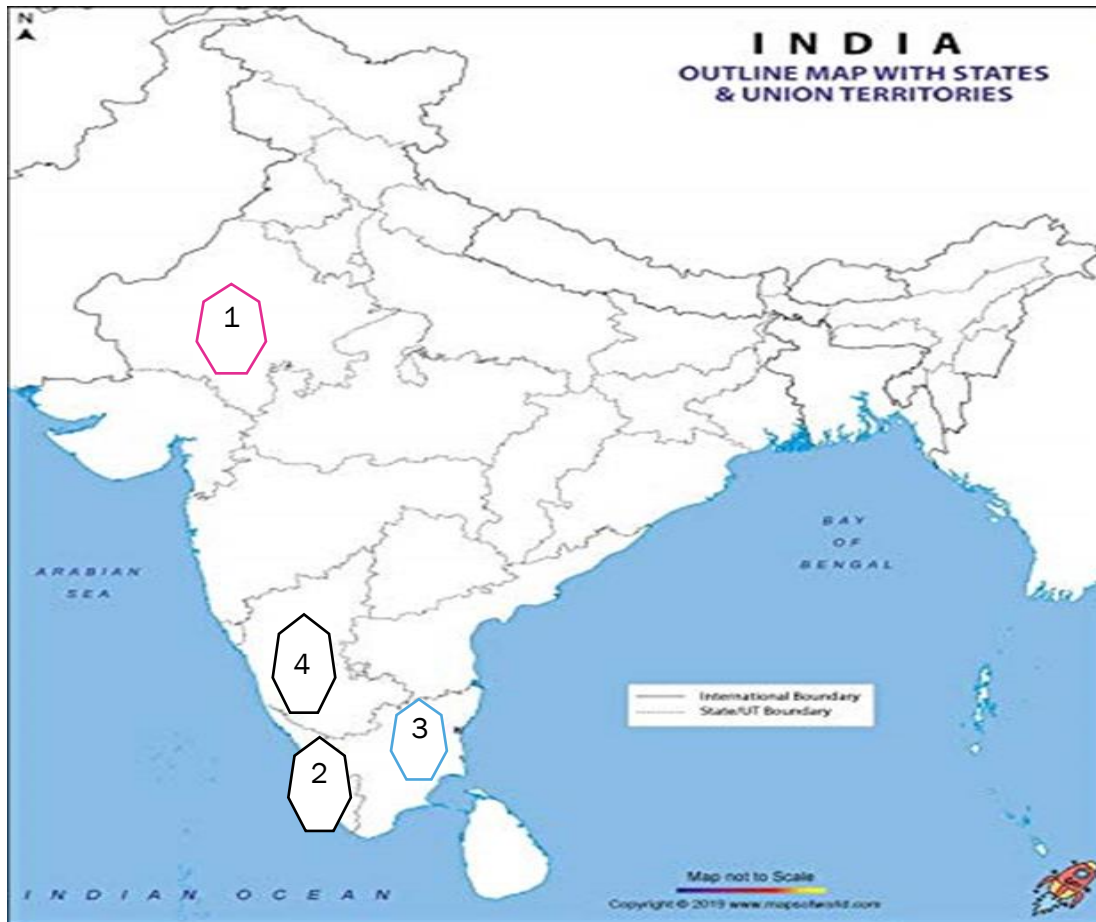
b) A bird on Rita's right

c) A toy on Rita's left

d) A pot in front of Rita



2) Identify the states marked in the given map of India.



1 .....

2.....

3.....

4.....

III. Observe the picture and answer the following questions (4x1=4 Marks)

1) Which type of building is this ?

2) Name one city of India where these type of buildings are seen.

3) How do people climb up in these type of buildings?

4) Why do people make high buildings like this?



**Kendriya Vidyalaya Sangathan Bangalore Region**

**Blue Print -II Term End Exam 2021-22**

Class : III  
Subject : English

Total Marks-40  
Time – 1 hour

Sl No.	Chapter/Lesson/Poem	Total marks	VSA	SA	LA	No. of questions
1.	Reading Comprehension (Unseen)	5	5			5
2.	<b>PROSE /POEM</b>					
	My Silly Sister	2		1		1
	What's in My Mail Box?	2		1		1
	Little Tiger, Big Tiger	1	1			1
3.	<b>GRAMMAR</b>					
	Little Tiger, Big Tiger	2	2			2
	How Creatures Move?	2	2			2
	Don't Tell	2	2			2
	He's My Brother	1	1			1
	How Creatures Move?	2	2			2
	The Ship of the Desert	1	1			1
4.	<b>SPELLING</b>					
	Train (Poem)	1	1			1
	The Story of the Road	1	1			1
	Puppy and I (Poem)	1	1			1
	How Creatures Move?	1	1			1



	Don't Tell	1	1			1
5.	<b>CREATIVE WRITING</b>					
	General – Developing a story through hints (or)	5			1(5)	1
	Paragraph Writing (or)					
	Picture Composition /any other					
6.	<b>VOCABULARY</b>					
	Train (Poem)	1	1			1
	Puppy and I (Poem)	1	1			1
	Little Tiger, Big Tiger	1	1			1
	My Silly Sister	1	1			1
	How Creatures Move?	1	1			1
	The Ship of the Desert					
7.	<b>Handwriting – A value based passage (25 to 30 words)</b>	5				
	<b>TOTAL</b>	<b>40</b>				<b>29</b>

**Kendriya Vidyalaya Sangathan Bangalore Region**

**Blue Print -II Term End Exam 2021-22**

**Class : III**

**Total Marks-40**

**Subject: Mathematics Time – 1 hour**

CHAPTERS	KNOWLEDGE-10			UBC-10			AC-10			PSA-10			TOTAL MARKS
	VSA	SA	LA	VSA	SA	LA	VSA	SA	LA	VSA	SA	LA	
Who is Heavier?			1(4)										4
How Many Times?		1(2)					1(1)				1(2)		5
Play With Patterns					1(2)			1(2)			1(2)		6
Jugs and Mugs	1(1)									1(1)			2
Can We Share?		1(2)		1(1)				1(2)	1(4)	1(1)			10
Smart Charts						1(4)						1(4)	8
Rupees and Paise	1(1)			1(1)	1(2)		1(1)						5
<b>TOTAL</b>													<b>40</b>

**Kendriya Vidyalaya Sangathan Bangalore Region**

**Blue Print -II Term End Exam 2021-22**

**Class : III**  
**Subject : EVS**

**Total Marks-40**  
**Time – 1 hour**

CHAPTERS	OBSERVATION-10			IDENTIFICATION-15			DISCOVERY OF FACTS-15			TOTAL MARKS
	VSA	SA	LA	VSA	SA	LA	VSA	SA	LA	
Sharing our Feelings				1(1)	1(2)		1(1)			4
The Story of Food	2(1)							1(2)		4
Making Pots	1(1)			1(1)						2
Games we Play	1(1)			1(1)			1(1)			3
Here comes a letter	2(1)							1(2)		4
A House like this	1(1)					1(4)				5
Our Friends-Animals	1(1)			1(1)			1(1)			3
Drop by drop							1(1)	1(2)		3
Families can be different	1(1)				1(2)					3
Left-Right	1(1)			1(1)			1(1)			3
A Beautiful Cloth					1(2)					2
Web of Life									1(4)	4
<b>TOTAL</b>	<b>10(1)</b>			<b>5(1)</b>	<b>3(2)</b>	<b>1(4)</b>	<b>5(1)</b>	<b>3(2)</b>	<b>1(4)</b>	<b>40</b>

Class : III  
Subject : Hindi

Total Marks-40  
Time – 1 hour

Sl No.	विषय/पाठ	कुल अंक	VSA	SA	LA	प्रश्न संख्या
1.	<b>अपठित गद्यांश</b>	<b>5</b>	<b>5</b>			<b>5</b>
2.	<b>गद्य/ पद्य</b>					
	कब आऊँ	<b>2</b>		<b>1</b>		<b>1</b>
	मीरा बहन और बाघ	<b>2</b>		<b>1</b>		<b>1</b>
	मिर्च का मज़ा	<b>1</b>	<b>1</b>			<b>1</b>
3.	<b>व्याकरण</b>					
	क्योंजीमल और कैसेकैसलिया	<b>3</b>	<b>3</b>			<b>3</b>
	मीरा बहन और बाघ	<b>2</b>	<b>2</b>			<b>2</b>
	जब मुझको साँप ने काटा	<b>2</b>	<b>2</b>			<b>2</b>
	मिर्च का मज़ा	<b>1</b>	<b>1</b>			<b>1</b>
	सबसे अच्छा पेड़	<b>2</b>	<b>2</b>			<b>2</b>
4.	<b>वर्तनी</b>					
	कब आऊँ	<b>1</b>	<b>1</b>			<b>1</b>
	क्योंजीमल और कैसेकैसलिया	<b>1</b>	<b>1</b>			<b>1</b>
	मीरा बहन और बाघ	<b>1</b>	<b>1</b>			<b>1</b>
	जब मुझको साँप नेकाटा	<b>1</b>	<b>1</b>			<b>1</b>

	सबसे अच्छा पेड़	1	1			1
5.	<b>रचनात्मक लेखन</b>					
	अनुच्छेद लेखन या	5			1(5)	1
	चित्र देखकर वाक्य लिखना					
6.	<b>VOCABULARY</b>					
	कब आऊँ	1	1			1
	क्योंजीमल और कैसेकैसलिया	1	1			1
	मेरा बहन और बाघ	1	1			1
	जब मुझको साँप नेकाटा	1	1			1
	सबसे अच्छा पेड़	1	1			1
7.	<b>सुलेख – एक अनुच्छेद (25 से 30 शब्द)</b>	5				
	<b>कुल</b>	<b>40</b>				<b>29</b>